

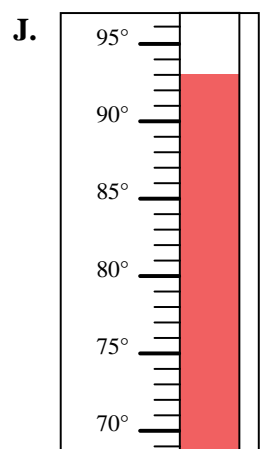
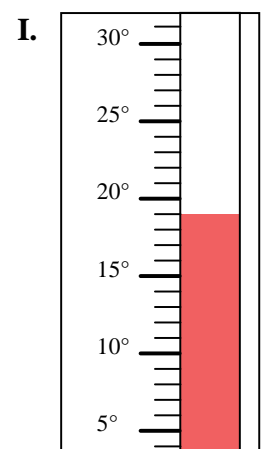
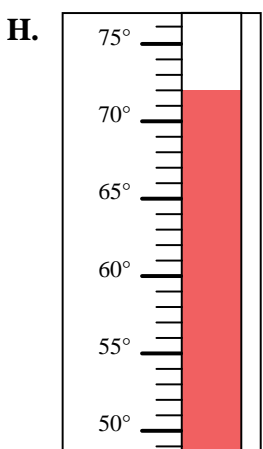
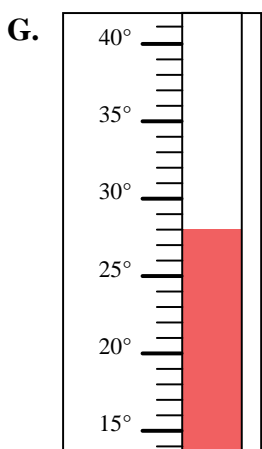
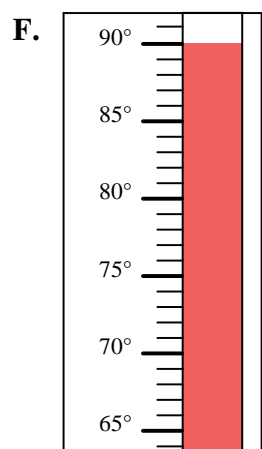
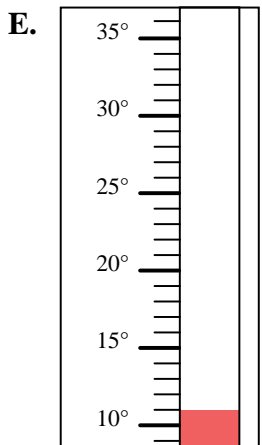
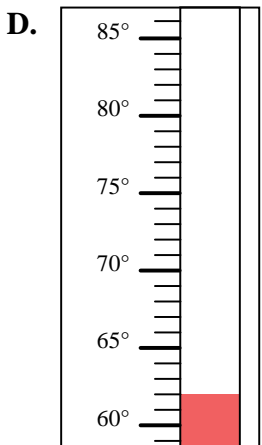
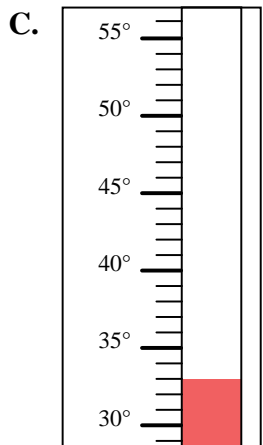
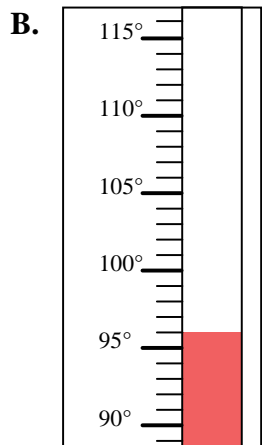
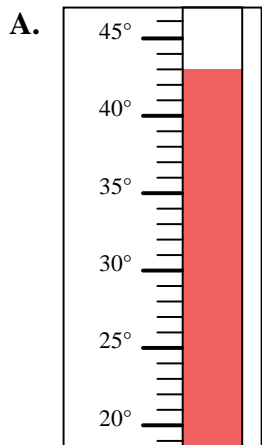


Determine which letter best answers each question.

**Answers**

- 1) Which thermometer best represents the temperature 62°?
- 2) Which thermometer best represents the temperature 43°?
- 3) Which thermometer best represents the temperature 72°?
- 4) Which thermometer best represents the temperature 33°?
- 5) Which thermometer best represents the temperature 11°?
- 6) Which thermometer best represents the temperature 93°?
- 7) Which thermometer best represents the temperature 96°?
- 8) Which thermometer best represents the temperature 19°?
- 9) Which thermometer best represents the temperature 28°?
- 10) Which thermometer best represents the temperature 90°?

1. \_\_\_\_\_
2. \_\_\_\_\_
3. \_\_\_\_\_
4. \_\_\_\_\_
5. \_\_\_\_\_
6. \_\_\_\_\_
7. \_\_\_\_\_
8. \_\_\_\_\_
9. \_\_\_\_\_
10. \_\_\_\_\_





Determine which letter best answers each question.

**Answers**

- 1) Which thermometer best represents the temperature 62°?
- 2) Which thermometer best represents the temperature 43°?
- 3) Which thermometer best represents the temperature 72°?
- 4) Which thermometer best represents the temperature 33°?
- 5) Which thermometer best represents the temperature 11°?
- 6) Which thermometer best represents the temperature 93°?
- 7) Which thermometer best represents the temperature 96°?
- 8) Which thermometer best represents the temperature 19°?
- 9) Which thermometer best represents the temperature 28°?
- 10) Which thermometer best represents the temperature 90°?

1.     **D**
2.     **A**
3.     **H**
4.     **C**
5.     **E**
6.     **J**
7.     **B**
8.     **I**
9.     **G**
10.     **F**

