



Use the visual model to solve each problem.

Answers

1) There are 15 stars below.



If you were to take away 8, how many would be left?

$15 - 8 = ?$

2) There are 8 triangles below.



If you were to take away 4, how many would be left?

$8 - 4 = ?$

3) There are 6 squares below.



If you were to take away 2, how many would be left?

$6 - 2 = ?$

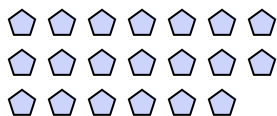
4) There are 5 rectangles below.



If you were to take away 1, how many would be left?

$5 - 1 = ?$

5) There are 20 pentagons below.



If you were to take away 4, how many would be left?

$20 - 4 = ?$

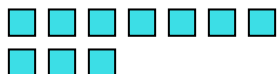
6) There are 8 stars below.



If you were to take away 6, how many would be left?

$8 - 6 = ?$

7) There are 10 squares below.



If you were to take away 8, how many would be left?

$10 - 8 = ?$

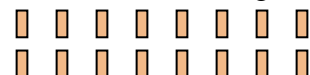
8) There are 19 stars below.



If you were to take away 10, how many would be left?

$19 - 10 = ?$

9) There are 16 rectangles below.



If you were to take away 5, how many would be left?

$16 - 5 = ?$

10) There are 6 squares below.



If you were to take away 1, how many would be left?

$6 - 1 = ?$

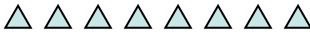
- 1. _____
- 2. _____
- 3. _____
- 4. _____
- 5. _____
- 6. _____
- 7. _____
- 8. _____
- 9. _____
- 10. _____



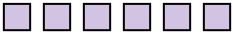
Use the visual model to solve each problem.

- 1) There are 15 stars below.



If you were to take away 8, how many would be left?
 $15 - 8 = ?$

- 2) There are 8 triangles below.


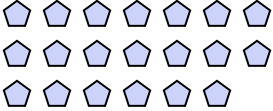
If you were to take away 4, how many would be left?
 $8 - 4 = ?$

- 3) There are 6 squares below.



If you were to take away 2, how many would be left?
 $6 - 2 = ?$

- 4) There are 5 rectangles below.


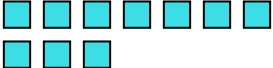
If you were to take away 1, how many would be left?
 $5 - 1 = ?$

- 5) There are 20 pentagons below.



If you were to take away 4, how many would be left?
 $20 - 4 = ?$

- 6) There are 8 stars below.


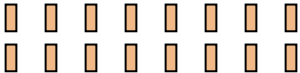
If you were to take away 6, how many would be left?
 $8 - 6 = ?$

- 7) There are 10 squares below.



If you were to take away 8, how many would be left?
 $10 - 8 = ?$

- 8) There are 19 stars below.


If you were to take away 10, how many would be left?
 $19 - 10 = ?$

- 9) There are 16 rectangles below.


If you were to take away 5, how many would be left?
 $16 - 5 = ?$

- 10) There are 6 squares below.


If you were to take away 1, how many would be left?
 $6 - 1 = ?$

Answers

1. 7

2. 4

3. 4

4. 4

5. 16

6. 2

7. 2

8. 9

9. 11

10. 5