




Determine if the shape is translating (slide), rotating (turn) or reflecting (flip).

Answers

1)



2)



3)



4)



5)



6)



7)



8)



9)



10)



11)



12)



13)



14)



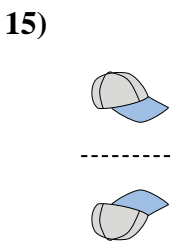
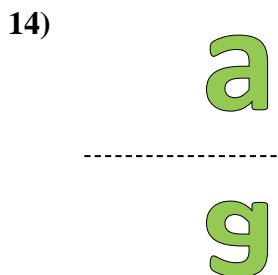
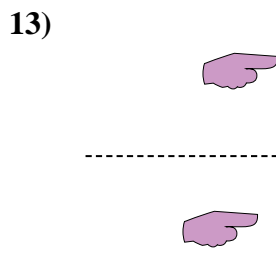
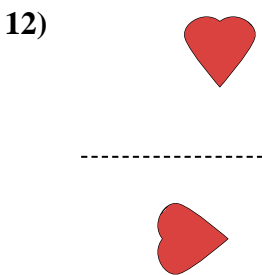
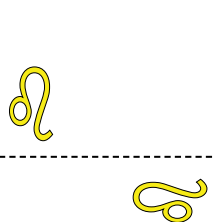
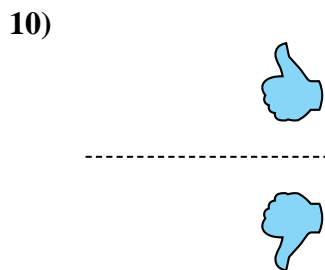
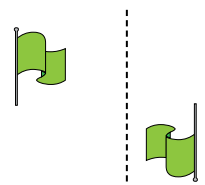
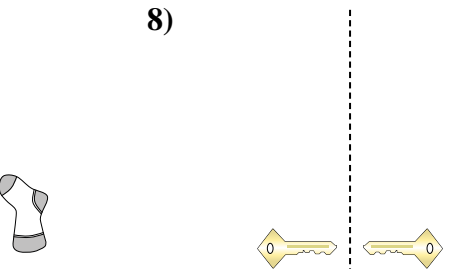
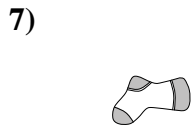
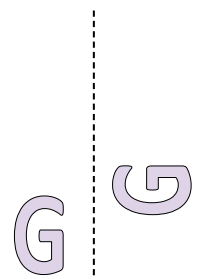
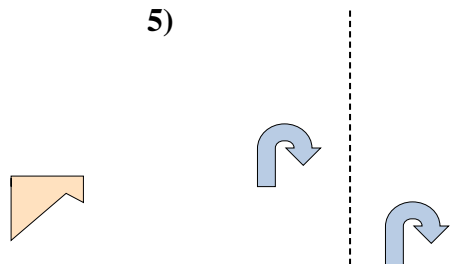
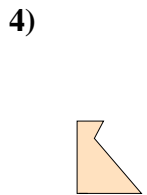


15)



1. \_\_\_\_\_
2. \_\_\_\_\_
3. \_\_\_\_\_
4. \_\_\_\_\_
5. \_\_\_\_\_
6. \_\_\_\_\_
7. \_\_\_\_\_
8. \_\_\_\_\_
9. \_\_\_\_\_
10. \_\_\_\_\_
11. \_\_\_\_\_
12. \_\_\_\_\_
13. \_\_\_\_\_
14. \_\_\_\_\_
15. \_\_\_\_\_



Determine if the shape is translating (slide), rotating (turn) or reflecting (flip).



Answers

1. translating
2. translating
3. reflecting
4. rotating
5. translating
6. rotating
7. rotating
8. reflecting
9. rotating
10. reflecting
11. rotating
12. rotating
13. translating
14. reflecting
15. reflecting