




Determine if the shape is translating (slide), rotating (turn) or reflecting (flip).

Answers


1)



2)



3)



1. \_\_\_\_\_


4)



5)



6)




2. \_\_\_\_\_


7)



8)



9)



3. \_\_\_\_\_

10)



11)



12)



4. \_\_\_\_\_



5. \_\_\_\_\_

13)



14)



15)



6. \_\_\_\_\_



7. \_\_\_\_\_

8. \_\_\_\_\_

9. \_\_\_\_\_

10. \_\_\_\_\_

11. \_\_\_\_\_

12. \_\_\_\_\_

13. \_\_\_\_\_


14. \_\_\_\_\_

15. \_\_\_\_\_



Determine if the shape is translating (slide), rotating (turn) or reflecting (flip).

1)



2)



3)



4)



5)



6)



7)



8)



9)



10)



11)



12)



13)



14)



15)



Answers

1. reflecting

2. translating

3. rotating

4. translating

5. translating

6. rotating

7. reflecting

8. reflecting

9. translating

10. translating

11. translating

12. reflecting

13. rotating

14. rotating

15. rotating