




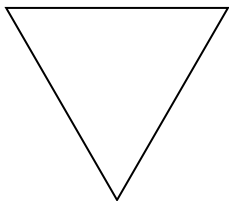
Determine if the shape shown is a regular shape or an irregular shape.

Answers

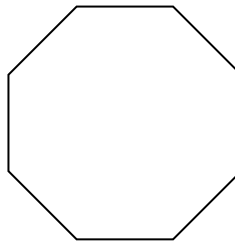
1)



2)



3)



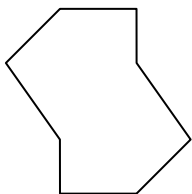
1. _____

2. _____

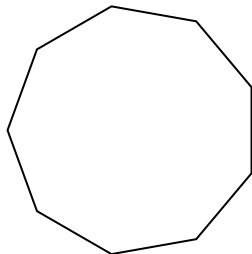
3. _____

4. _____

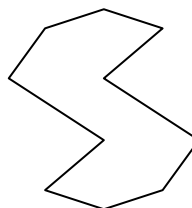
4)



5)



6)




5. _____

6. _____


7. _____

8. _____

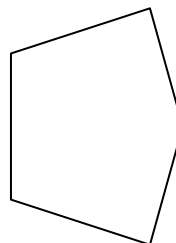
7)



8)



9)




9. _____

10. _____

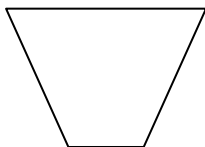
11. _____

12. _____

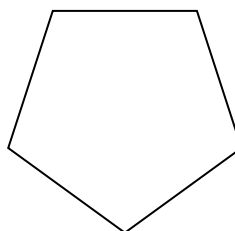
10)



11)



12)

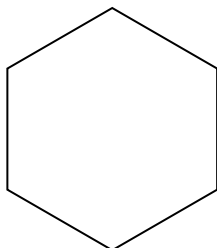


13. _____

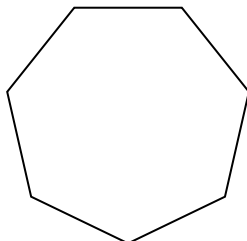
14. _____

15. _____

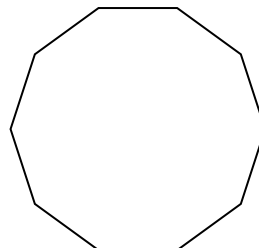
13)



14)




15)



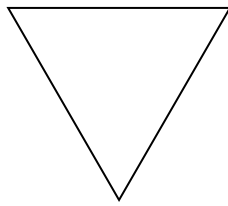


Determine if the shape shown is a regular shape or an irregular shape.

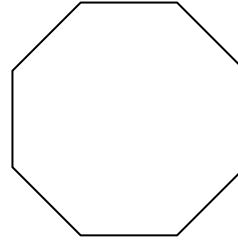
1)



2)



3)



Answers

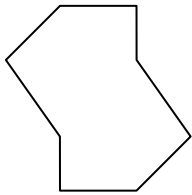
1. Regular

2. Regular

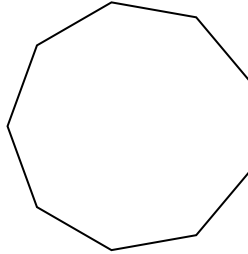
3. Regular

4. Irregular

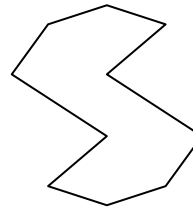
4)



5)




6)




5. Regular

6. Irregular

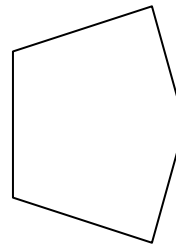
7)



8)



9)




7. Irregular

8. Irregular

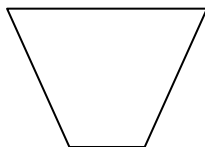
9. Irregular

10. Irregular

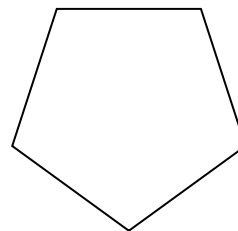
10)



11)



12)



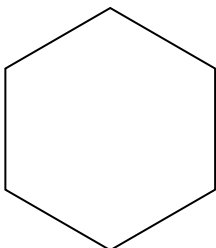
11. Irregular

12. Regular

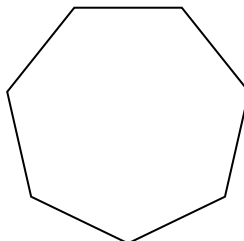
13. Regular

14. Regular

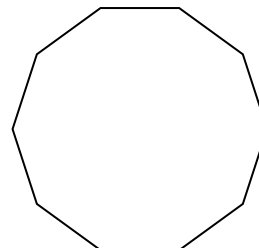
13)



14)



15)



15. Regular