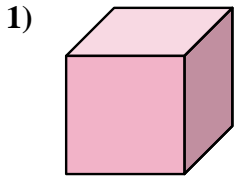


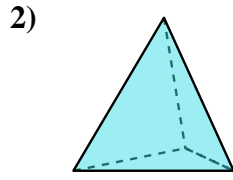


Determine which choice BEST describes the shape shown.

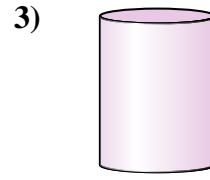
Answers



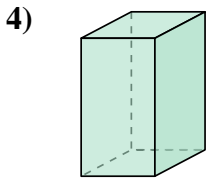
- A. cylinder
- B. triangular pyramid
- C. triangular prism
- D. cube



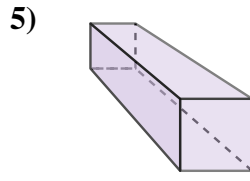
- A. rectangular pyramid
- B. triangular pyramid
- C. triangular prism
- D. rectangular prism



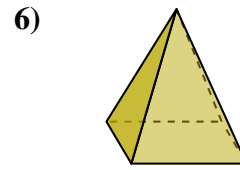
- A. cylinder
- B. sphere
- C. cone
- D. cube



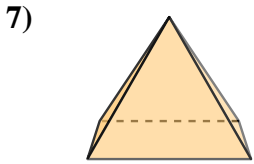
- A. cylinder
- B. rectangular pyramid
- C. sphere
- D. rectangular prism



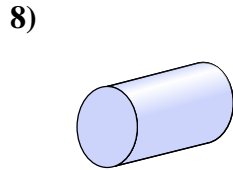
- A. rectangular prism
- B. cylinder
- C. cube
- D. sphere



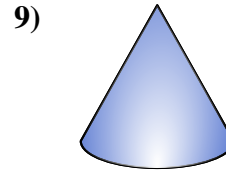
- A. rectangular pyramid
- B. triangular prism
- C. sphere
- D. cone



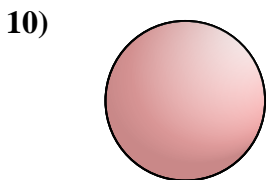
- A. cone
- B. triangular prism
- C. rectangular pyramid
- D. sphere



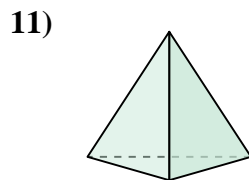
- A. triangular pyramid
- B. cylinder
- C. rectangular pyramid
- D. sphere



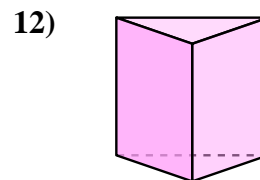
- A. cone
- B. cylinder
- C. triangular pyramid
- D. sphere



- A. cylinder
- B. triangular prism
- C. sphere
- D. cube



- A. sphere
- B. triangular pyramid
- C. rectangular pyramid
- D. rectangular prism

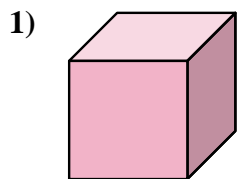


- A. triangular prism
- B. cylinder
- C. rectangular prism
- D. triangular pyramid

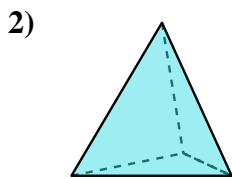
- 1. _____
- 2. _____
- 3. _____
- 4. _____
- 5. _____
- 6. _____
- 7. _____
- 8. _____
- 9. _____
- 10. _____
- 11. _____
- 12. _____



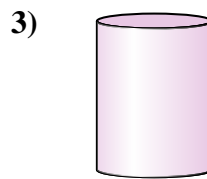
Determine which choice BEST describes the shape shown.



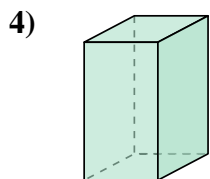
- A. cylinder
- B. triangular pyramid
- C. triangular prism
- D. cube



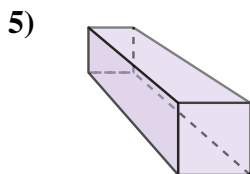
- A. rectangular pyramid
- B. triangular pyramid
- C. triangular prism
- D. rectangular prism



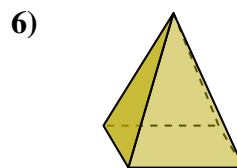
- A. cylinder
- B. sphere
- C. cone
- D. cube



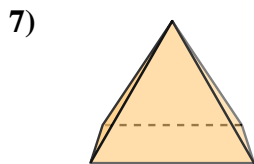
- A. cylinder
- B. rectangular pyramid
- C. sphere
- D. rectangular prism



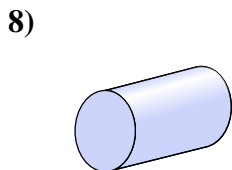
- A. rectangular prism
- B. cylinder
- C. cube
- D. sphere



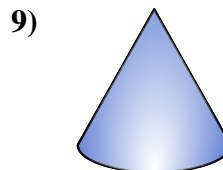
- A. rectangular pyramid
- B. triangular prism
- C. sphere
- D. cone



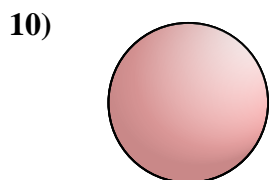
- A. cone
- B. triangular prism
- C. rectangular pyramid
- D. sphere



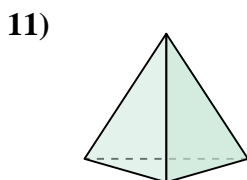
- A. triangular pyramid
- B. cylinder
- C. rectangular pyramid
- D. sphere



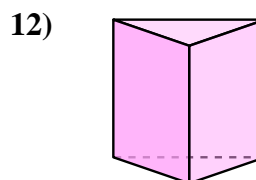
- A. cone
- B. cylinder
- C. triangular pyramid
- D. sphere



- A. cylinder
- B. triangular prism
- C. sphere
- D. cube



- A. sphere
- B. triangular pyramid
- C. rectangular pyramid
- D. rectangular prism



- A. triangular prism
- B. cylinder
- C. rectangular prism
- D. triangular pyramid

Answers

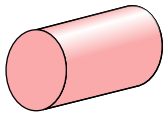
- 1. **D**
- 2. **B**
- 3. **A**
- 4. **D**
- 5. **A**
- 6. **A**
- 7. **C**
- 8. **B**
- 9. **A**
- 10. **C**
- 11. **B**
- 12. **A**



Determine which choice BEST describes the shape shown.

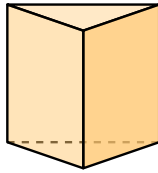
Answers

1)



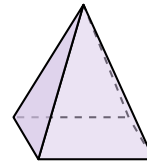
- A. sphere
- B. triangular pyramid
- C. rectangular pyramid
- D. cylinder

2)




- A. triangular prism
- B. cone
- C. triangular pyramid
- D. rectangular prism

3)



- A. rectangular pyramid
- B. sphere
- C. rectangular prism
- D. triangular prism

4)



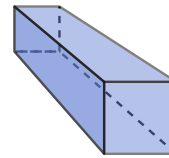
- A. triangular pyramid
- B. cylinder
- C. triangular prism
- D. sphere

5)



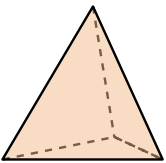
- A. rectangular pyramid
- B. sphere
- C. rectangular prism
- D. triangular prism

6)



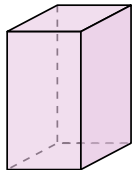
- A. cube
- B. cone
- C. triangular pyramid
- D. rectangular prism

7)



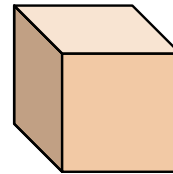
- A. triangular pyramid
- B. triangular prism
- C. cone
- D. rectangular pyramid

8)



- A. cube
- B. cylinder
- C. rectangular pyramid
- D. rectangular prism

9)



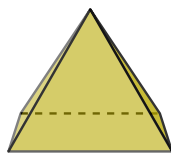
- A. cone
- B. cube
- C. triangular prism
- D. rectangular pyramid

10)




- A. cylinder
- B. sphere
- C. triangular pyramid
- D. cone

11)



- A. rectangular pyramid
- B. rectangular prism
- C. sphere
- D. cube

12)

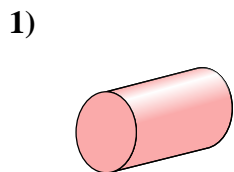


- A. cone
- B. triangular pyramid
- C. triangular prism
- D. sphere

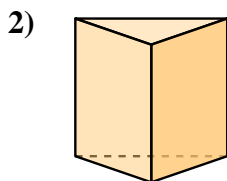
- 1. _____
- 2. _____
- 3. _____
- 4. _____
- 5. _____
- 6. _____
- 7. _____
- 8. _____
- 9. _____
- 10. _____
- 11. _____
- 12. _____



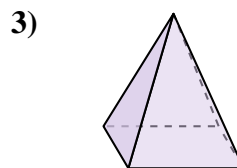
Determine which choice BEST describes the shape shown.



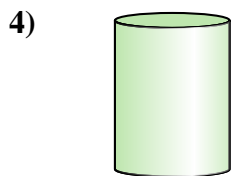
- A. sphere
- B. triangular pyramid
- C. rectangular pyramid
- D. cylinder



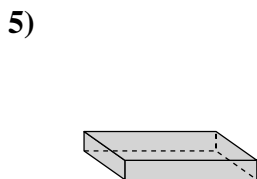
- A. triangular prism
- B. cone
- C. triangular pyramid
- D. rectangular prism



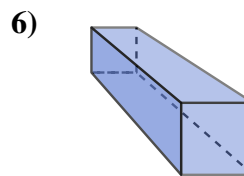
- A. rectangular pyramid
- B. sphere
- C. rectangular prism
- D. triangular prism



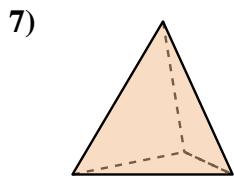
- A. triangular pyramid
- B. cylinder
- C. triangular prism
- D. sphere



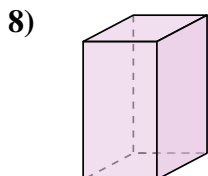
- A. rectangular pyramid
- B. sphere
- C. rectangular prism
- D. triangular prism



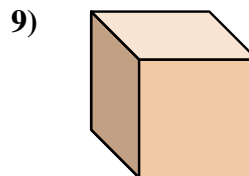
- A. cube
- B. cone
- C. triangular pyramid
- D. rectangular prism



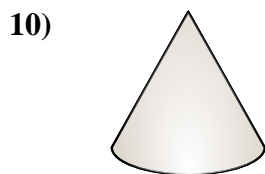
- A. triangular pyramid
- B. triangular prism
- C. cone
- D. rectangular pyramid



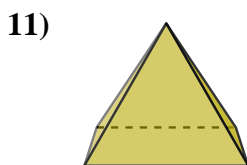
- A. cube
- B. cylinder
- C. rectangular pyramid
- D. rectangular prism



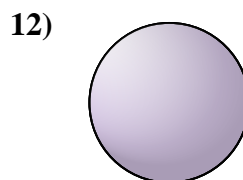
- A. cone
- B. cube
- C. triangular prism
- D. rectangular pyramid



- A. cylinder
- B. sphere
- C. triangular pyramid
- D. cone



- A. rectangular pyramid
- B. rectangular prism
- C. sphere
- D. cube



- A. cone
- B. triangular pyramid
- C. triangular prism
- D. sphere

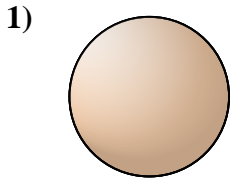
Answers

- 1. **D**
- 2. **A**
- 3. **A**
- 4. **B**
- 5. **C**
- 6. **D**
- 7. **A**
- 8. **D**
- 9. **B**
- 10. **D**
- 11. **A**
- 12. **D**

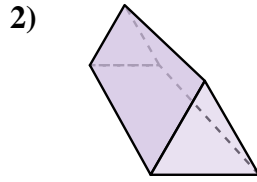


Determine which choice BEST describes the shape shown.

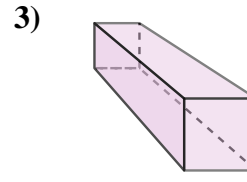
Answers



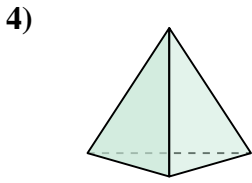
- A. triangular pyramid
- B. sphere
- C. rectangular pyramid
- D. rectangular prism



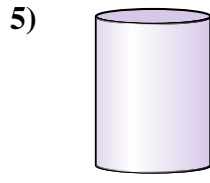
- A. triangular pyramid
- B. cone
- C. triangular prism
- D. cube



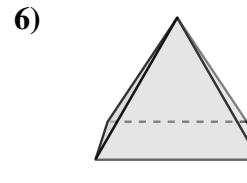
- A. cube
- B. triangular prism
- C. rectangular prism
- D. rectangular pyramid



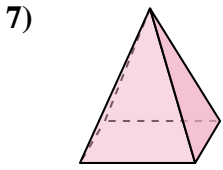
- A. triangular pyramid
- B. sphere
- C. triangular prism
- D. cube



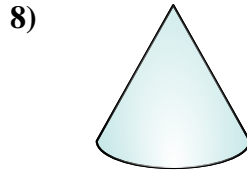
- A. rectangular prism
- B. rectangular pyramid
- C. cylinder
- D. triangular pyramid



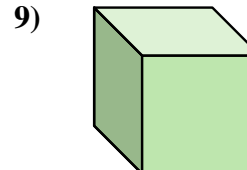
- A. cone
- B. triangular pyramid
- C. rectangular pyramid
- D. cylinder



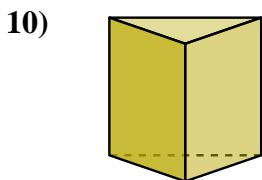
- A. triangular pyramid
- B. cube
- C. rectangular prism
- D. rectangular pyramid



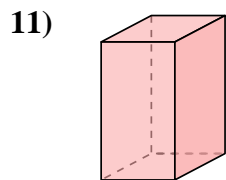
- A. rectangular pyramid
- B. cube
- C. triangular prism
- D. cone



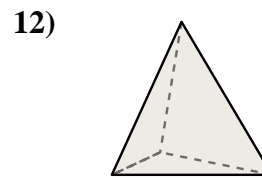
- A. cylinder
- B. rectangular prism
- C. triangular prism
- D. cube



- A. cylinder
- B. sphere
- C. cone
- D. triangular prism



- A. triangular prism
- B. cube
- C. rectangular prism
- D. cone

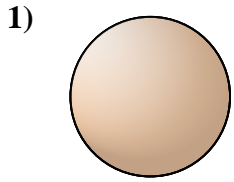


- A. sphere
- B. triangular prism
- C. cube
- D. triangular pyramid

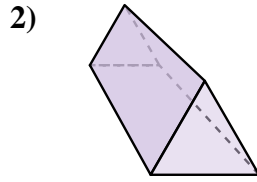
- 1. _____
- 2. _____
- 3. _____
- 4. _____
- 5. _____
- 6. _____
- 7. _____
- 8. _____
- 9. _____
- 10. _____
- 11. _____
- 12. _____



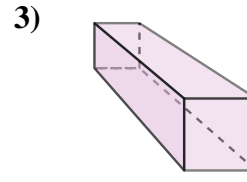
Determine which choice BEST describes the shape shown.



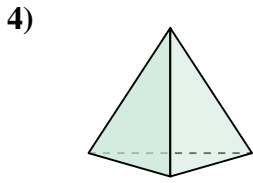
- 1)
 A. triangular pyramid
 B. sphere
 C. rectangular pyramid
 D. rectangular prism



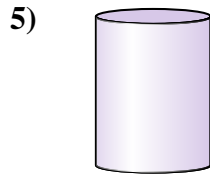
- 2)
 A. triangular pyramid
 B. cone
 C. triangular prism
 D. cube



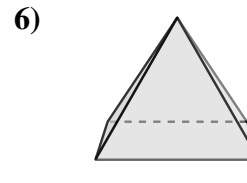
- 3)
 A. cube
 B. triangular prism
 C. rectangular prism
 D. rectangular pyramid



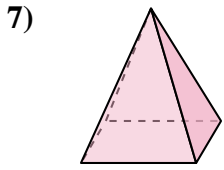
- 4)
 A. triangular pyramid
 B. sphere
 C. triangular prism
 D. cube



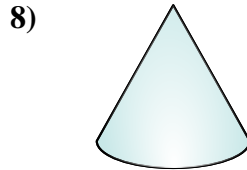
- 5)
 A. rectangular prism
 B. rectangular pyramid
 C. cylinder
 D. triangular pyramid



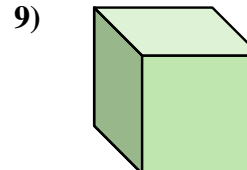
- 6)
 A. cone
 B. triangular pyramid
 C. rectangular pyramid
 D. cylinder



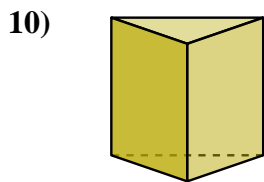
- 7)
 A. triangular pyramid
 B. cube
 C. rectangular prism
 D. rectangular pyramid



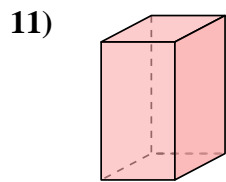
- 8)
 A. rectangular pyramid
 B. cube
 C. triangular prism
 D. cone



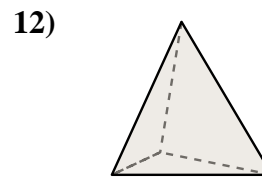
- 9)
 A. cylinder
 B. rectangular prism
 C. triangular prism
 D. cube



- 10)
 A. cylinder
 B. sphere
 C. cone
 D. triangular prism



- 11)
 A. triangular prism
 B. cube
 C. rectangular prism
 D. cone



- 12)
 A. sphere
 B. triangular prism
 C. cube
 D. triangular pyramid

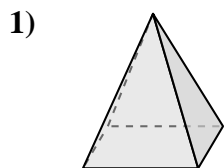
Answers

1. **B**
 2. **C**
 3. **C**
 4. **A**
 5. **C**
 6. **C**
 7. **D**
 8. **D**
 9. **D**
 10. **D**
 11. **C**
 12. **D**




Determine which choice BEST describes the shape shown.

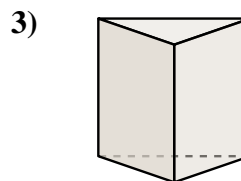
Answers



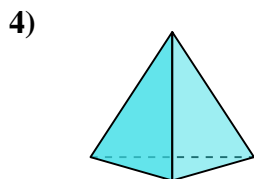
- 1) A. sphere
- B. rectangular prism
- C. rectangular pyramid
- D. cube



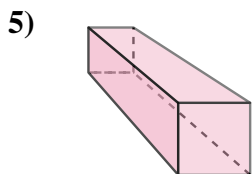
- 2) A. cylinder
- B. rectangular pyramid
- C. rectangular prism
- D. sphere



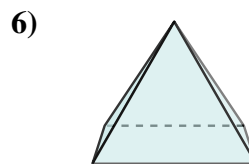
- 3) A. triangular prism
- B. cylinder
- C. sphere
- D. cube



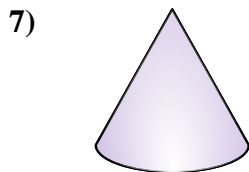
- 4) A. triangular pyramid
- B. cube
- C. rectangular pyramid
- D. sphere



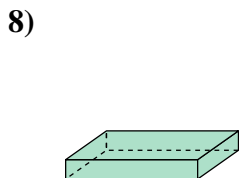
- 5) A. rectangular prism
- B. sphere
- C. rectangular pyramid
- D. triangular pyramid



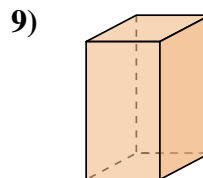
- 6) A. sphere
- B. cube
- C. rectangular pyramid
- D. triangular prism



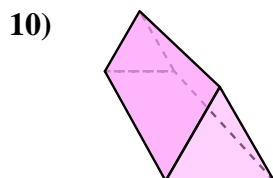
- 7) A. cube
- B. cone
- C. triangular pyramid
- D. sphere



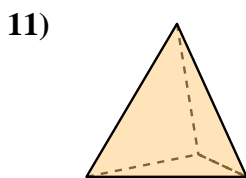
- 8) A. cylinder
- B. rectangular prism
- C. sphere
- D. cube



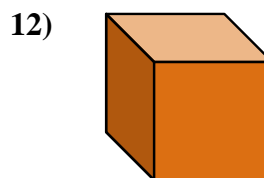
- 9) A. cone
- B. cylinder
- C. triangular prism
- D. rectangular prism



- 10) A. rectangular pyramid
- B. sphere
- C. triangular prism
- D. cylinder



- 11) A. cube
- B. cylinder
- C. cone
- D. triangular pyramid

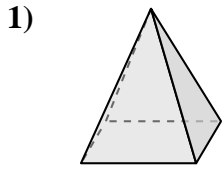


- 12) A. cube
- B. rectangular prism
- C. rectangular pyramid
- D. triangular pyramid


- 1. _____
- 2. _____
- 3. _____
- 4. _____
- 5. _____
- 6. _____
- 7. _____
- 8. _____
- 9. _____
- 10. _____
- 11. _____
- 12. _____



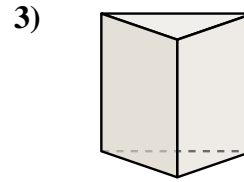
Determine which choice BEST describes the shape shown.



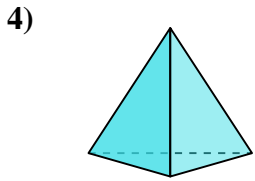
- A. sphere
- B. rectangular prism
- C. rectangular pyramid
- D. cube



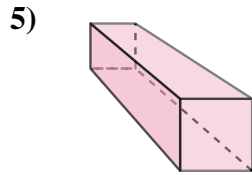
- A. cylinder
- B. rectangular pyramid
- C. rectangular prism
- D. sphere



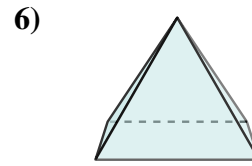
- A. triangular prism
- B. cylinder
- C. sphere
- D. cube



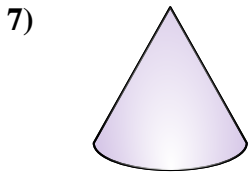
- A. triangular pyramid
- B. cube
- C. rectangular pyramid
- D. sphere



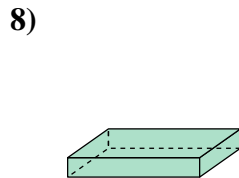
- A. rectangular prism
- B. sphere
- C. rectangular pyramid
- D. triangular pyramid



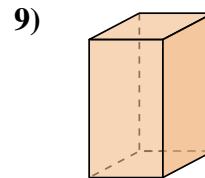
- A. sphere
- B. cube
- C. rectangular pyramid
- D. triangular prism



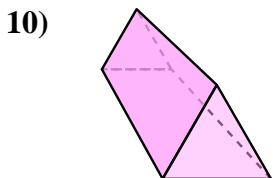
- A. cube
- B. cone
- C. triangular pyramid
- D. sphere



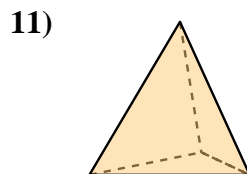
- A. cylinder
- B. rectangular prism
- C. sphere
- D. cube



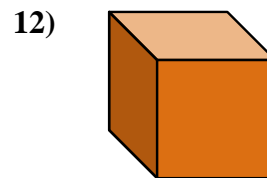
- A. cone
- B. cylinder
- C. triangular prism
- D. rectangular prism



- A. rectangular pyramid
- B. sphere
- C. triangular prism
- D. cylinder



- A. cube
- B. cylinder
- C. cone
- D. triangular pyramid



- A. cube
- B. rectangular prism
- C. rectangular pyramid
- D. triangular pyramid

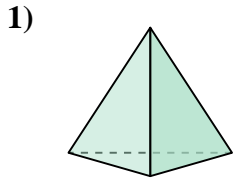
Answers

- 1. **C**
- 2. **D**
- 3. **A**
- 4. **A**
- 5. **A**
- 6. **C**
- 7. **B**
- 8. **B**
- 9. **D**
- 10. **C**
- 11. **D**
- 12. **A**

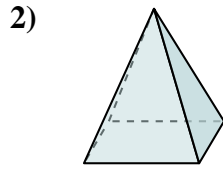


Determine which choice BEST describes the shape shown.

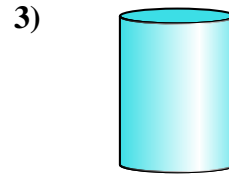
Answers



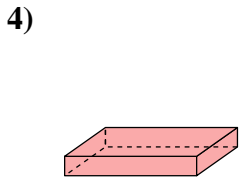
- A. triangular pyramid
- B. sphere
- C. cylinder
- D. rectangular pyramid



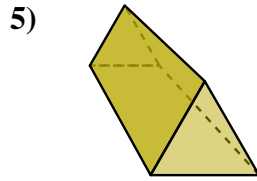
- A. triangular pyramid
- B. cone
- C. cube
- D. rectangular pyramid



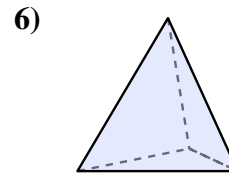
- A. rectangular pyramid
- B. rectangular prism
- C. cylinder
- D. sphere



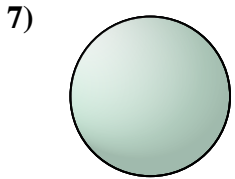
- A. rectangular prism
- B. rectangular pyramid
- C. triangular pyramid
- D. cone



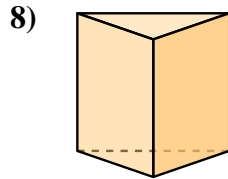
- A. rectangular pyramid
- B. rectangular prism
- C. triangular prism
- D. triangular pyramid



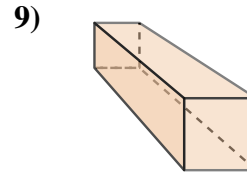
- A. triangular pyramid
- B. rectangular prism
- C. triangular prism
- D. cube



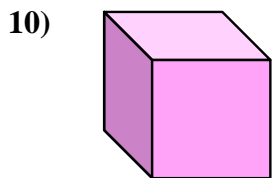
- A. triangular prism
- B. rectangular prism
- C. sphere
- D. cube



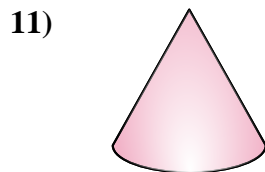
- A. cone
- B. triangular prism
- C. cube
- D. rectangular prism



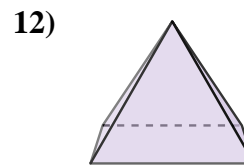
- A. cylinder
- B. sphere
- C. rectangular prism
- D. rectangular pyramid



- A. rectangular pyramid
- B. cube
- C. triangular prism
- D. cone



- A. rectangular pyramid
- B. sphere
- C. triangular prism
- D. cone

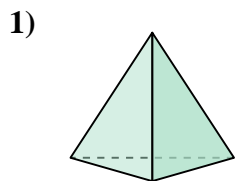


- A. triangular prism
- B. triangular pyramid
- C. cube
- D. rectangular pyramid

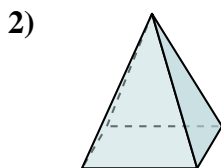
- 1. _____
- 2. _____
- 3. _____
- 4. _____
- 5. _____
- 6. _____
- 7. _____
- 8. _____
- 9. _____
- 10. _____
- 11. _____
- 12. _____



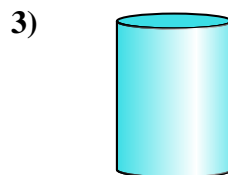
Determine which choice BEST describes the shape shown.



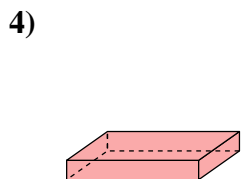
- A. triangular pyramid
- B. sphere
- C. cylinder
- D. rectangular pyramid



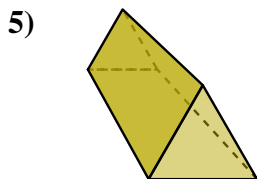
- A. triangular pyramid
- B. cone
- C. cube
- D. rectangular pyramid



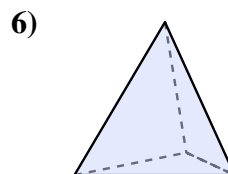
- A. rectangular pyramid
- B. rectangular prism
- C. cylinder
- D. sphere



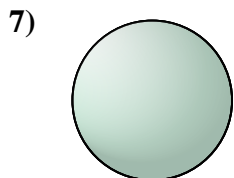
- A. rectangular prism
- B. rectangular pyramid
- C. triangular pyramid
- D. cone



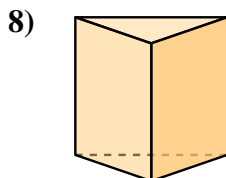
- A. rectangular pyramid
- B. rectangular prism
- C. triangular prism
- D. triangular pyramid



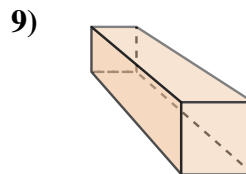
- A. triangular pyramid
- B. rectangular prism
- C. triangular prism
- D. cube



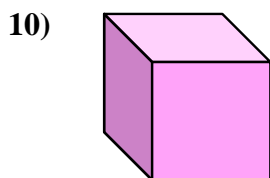
- A. triangular prism
- B. rectangular prism
- C. sphere
- D. cube




- A. cone
- B. triangular prism
- C. cube
- D. rectangular prism



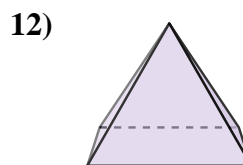
- A. cylinder
- B. sphere
- C. rectangular prism
- D. rectangular pyramid



- A. rectangular pyramid
- B. cube
- C. triangular prism
- D. cone



- A. rectangular pyramid
- B. sphere
- C. triangular prism
- D. cone



- A. triangular prism
- B. triangular pyramid
- C. cube
- D. rectangular pyramid

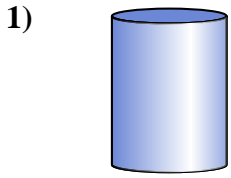
Answers

- 1. **A**
- 2. **D**
- 3. **C**
- 4. **A**
- 5. **C**
- 6. **A**
- 7. **C**
- 8. **B**
- 9. **C**
- 10. **B**
- 11. **D**
- 12. **D**

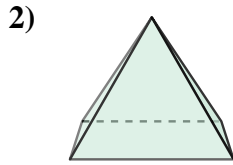


Determine which choice BEST describes the shape shown.

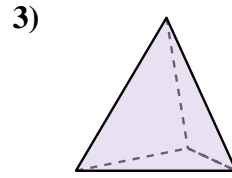
Answers



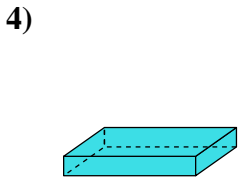
- A. rectangular prism
- B. cylinder
- C. cone
- D. sphere



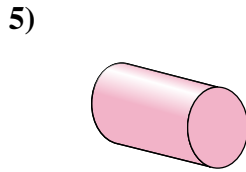
- A. cylinder
- B. triangular prism
- C. rectangular pyramid
- D. triangular pyramid



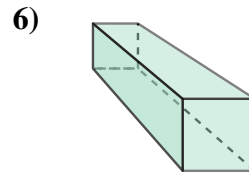
- A. cone
- B. cylinder
- C. sphere
- D. triangular pyramid



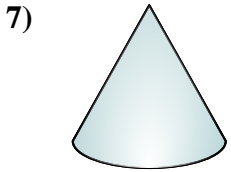
- A. triangular prism
- B. cylinder
- C. rectangular prism
- D. sphere




- A. cylinder
- B. cube
- C. rectangular prism
- D. rectangular pyramid



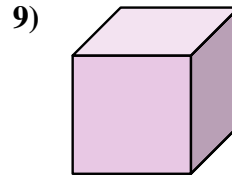
- A. triangular pyramid
- B. rectangular prism
- C. cube
- D. cone



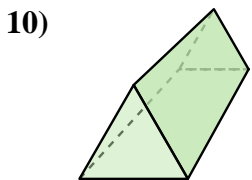
- A. sphere
- B. cylinder
- C. cone
- D. cube



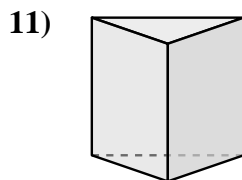
- A. cube
- B. sphere
- C. cone
- D. cylinder



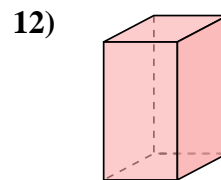
- A. triangular pyramid
- B. cube
- C. triangular prism
- D. rectangular prism



- A. triangular pyramid
- B. cone
- C. triangular prism
- D. sphere



- A. triangular prism
- B. triangular pyramid
- C. cylinder
- D. rectangular prism

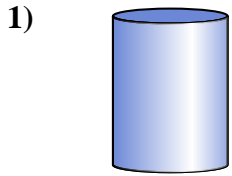


- A. sphere
- B. cube
- C. triangular prism
- D. rectangular prism

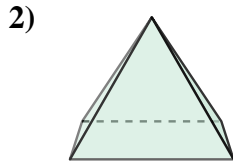
- 1. _____
- 2. _____
- 3. _____
- 4. _____
- 5. _____
- 6. _____
- 7. _____
- 8. _____
- 9. _____
- 10. _____
- 11. _____
- 12. _____



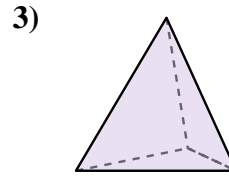
Determine which choice BEST describes the shape shown.



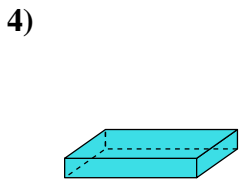
- A. rectangular prism
- B. cylinder
- C. cone
- D. sphere



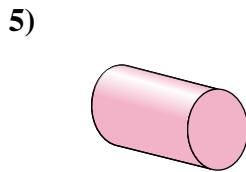
- A. cylinder
- B. triangular prism
- C. rectangular pyramid
- D. triangular pyramid



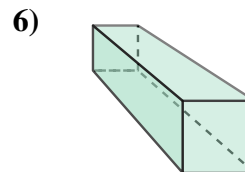
- A. cone
- B. cylinder
- C. sphere
- D. triangular pyramid



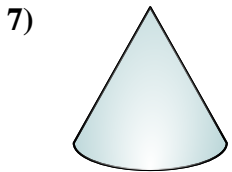
- A. triangular prism
- B. cylinder
- C. rectangular prism
- D. sphere




- A. cylinder
- B. cube
- C. rectangular prism
- D. rectangular pyramid



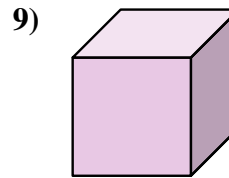
- A. triangular pyramid
- B. rectangular prism
- C. cube
- D. cone



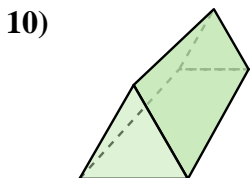
- A. sphere
- B. cylinder
- C. cone
- D. cube



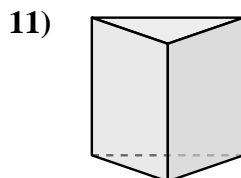
- A. cube
- B. sphere
- C. cone
- D. cylinder



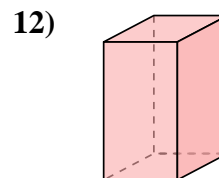
- A. triangular pyramid
- B. cube
- C. triangular prism
- D. rectangular prism



- A. triangular pyramid
- B. cone
- C. triangular prism
- D. sphere



- A. triangular prism
- B. triangular pyramid
- C. cylinder
- D. rectangular prism



- A. sphere
- B. cube
- C. triangular prism
- D. rectangular prism

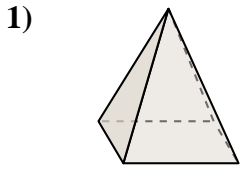
Answers

- 1. **B**
- 2. **C**
- 3. **D**
- 4. **C**
- 5. **A**
- 6. **B**
- 7. **C**
- 8. **B**
- 9. **B**
- 10. **C**
- 11. **A**
- 12. **D**

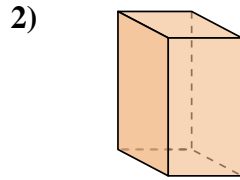


Determine which choice BEST describes the shape shown.

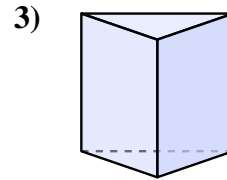
Answers



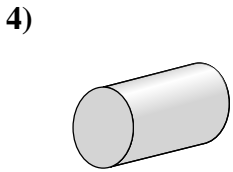
- A. rectangular pyramid
- B. triangular prism
- C. rectangular prism
- D. cube



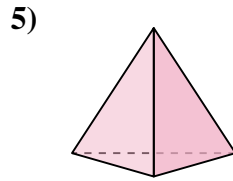
- A. cone
- B. triangular prism
- C. rectangular pyramid
- D. rectangular prism



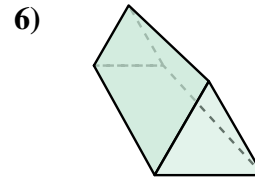
- A. cube
- B. cone
- C. triangular prism
- D. cylinder



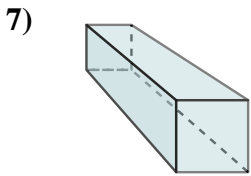
- A. rectangular prism
- B. rectangular pyramid
- C. cylinder
- D. sphere



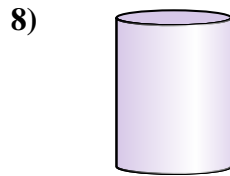
- A. cube
- B. triangular pyramid
- C. rectangular prism
- D. cylinder



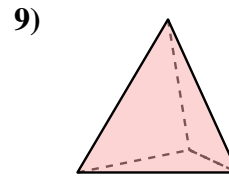
- A. cone
- B. sphere
- C. triangular prism
- D. cylinder



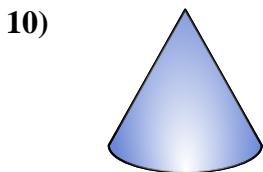
- A. rectangular pyramid
- B. cube
- C. rectangular prism
- D. triangular prism



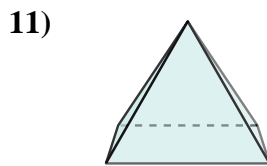
- A. triangular prism
- B. cube
- C. cylinder
- D. cone



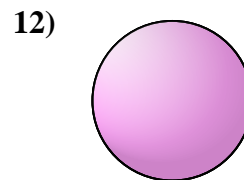
- A. cylinder
- B. cone
- C. triangular pyramid
- D. cube



- A. cylinder
- B. rectangular pyramid
- C. cone
- D. rectangular prism



- A. triangular pyramid
- B. cone
- C. rectangular prism
- D. rectangular pyramid

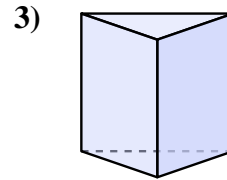
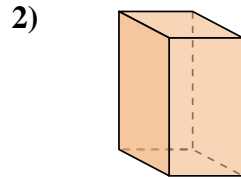
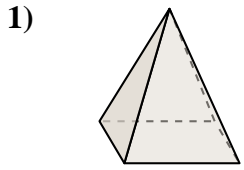


- A. triangular pyramid
- B. rectangular prism
- C. cone
- D. sphere

- 1. _____
- 2. _____
- 3. _____
- 4. _____
- 5. _____
- 6. _____
- 7. _____
- 8. _____
- 9. _____
- 10. _____
- 11. _____
- 12. _____



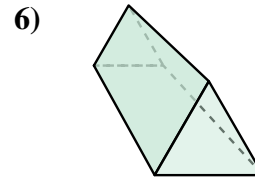
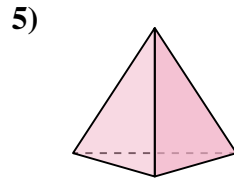
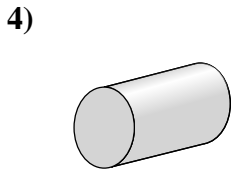
Determine which choice BEST describes the shape shown.



- A. rectangular pyramid
- B. triangular prism
- C. rectangular prism
- D. cube

- A. cone
- B. triangular prism
- C. rectangular pyramid
- D. rectangular prism

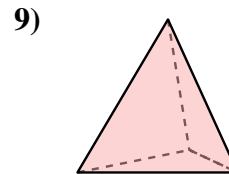
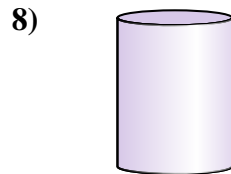
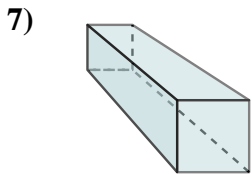
- A. cube
- B. cone
- C. triangular prism
- D. cylinder



- A. rectangular prism
- B. rectangular pyramid
- C. cylinder
- D. sphere

- A. cube
- B. triangular pyramid
- C. rectangular prism
- D. cylinder

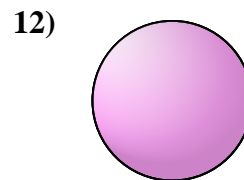
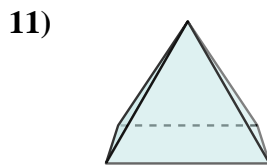
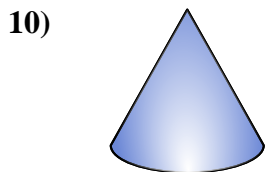
- A. cone
- B. sphere
- C. triangular prism
- D. cylinder



- A. rectangular pyramid
- B. cube
- C. rectangular prism
- D. triangular prism

- A. triangular prism
- B. cube
- C. cylinder
- D. cone

- A. cylinder
- B. cone
- C. triangular pyramid
- D. cube



- A. cylinder
- B. rectangular pyramid
- C. cone
- D. rectangular prism

- A. triangular pyramid
- B. cone
- C. rectangular prism
- D. rectangular pyramid

- A. triangular pyramid
- B. rectangular prism
- C. cone
- D. sphere

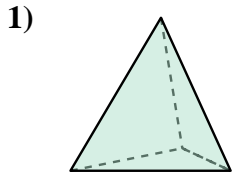
Answers

- 1. **A**
- 2. **D**
- 3. **C**
- 4. **C**
- 5. **B**
- 6. **C**
- 7. **C**
- 8. **C**
- 9. **C**
- 10. **C**
- 11. **D**
- 12. **D**

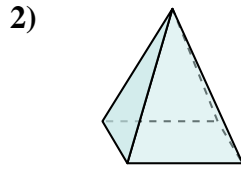


Determine which choice BEST describes the shape shown.

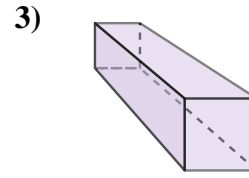
Answers



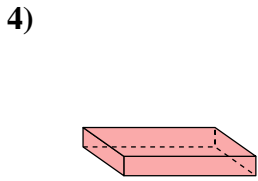
- A. triangular pyramid
- B. triangular prism
- C. rectangular prism
- D. cube



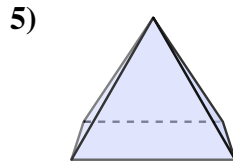
- A. cube
- B. triangular prism
- C. cone
- D. rectangular pyramid



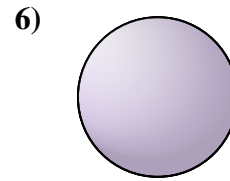
- A. triangular prism
- B. cylinder
- C. rectangular prism
- D. cone



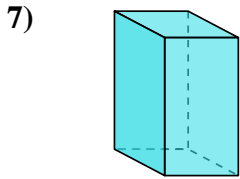
- A. cone
- B. triangular pyramid
- C. cylinder
- D. rectangular prism



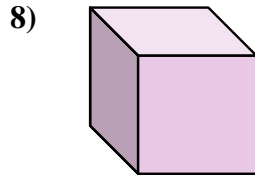
- A. sphere
- B. triangular pyramid
- C. cylinder
- D. rectangular pyramid



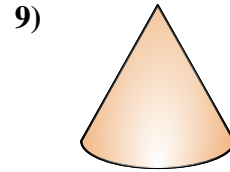
- A. cone
- B. triangular prism
- C. rectangular pyramid
- D. sphere



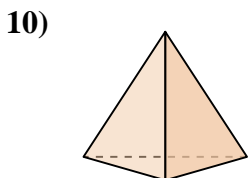
- A. cube
- B. triangular prism
- C. rectangular prism
- D. cone



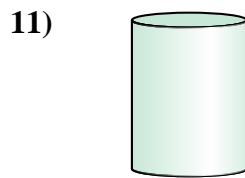
- A. cylinder
- B. cube
- C. rectangular pyramid
- D. triangular pyramid



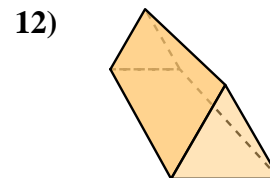
- A. cylinder
- B. rectangular prism
- C. triangular pyramid
- D. cone



- A. cone
- B. triangular pyramid
- C. sphere
- D. triangular prism



- A. cylinder
- B. cube
- C. triangular pyramid
- D. triangular prism

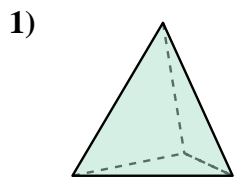


- A. cube
- B. rectangular pyramid
- C. triangular prism
- D. rectangular prism

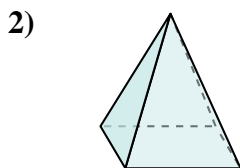
- 1. _____
- 2. _____
- 3. _____
- 4. _____
- 5. _____
- 6. _____
- 7. _____
- 8. _____
- 9. _____
- 10. _____
- 11. _____
- 12. _____



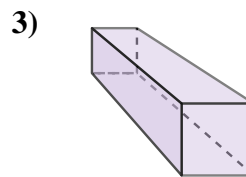
Determine which choice BEST describes the shape shown.



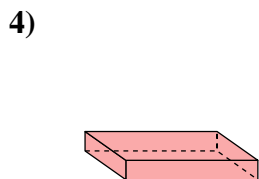
- A. triangular pyramid
- B. triangular prism
- C. rectangular prism
- D. cube



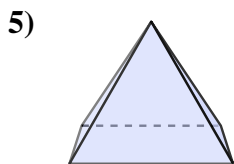
- A. cube
- B. triangular prism
- C. cone
- D. rectangular pyramid



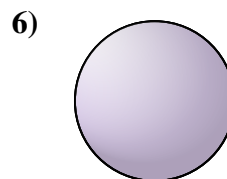
- A. triangular prism
- B. cylinder
- C. rectangular prism
- D. cone



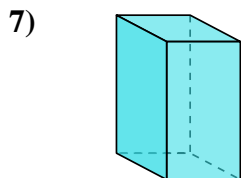
- A. cone
- B. triangular pyramid
- C. cylinder
- D. rectangular prism



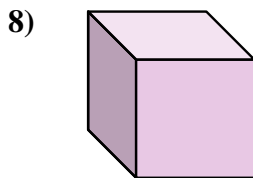
- A. sphere
- B. triangular pyramid
- C. cylinder
- D. rectangular pyramid



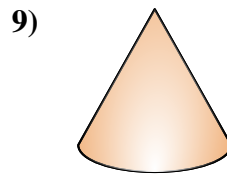
- A. cone
- B. triangular prism
- C. rectangular pyramid
- D. sphere



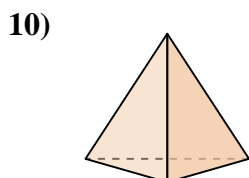
- A. cube
- B. triangular prism
- C. rectangular prism
- D. cone



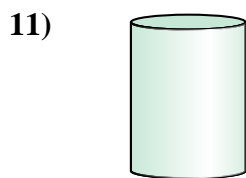
- A. cylinder
- B. cube
- C. rectangular pyramid
- D. triangular pyramid



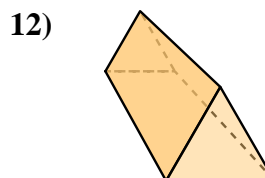
- A. cylinder
- B. rectangular prism
- C. triangular pyramid
- D. cone



- A. cone
- B. triangular pyramid
- C. sphere
- D. triangular prism



- A. cylinder
- B. cube
- C. triangular pyramid
- D. triangular prism



- A. cube
- B. rectangular pyramid
- C. triangular prism
- D. rectangular prism

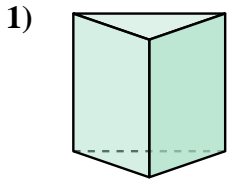
Answers

- 1. **A**
- 2. **D**
- 3. **C**
- 4. **D**
- 5. **D**
- 6. **D**
- 7. **C**
- 8. **B**
- 9. **D**
- 10. **B**
- 11. **A**
- 12. **C**

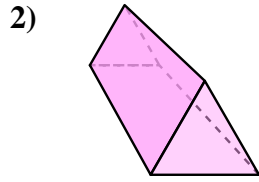


Determine which choice BEST describes the shape shown.

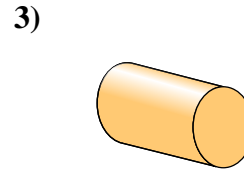
Answers



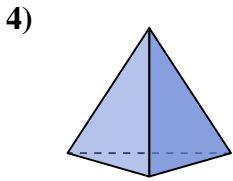
- A. cylinder
- B. cube
- C. triangular pyramid
- D. triangular prism



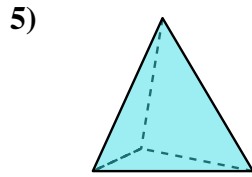
- A. triangular pyramid
- B. triangular prism
- C. cylinder
- D. sphere



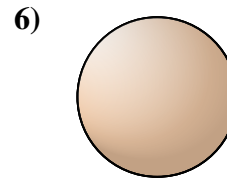
- A. rectangular prism
- B. rectangular pyramid
- C. cylinder
- D. cone



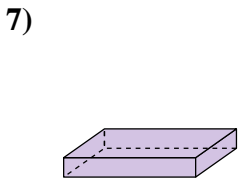
- A. rectangular prism
- B. sphere
- C. triangular pyramid
- D. cone



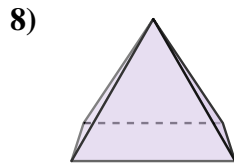
- A. cone
- B. triangular pyramid
- C. rectangular prism
- D. cube



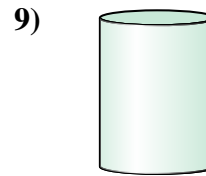
- A. rectangular pyramid
- B. sphere
- C. rectangular prism
- D. cube



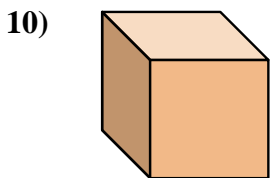
- A. rectangular prism
- B. cone
- C. cube
- D. triangular prism



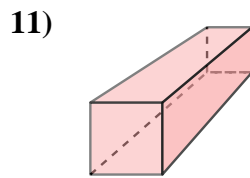
- A. sphere
- B. rectangular pyramid
- C. cylinder
- D. triangular prism



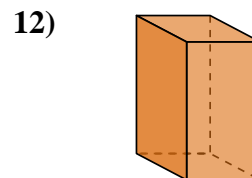
- A. cone
- B. triangular pyramid
- C. sphere
- D. cylinder



- A. rectangular pyramid
- B. sphere
- C. cube
- D. cone



- A. cone
- B. rectangular prism
- C. cube
- D. rectangular pyramid

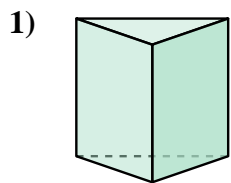


- A. sphere
- B. rectangular prism
- C. cylinder
- D. cube

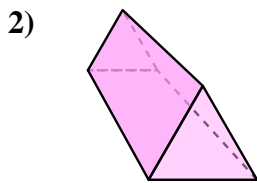
- 1. _____
- 2. _____
- 3. _____
- 4. _____
- 5. _____
- 6. _____
- 7. _____
- 8. _____
- 9. _____
- 10. _____
- 11. _____
- 12. _____



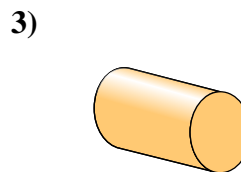
Determine which choice BEST describes the shape shown.



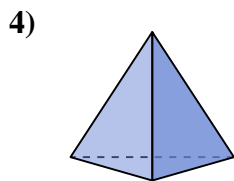
- A. cylinder
- B. cube
- C. triangular pyramid
- D. triangular prism



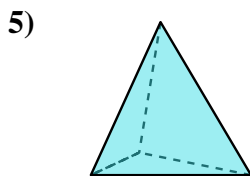
- A. triangular pyramid
- B. triangular prism
- C. cylinder
- D. sphere



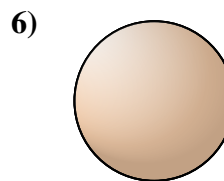
- A. rectangular prism
- B. rectangular pyramid
- C. cylinder
- D. cone



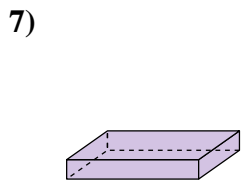
- A. rectangular prism
- B. sphere
- C. triangular pyramid
- D. cone



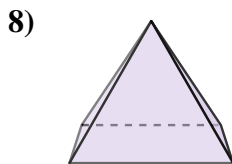
- A. cone
- B. triangular pyramid
- C. rectangular prism
- D. cube



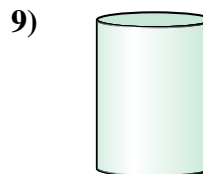
- A. rectangular pyramid
- B. sphere
- C. rectangular prism
- D. cube



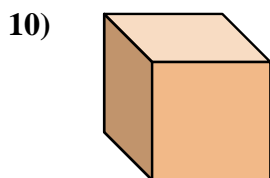
- A. rectangular prism
- B. cone
- C. cube
- D. triangular prism



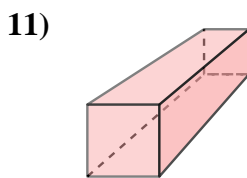
- A. sphere
- B. rectangular pyramid
- C. cylinder
- D. triangular prism



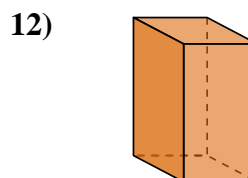
- A. cone
- B. triangular pyramid
- C. sphere
- D. cylinder



- A. rectangular pyramid
- B. sphere
- C. cube
- D. cone



- A. cone
- B. rectangular prism
- C. cube
- D. rectangular pyramid



- A. sphere
- B. rectangular prism
- C. cylinder
- D. cube

Answers

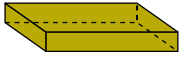
- 1. **D**
- 2. **B**
- 3. **C**
- 4. **C**
- 5. **B**
- 6. **B**
- 7. **A**
- 8. **B**
- 9. **D**
- 10. **C**
- 11. **B**
- 12. **B**



Determine which choice BEST describes the shape shown.

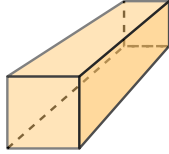
Answers

1)



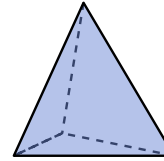
- A. cube
- B. cylinder
- C. triangular prism
- D. rectangular prism

2)



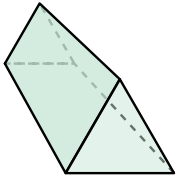
- A. cone
- B. cube
- C. rectangular prism
- D. triangular prism

3)



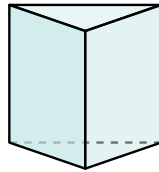
- A. cone
- B. rectangular pyramid
- C. cylinder
- D. triangular pyramid

4)



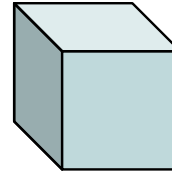
- A. rectangular pyramid
- B. rectangular prism
- C. triangular prism
- D. cube

5)



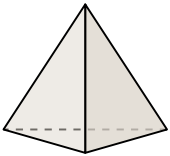
- A. rectangular prism
- B. cube
- C. cone
- D. triangular prism

6)




- A. rectangular pyramid
- B. cone
- C. cylinder
- D. cube

7)



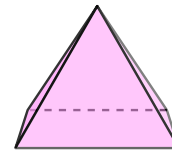
- A. triangular pyramid
- B. cone
- C. rectangular prism
- D. cylinder

8)



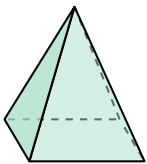
- A. sphere
- B. cylinder
- C. rectangular pyramid
- D. cube

9)




- A. triangular prism
- B. cylinder
- C. rectangular pyramid
- D. cube

10)




- A. rectangular pyramid
- B. rectangular prism
- C. triangular prism
- D. sphere

11)



- A. triangular pyramid
- B. sphere
- C. cylinder
- D. cube

12)



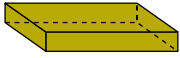
- A. rectangular pyramid
- B. triangular prism
- C. cube
- D. cylinder

- 1. _____
- 2. _____
- 3. _____
- 4. _____
- 5. _____
- 6. _____
- 7. _____
- 8. _____
- 9. _____
- 10. _____
- 11. _____
- 12. _____



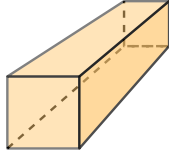
Determine which choice BEST describes the shape shown.

1)



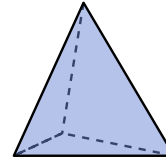
- A. cube
- B. cylinder
- C. triangular prism
- D. rectangular prism

2)



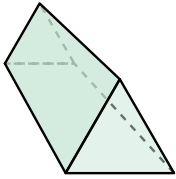
- A. cone
- B. cube
- C. rectangular prism
- D. triangular prism

3)



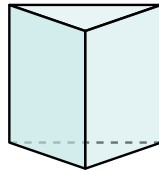
- A. cone
- B. rectangular pyramid
- C. cylinder
- D. triangular pyramid

4)



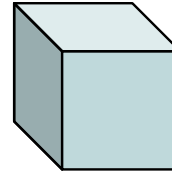
- A. rectangular pyramid
- B. rectangular prism
- C. triangular prism
- D. cube

5)



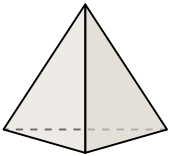
- A. rectangular prism
- B. cube
- C. cone
- D. triangular prism

6)




- A. rectangular pyramid
- B. cone
- C. cylinder
- D. cube

7)



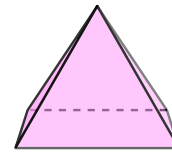
- A. triangular pyramid
- B. cone
- C. rectangular prism
- D. cylinder

8)



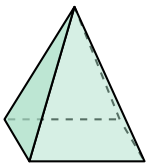
- A. sphere
- B. cylinder
- C. rectangular pyramid
- D. cube

9)




- A. triangular prism
- B. cylinder
- C. rectangular pyramid
- D. cube

10)




- A. rectangular pyramid
- B. rectangular prism
- C. triangular prism
- D. sphere

11)



- A. triangular pyramid
- B. sphere
- C. cylinder
- D. cube

12)



- A. rectangular pyramid
- B. triangular prism
- C. cube
- D. cylinder

Answers

- 1. **D**
- 2. **C**
- 3. **D**
- 4. **C**
- 5. **D**
- 6. **D**
- 7. **A**
- 8. **A**
- 9. **C**
- 10. **A**
- 11. **C**
- 12. **D**