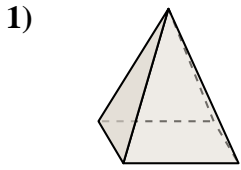


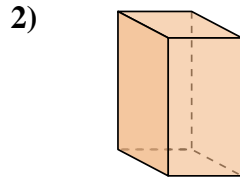


Determine which choice BEST describes the shape shown.

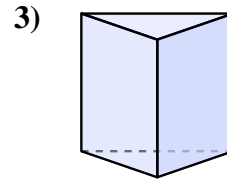
Answers



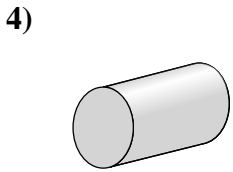
- A. rectangular pyramid
- B. triangular prism
- C. rectangular prism
- D. cube



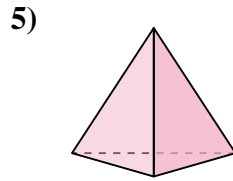
- A. cone
- B. triangular prism
- C. rectangular pyramid
- D. rectangular prism



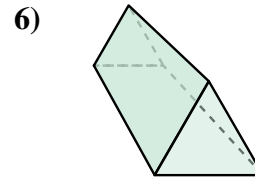
- A. cube
- B. cone
- C. triangular prism
- D. cylinder



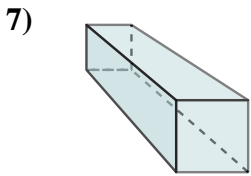
- A. rectangular prism
- B. rectangular pyramid
- C. cylinder
- D. sphere



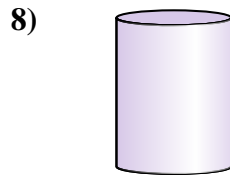
- A. cube
- B. triangular pyramid
- C. rectangular prism
- D. cylinder



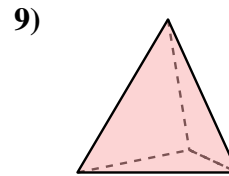
- A. cone
- B. sphere
- C. triangular prism
- D. cylinder



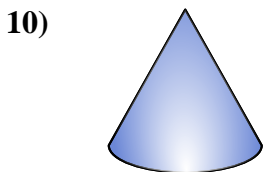
- A. rectangular pyramid
- B. cube
- C. rectangular prism
- D. triangular prism



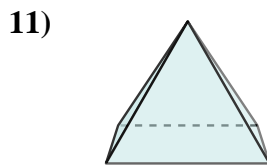
- A. triangular prism
- B. cube
- C. cylinder
- D. cone



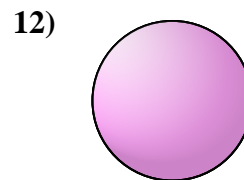
- A. cylinder
- B. cone
- C. triangular pyramid
- D. cube



- A. cylinder
- B. rectangular pyramid
- C. cone
- D. rectangular prism



- A. triangular pyramid
- B. cone
- C. rectangular prism
- D. rectangular pyramid

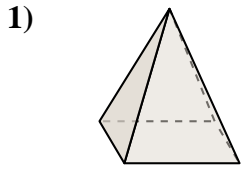


- A. triangular pyramid
- B. rectangular prism
- C. cone
- D. sphere

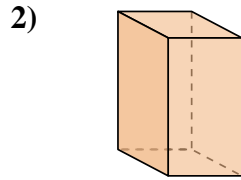
- 1. _____
- 2. _____
- 3. _____
- 4. _____
- 5. _____
- 6. _____
- 7. _____
- 8. _____
- 9. _____
- 10. _____
- 11. _____
- 12. _____



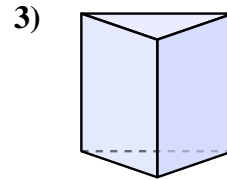
Determine which choice BEST describes the shape shown.



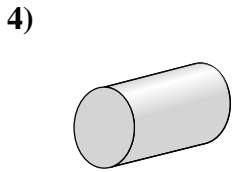
- 1) **A.** rectangular pyramid
B. triangular prism
C. rectangular prism
D. cube



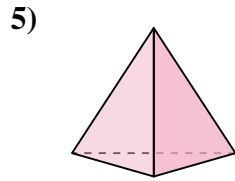
- 2) **A.** cone
B. triangular prism
C. rectangular pyramid
D. rectangular prism



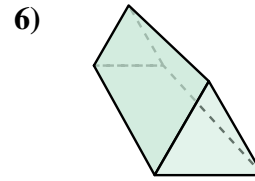
- 3) **A.** cube
B. cone
C. triangular prism
D. cylinder



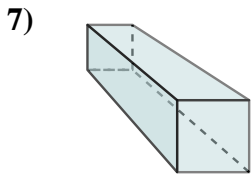
- 4) **A.** rectangular prism
B. rectangular pyramid
C. cylinder
D. sphere



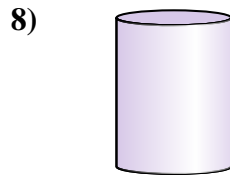
- 5) **A.** cube
B. triangular pyramid
C. rectangular prism
D. cylinder



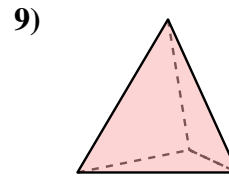
- 6) **A.** cone
B. sphere
C. triangular prism
D. cylinder



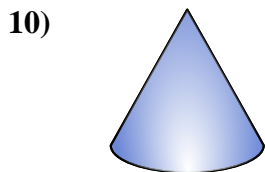
- 7) **A.** rectangular pyramid
B. cube
C. rectangular prism
D. triangular prism



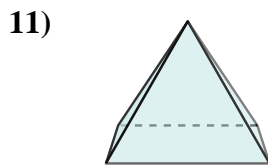
- 8) **A.** triangular prism
B. cube
C. cylinder
D. cone



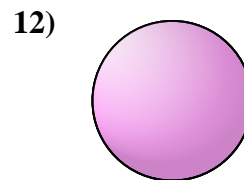
- 9) **A.** cylinder
B. cone
C. triangular pyramid
D. cube



- 10) **A.** cylinder
B. rectangular pyramid
C. cone
D. rectangular prism



- 11) **A.** triangular pyramid
B. cone
C. rectangular prism
D. rectangular pyramid



- 12) **A.** triangular pyramid
B. rectangular prism
C. cone
D. sphere

Answers

1. **A**
2. **D**
3. **C**
4. **C**
5. **B**
6. **C**
7. **C**
8. **C**
9. **C**
10. **C**
11. **D**
12. **D**