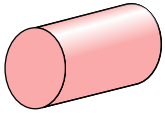




Determine which choice BEST describes the shape shown.

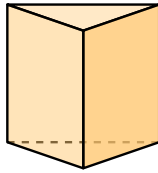
Answers

1)



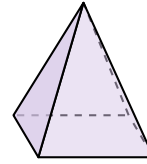
- A. sphere
- B. triangular pyramid
- C. rectangular pyramid
- D. cylinder

2)




- A. triangular prism
- B. cone
- C. triangular pyramid
- D. rectangular prism

3)



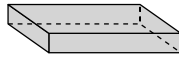
- A. rectangular pyramid
- B. sphere
- C. rectangular prism
- D. triangular prism

4)



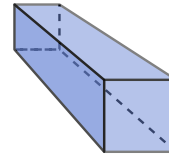
- A. triangular pyramid
- B. cylinder
- C. triangular prism
- D. sphere

5)



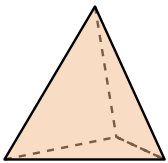
- A. rectangular pyramid
- B. sphere
- C. rectangular prism
- D. triangular prism

6)



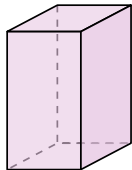
- A. cube
- B. cone
- C. triangular pyramid
- D. rectangular prism

7)



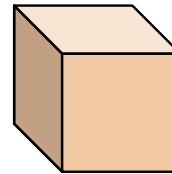
- A. triangular pyramid
- B. triangular prism
- C. cone
- D. rectangular pyramid

8)



- A. cube
- B. cylinder
- C. rectangular pyramid
- D. rectangular prism

9)



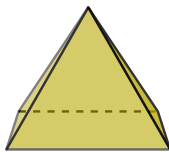
- A. cone
- B. cube
- C. triangular prism
- D. rectangular pyramid

10)




- A. cylinder
- B. sphere
- C. triangular pyramid
- D. cone

11)



- A. rectangular pyramid
- B. rectangular prism
- C. sphere
- D. cube

12)

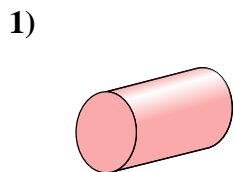


- A. cone
- B. triangular pyramid
- C. triangular prism
- D. sphere

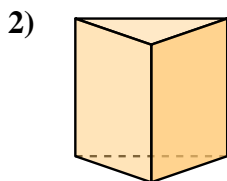
1. _____
2. _____
3. _____
4. _____
5. _____
6. _____
7. _____
8. _____
9. _____
10. _____
11. _____
12. _____



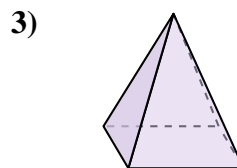
Determine which choice BEST describes the shape shown.



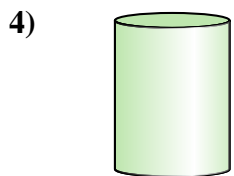
- A. sphere
- B. triangular pyramid
- C. rectangular pyramid
- D. cylinder



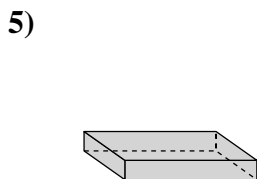
- A. triangular prism
- B. cone
- C. triangular pyramid
- D. rectangular prism



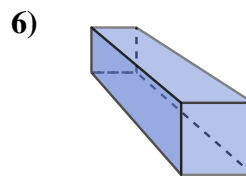
- A. rectangular pyramid
- B. sphere
- C. rectangular prism
- D. triangular prism



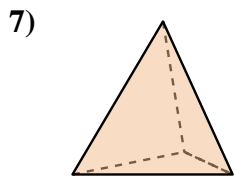
- A. triangular pyramid
- B. cylinder
- C. triangular prism
- D. sphere



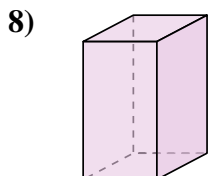
- A. rectangular pyramid
- B. sphere
- C. rectangular prism
- D. triangular prism



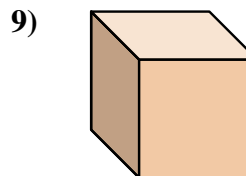
- A. cube
- B. cone
- C. triangular pyramid
- D. rectangular prism



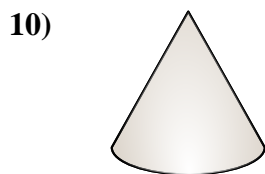
- A. triangular pyramid
- B. triangular prism
- C. cone
- D. rectangular pyramid



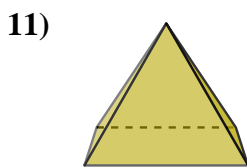
- A. cube
- B. cylinder
- C. rectangular pyramid
- D. rectangular prism



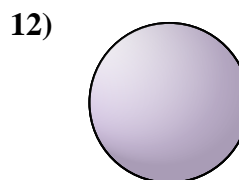
- A. cone
- B. cube
- C. triangular prism
- D. rectangular pyramid



- A. cylinder
- B. sphere
- C. triangular pyramid
- D. cone



- A. rectangular pyramid
- B. rectangular prism
- C. sphere
- D. cube



- A. cone
- B. triangular pyramid
- C. triangular prism
- D. sphere

Answers

- 1. **D**
- 2. **A**
- 3. **A**
- 4. **B**
- 5. **C**
- 6. **D**
- 7. **A**
- 8. **D**
- 9. **B**
- 10. **D**
- 11. **A**
- 12. **D**