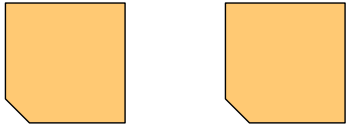




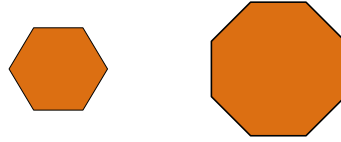
Determine if the shapes shown are 'similar', 'congruent' or 'neither'.

Answers


1)



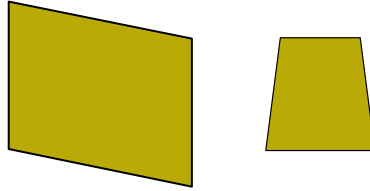
2)



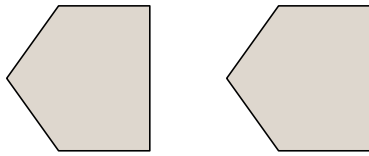
3)



4)



5)



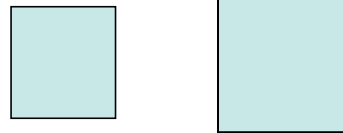
6)



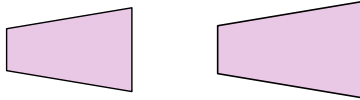
7)



8)



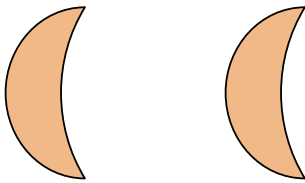
9)



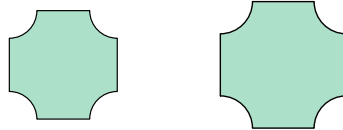
10)



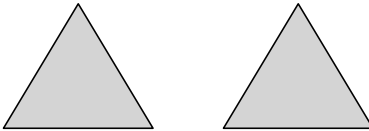
11)



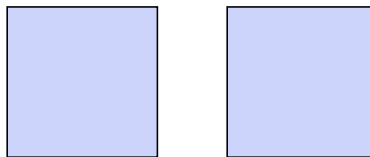
12)



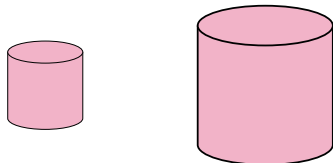
13)




14)



15)



16)



1. _____

2. _____

3. _____

4. _____

5. _____

6. _____

7. _____

8. _____

9. _____

10. _____

11. _____

12. _____

13. _____

14. _____

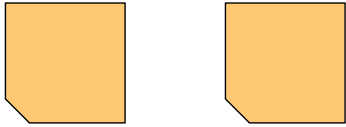
15. _____

16. _____

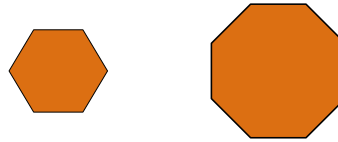


Determine if the shapes shown are 'similar', 'congruent' or 'neither'.


1)



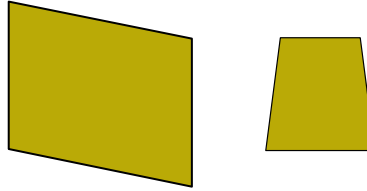
2)



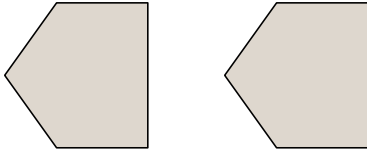
3)



4)



5)



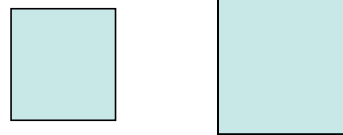
6)



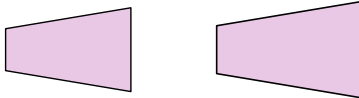
7)



8)



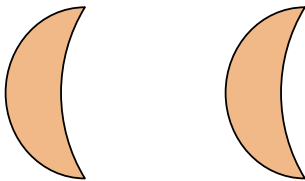
9)



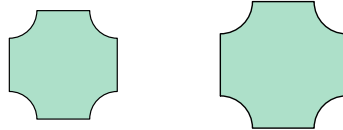
10)



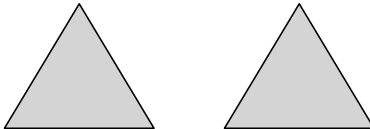
11)



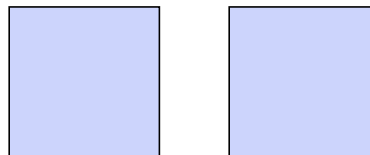
12)



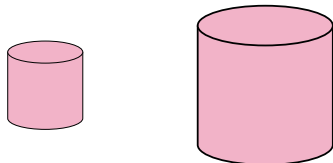
13)




14)



15)



16)



Answers

1. congruent

2. neither

3. similar

4. neither

5. congruent

6. congruent

7. neither

8. similar

9. similar

10. neither

11. congruent

12. similar

13. congruent

14. congruent

15. similar

16. similar