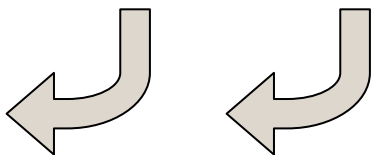





Determine if the shapes shown are 'similar', 'congruent' or 'neither'.

Answers

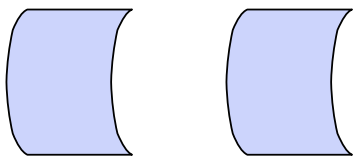
1)



2)




3)



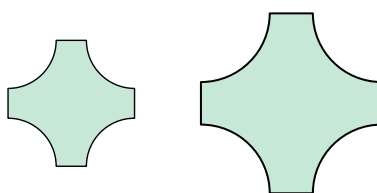
4)



5)



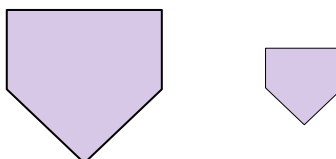
6)



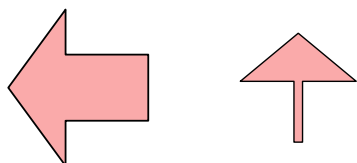
7)



8)



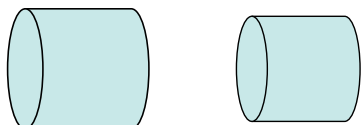
9)



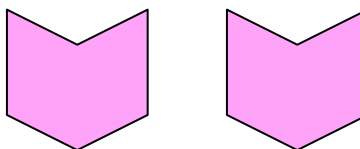
10)



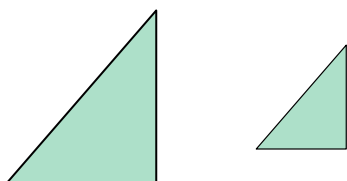
11)



12)




13)



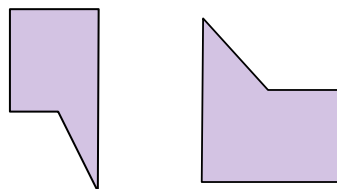
14)



15)



16)



1. \_\_\_\_\_

2. \_\_\_\_\_

3. \_\_\_\_\_

4. \_\_\_\_\_

5. \_\_\_\_\_

6. \_\_\_\_\_

7. \_\_\_\_\_

8. \_\_\_\_\_

9. \_\_\_\_\_

10. \_\_\_\_\_

11. \_\_\_\_\_

12. \_\_\_\_\_

13. \_\_\_\_\_

14. \_\_\_\_\_

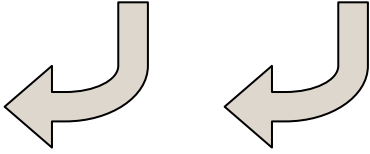
15. \_\_\_\_\_

16. \_\_\_\_\_



Determine if the shapes shown are 'similar', 'congruent' or 'neither'.

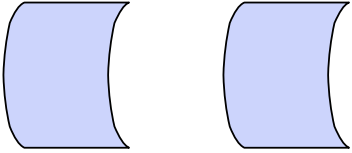
1)



2)



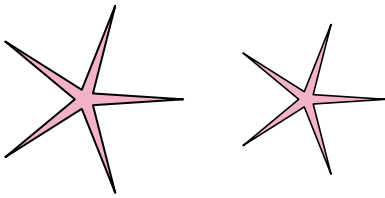
3)



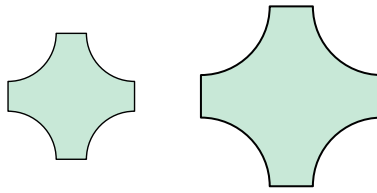
4)



5)



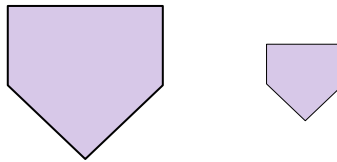
6)



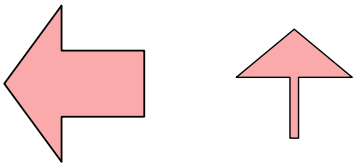
7)




8)



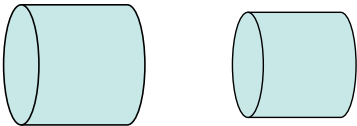
9)



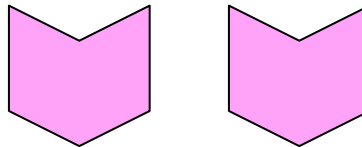
10)



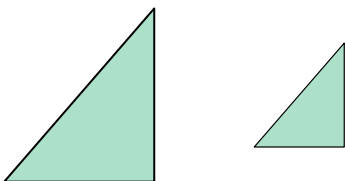
11)



12)




13)



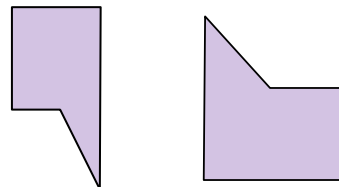
14)



15)



16)



Answers

1. congruent

2. congruent

3. congruent

4. congruent

5. similar

6. similar

7. neither

8. similar

9. neither

10. neither

11. similar

12. congruent

13. similar

14. congruent

15. neither

16. neither