




Determine if the shapes shown are 'similar', 'congruent' or 'neither'.

Answers

1)



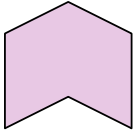
2)



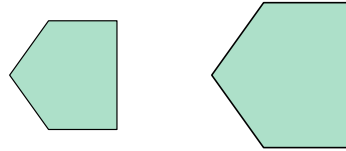
1. _____

2. _____

3)



4)

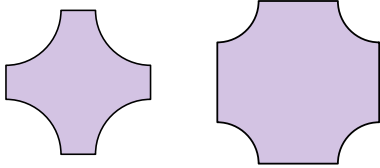


3. _____

4. _____

5. _____

5)



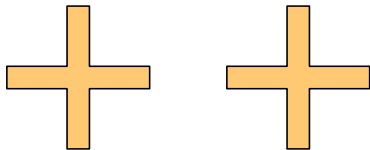
6)



6. _____

7. _____

7)



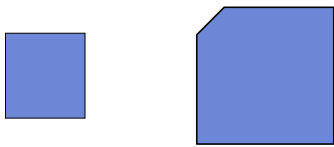
8)



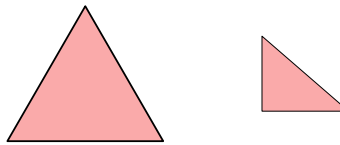
8. _____

9. _____

9)



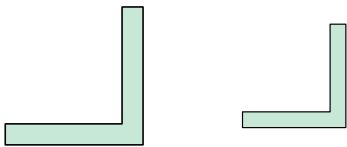
10)



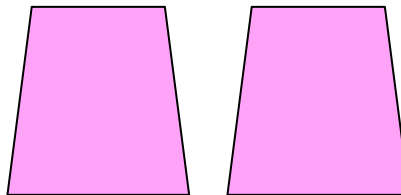
11. _____

12. _____

11)



12)



13. _____

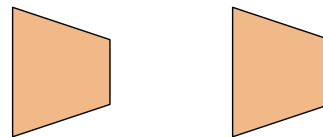
14. _____

15. _____

13)



14)



16. _____

15)



16)






Determine if the shapes shown are 'similar', 'congruent' or 'neither'.

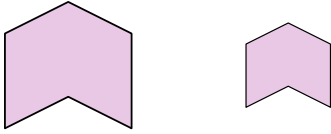
1)



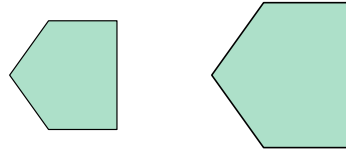
2)



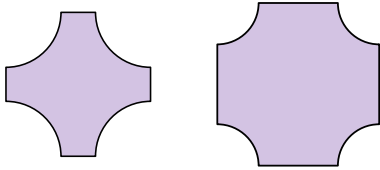
3)



4)



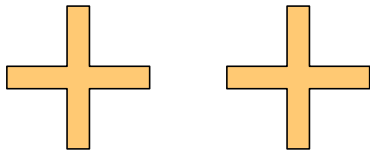
5)



6)



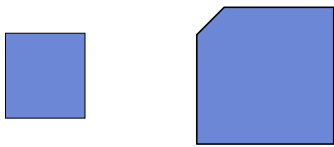
7)



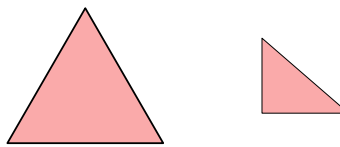
8)



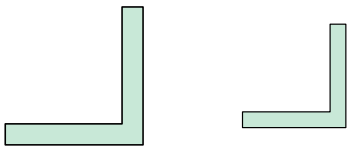
9)



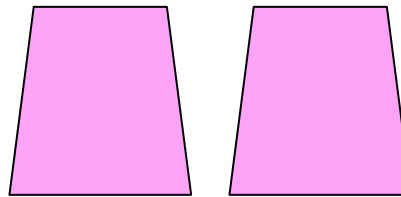
10)



11)



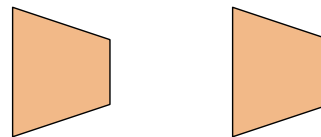
12)



13)



14)



15)



16)



Answers

1. similar

2. similar

3. similar

4. similar

5. neither

6. neither

7. congruent

8. congruent

9. neither

10. neither

11. similar

12. congruent

13. similar

14. congruent

15. similar

16. neither