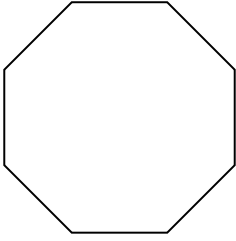


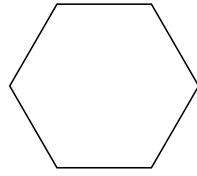


Identifying the type of shape shown.


1)



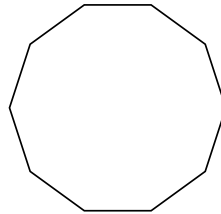
2)



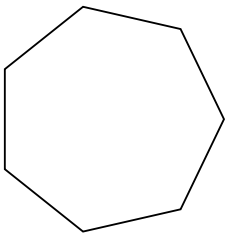
3)



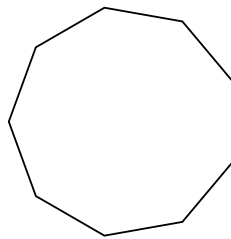
4)



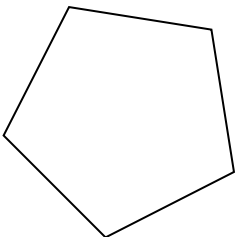
5)



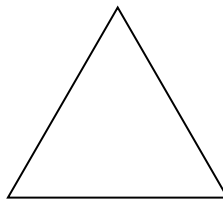
6)



7)



8)



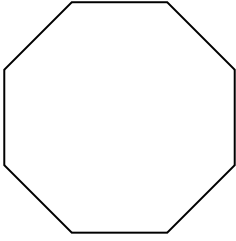
Answers

- 1. \_\_\_\_\_
- 2. \_\_\_\_\_
- 3. \_\_\_\_\_
- 4. \_\_\_\_\_
- 5. \_\_\_\_\_
- 6. \_\_\_\_\_
- 7. \_\_\_\_\_
- 8. \_\_\_\_\_

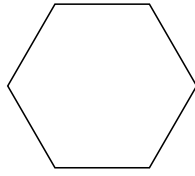


Identifying the type of shape shown.


1)



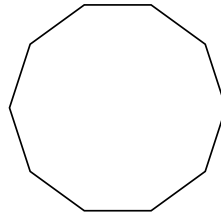
2)



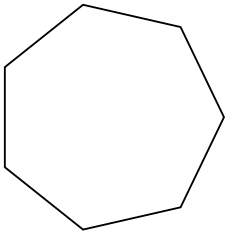
3)



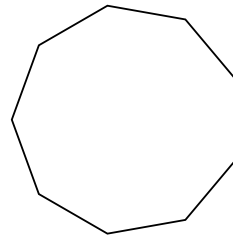
4)



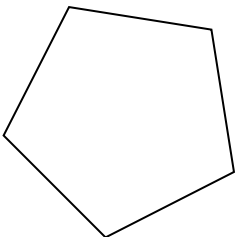
5)



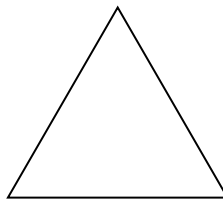
6)



7)



8)



Answers

1. octagon

2. hexagon

3. quadrilateral

4. decagon

5. heptagon

6. nonagon

7. pentagon

8. triangle