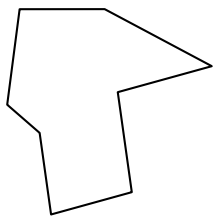


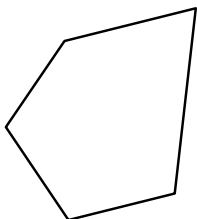


Identify the type of shape shown.


1)



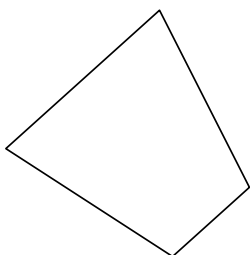
2)



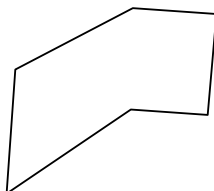
3)



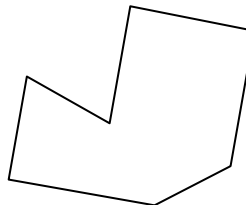
4)



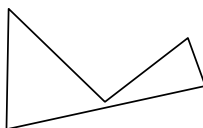
5)




6)



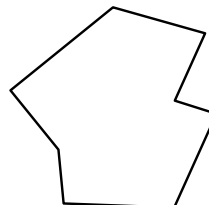
7)



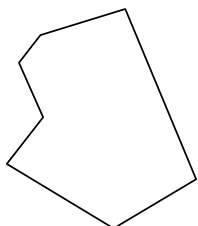
8)



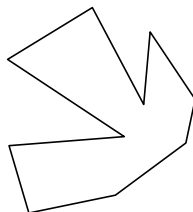
9)



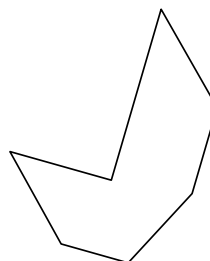
10)



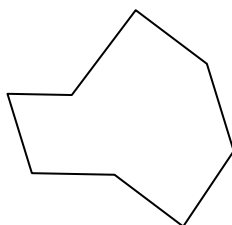
11)



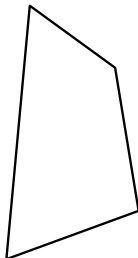
12)



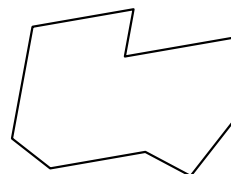
13)



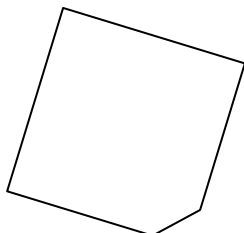
14)



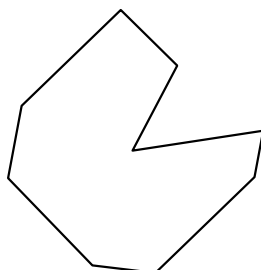
15)



16)



17)



18)



Answers

1. \_\_\_\_\_

2. \_\_\_\_\_

3. \_\_\_\_\_

4. \_\_\_\_\_

5. \_\_\_\_\_

6. \_\_\_\_\_

7. \_\_\_\_\_

8. \_\_\_\_\_

9. \_\_\_\_\_

10. \_\_\_\_\_

11. \_\_\_\_\_

12. \_\_\_\_\_

13. \_\_\_\_\_

14. \_\_\_\_\_

15. \_\_\_\_\_

16. \_\_\_\_\_

17. \_\_\_\_\_

18. \_\_\_\_\_

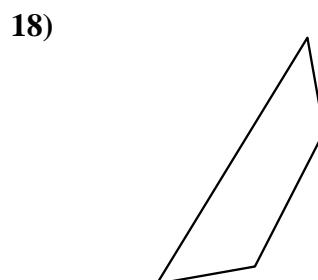
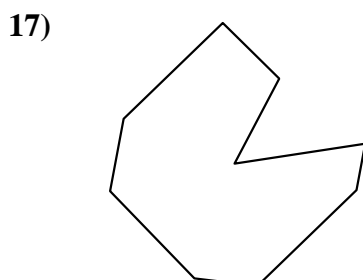
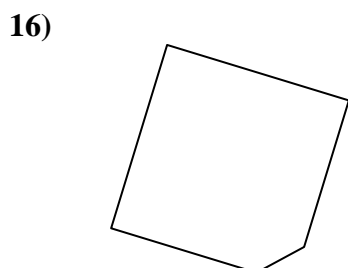
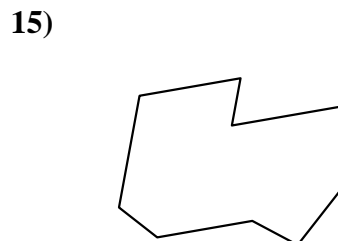
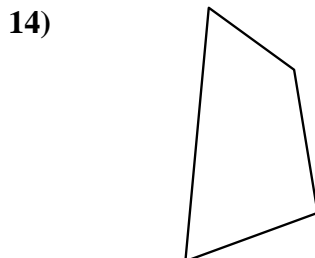
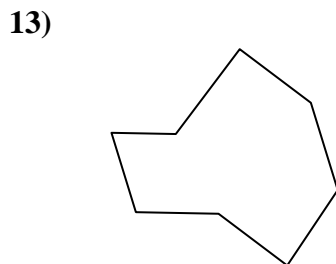
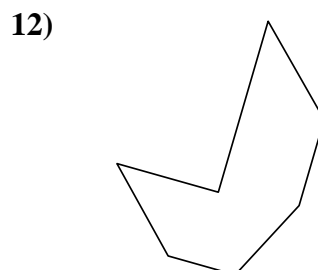
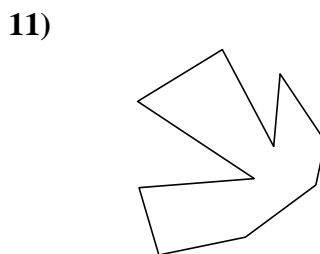
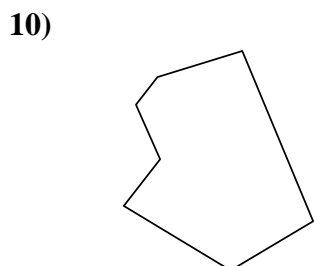
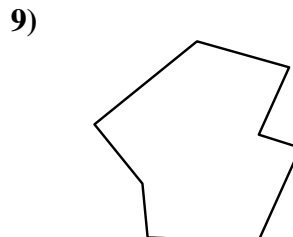
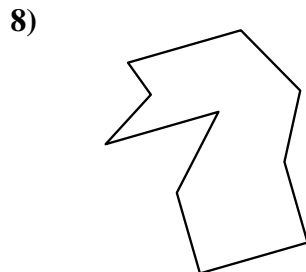
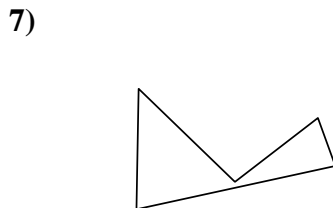
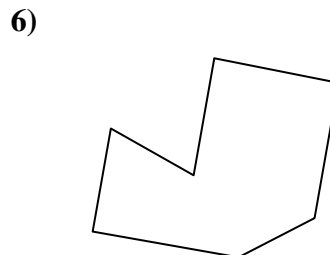
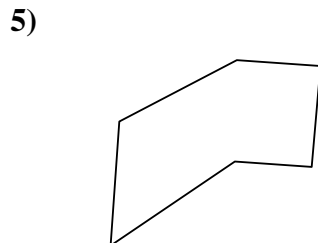
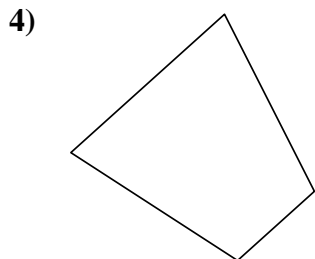
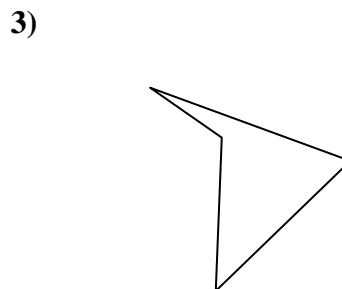
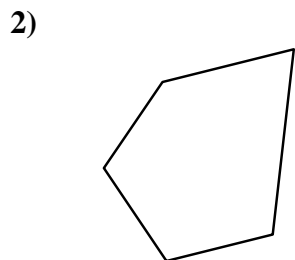
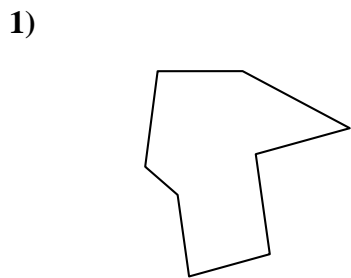
19. \_\_\_\_\_

20. \_\_\_\_\_

21. \_\_\_\_\_



Identify the type of shape shown.



Answers

1. octagon

2. pentagon

3. quadrilateral

4. quadrilateral

5. hexagon

6. heptagon

7. pentagon

8. decagon

9. octagon

10. heptagon

11. decagon

12. heptagon

13. octagon

14. quadrilateral

15. nonagon

16. pentagon

17. nonagon

18. quadrilateral

19. heptagon

20. hexagon

21. nonagon