



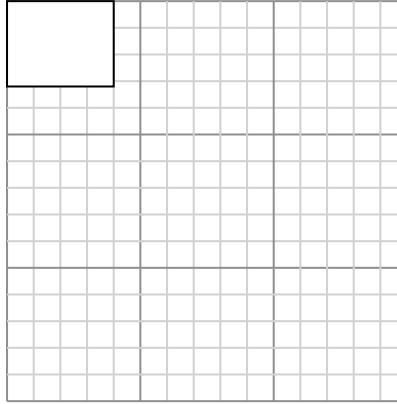
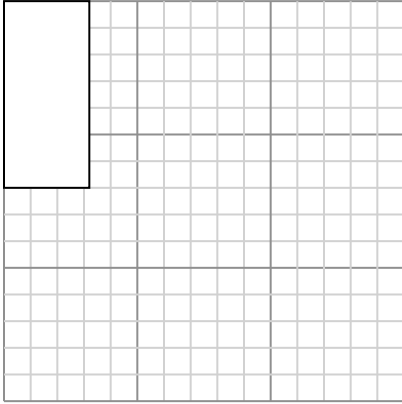
Draw each rectangle to the scale shown and determine the new dimensions.

Answers

- 1) The rectangle below has the dimensions:  
 $3.2 \times 7$

- 2) The rectangle below has the dimensions:  
 $4 \times 3.2$

1. \_\_\_\_\_



2. \_\_\_\_\_

3. \_\_\_\_\_

4. \_\_\_\_\_

5. \_\_\_\_\_

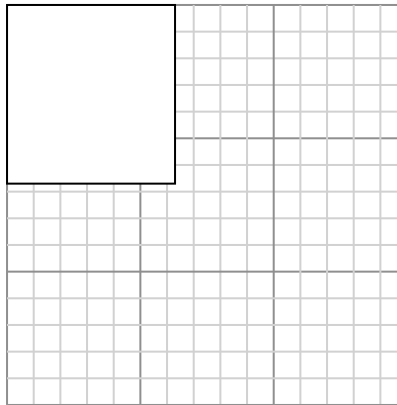
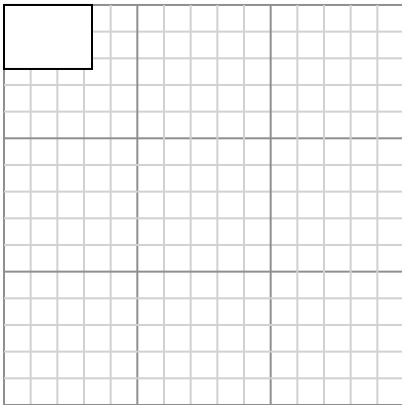
Create another rectangle that is scaled to 4 times the size of the current rectangle.

Create another rectangle that is scaled to 9 times the size of the current rectangle.

6. \_\_\_\_\_

- 3) The rectangle below has the dimensions:  
 $3.3 \times 2.4$

- 4) The rectangle below has the dimensions:  
 $6.3 \times 6.7$

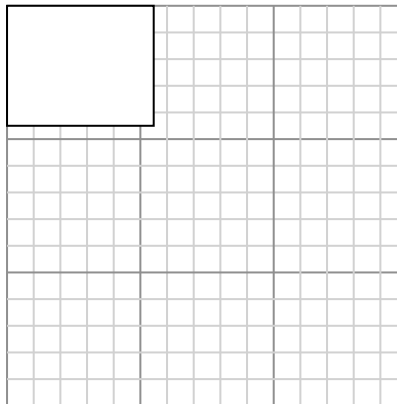
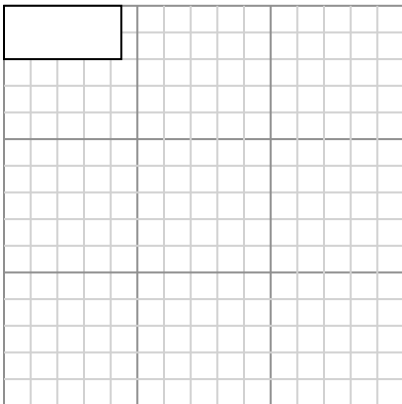


Create another rectangle that is scaled to 9 times the size of the current rectangle.

Create another rectangle that is scaled to 4 times the size of the current rectangle.

- 5) The rectangle below has the dimensions:  
 $4.4 \times 2$

- 6) The rectangle below has the dimensions:  
 $5.5 \times 4.5$



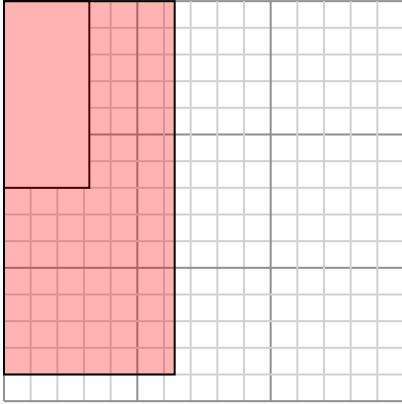
Create another rectangle that is scaled to 9 times the size of the current rectangle.

Create another rectangle that is scaled to 4 times the size of the current rectangle.



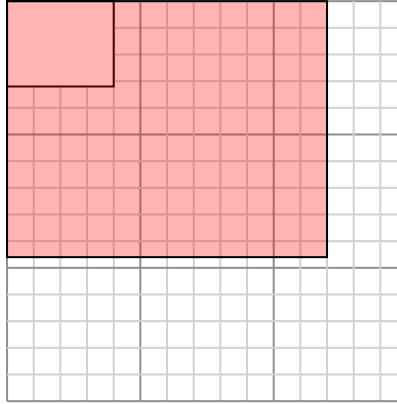
Draw each rectangle to the scale shown and determine the new dimensions.

- 1) The rectangle below has the dimensions:  
 $3.2 \times 7$



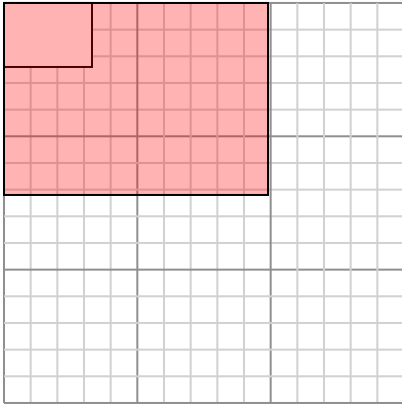
Create another rectangle that is scaled to 4 times the size of the current rectangle.

- 2) The rectangle below has the dimensions:  
 $4 \times 3.2$



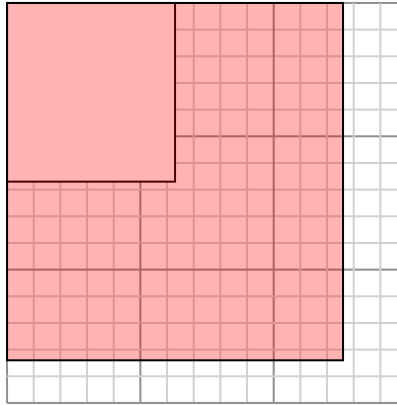
Create another rectangle that is scaled to 9 times the size of the current rectangle.

- 3) The rectangle below has the dimensions:  
 $3.3 \times 2.4$



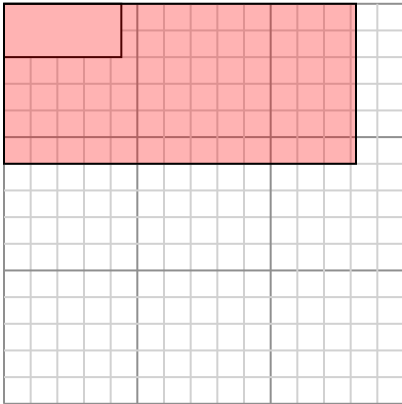
Create another rectangle that is scaled to 9 times the size of the current rectangle.

- 4) The rectangle below has the dimensions:  
 $6.3 \times 6.7$



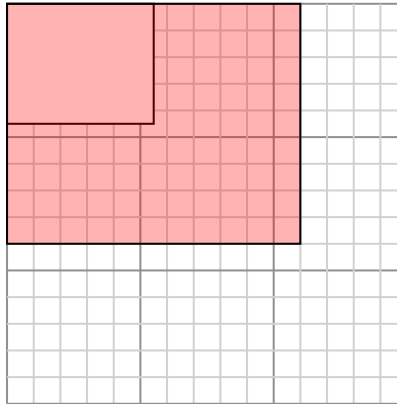
Create another rectangle that is scaled to 4 times the size of the current rectangle.

- 5) The rectangle below has the dimensions:  
 $4.4 \times 2$



Create another rectangle that is scaled to 9 times the size of the current rectangle.

- 6) The rectangle below has the dimensions:  
 $5.5 \times 4.5$



Create another rectangle that is scaled to 4 times the size of the current rectangle.

Answers

1. **6.4×14**

2. **12×9.6**

3. **9.9×7.2**

4. **12.6×13.4**

5. **13.2×6**

6. **11×9**