



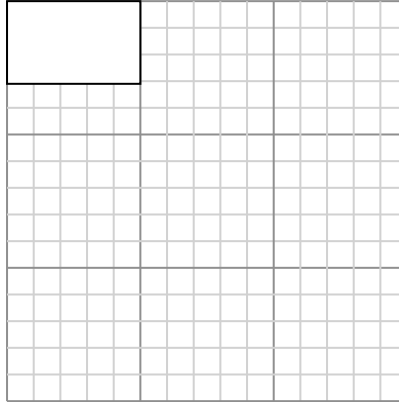
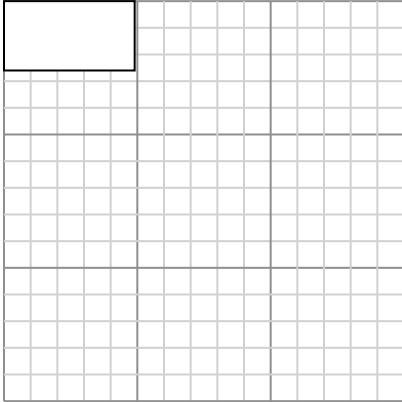
Draw each rectangle to the scale shown and determine the new dimensions.

**Answers**

- 1) The rectangle below has the dimensions:  
 $4.9 \times 2.6$

- 2) The rectangle below has the dimensions:  
 $5 \times 3.1$

1. \_\_\_\_\_



2. \_\_\_\_\_

Create another rectangle that is scaled to 9 times the size of the current rectangle.

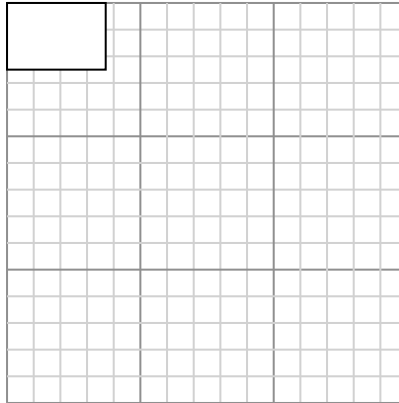
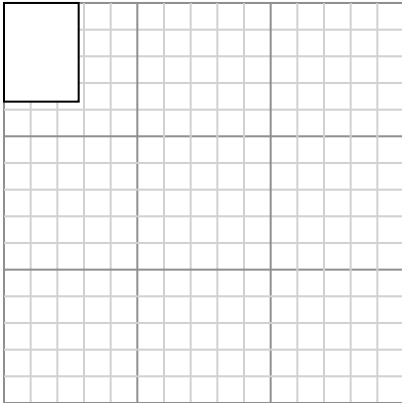
Create another rectangle that is scaled to 9 times the size of the current rectangle.

3. \_\_\_\_\_

- 3) The rectangle below has the dimensions:  
 $2.8 \times 3.7$

- 4) The rectangle below has the dimensions:  
 $3.7 \times 2.5$

4. \_\_\_\_\_



5. \_\_\_\_\_

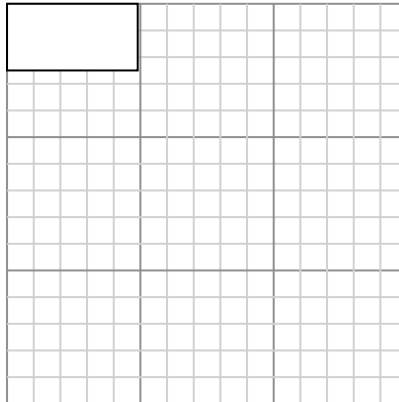
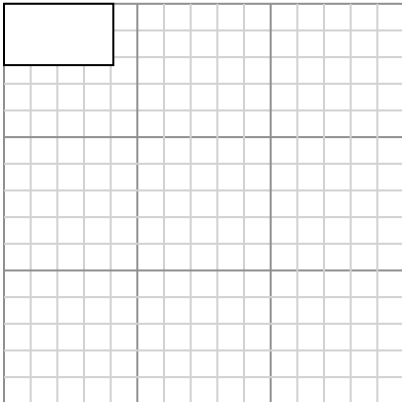
Create another rectangle that is scaled to 9 times the size of the current rectangle.

Create another rectangle that is scaled to 9 times the size of the current rectangle.

6. \_\_\_\_\_

- 5) The rectangle below has the dimensions:  
 $4.1 \times 2.3$

- 6) The rectangle below has the dimensions:  
 $4.9 \times 2.5$



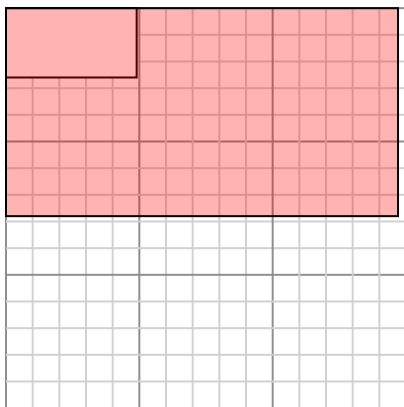
Create another rectangle that is scaled to 9 times the size of the current rectangle.

Create another rectangle that is scaled to 9 times the size of the current rectangle.



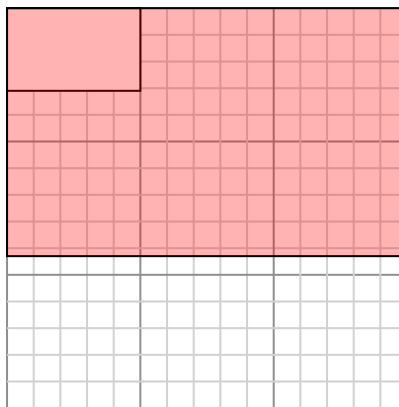
Draw each rectangle to the scale shown and determine the new dimensions.

- 1) The rectangle below has the dimensions:  
 $4.9 \times 2.6$



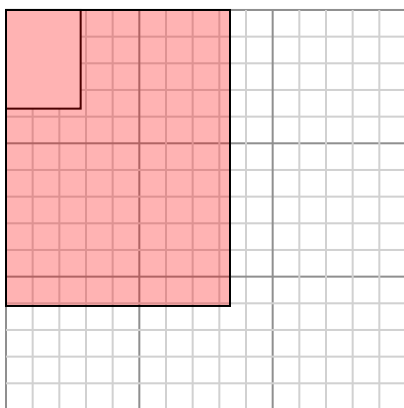
Create another rectangle that is scaled to 9 times the size of the current rectangle.

- 2) The rectangle below has the dimensions:  
 $5 \times 3.1$



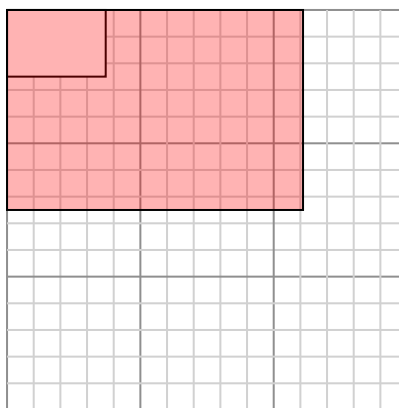
Create another rectangle that is scaled to 9 times the size of the current rectangle.

- 3) The rectangle below has the dimensions:  
 $2.8 \times 3.7$



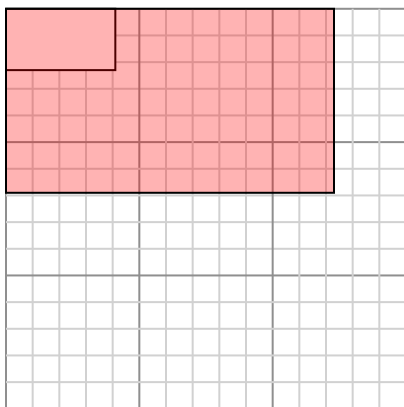
Create another rectangle that is scaled to 9 times the size of the current rectangle.

- 4) The rectangle below has the dimensions:  
 $3.7 \times 2.5$



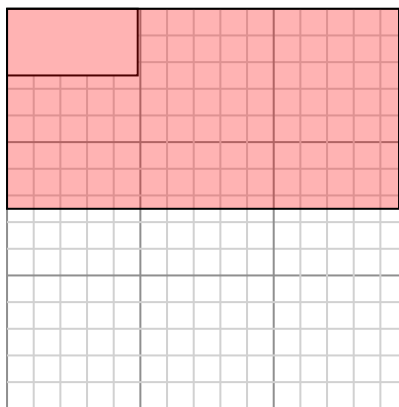
Create another rectangle that is scaled to 9 times the size of the current rectangle.

- 5) The rectangle below has the dimensions:  
 $4.1 \times 2.3$



Create another rectangle that is scaled to 9 times the size of the current rectangle.

- 6) The rectangle below has the dimensions:  
 $4.9 \times 2.5$



Create another rectangle that is scaled to 9 times the size of the current rectangle.

Answers

1. **14.7×7.8**
2. **15×9.3**
3. **8.4×11.1**
4. **11.1×7.5**
5. **12.3×6.9**
6. **14.7×7.5**