




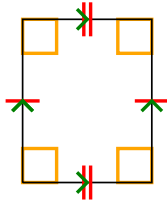
Determine if the shape shown is a Quadrilateral, Kite, Trapezoid, Parallelogram, Rhombus, Rectangle or Square (can be more than one).

Answers

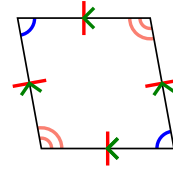
1)



2)



3)



1. _____

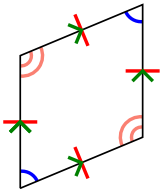
2. _____

3. _____

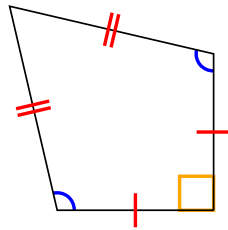
4. _____

5. _____

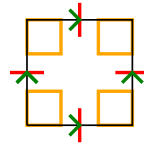
4)



5)



6)



6. _____

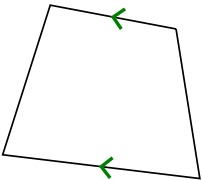
7. _____

8. _____

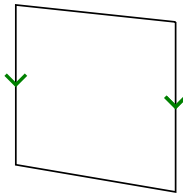
9. _____

10. _____

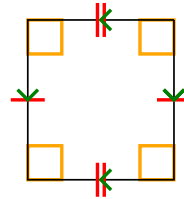
7)



8)



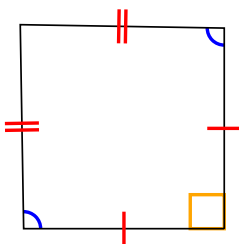
9)



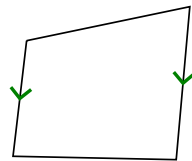
11. _____

12. _____

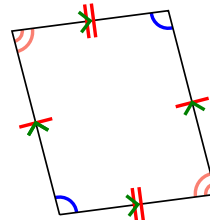
10)



11)

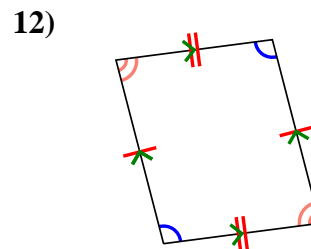
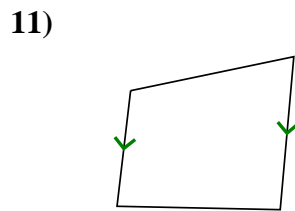
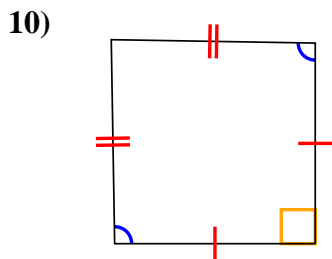
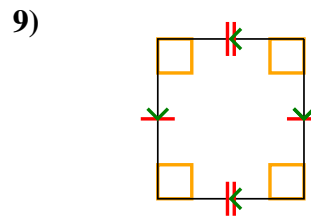
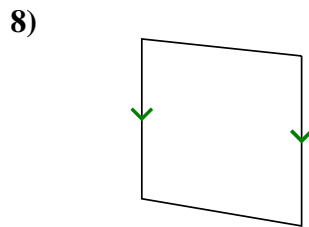
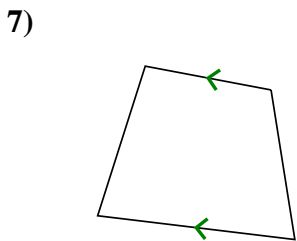
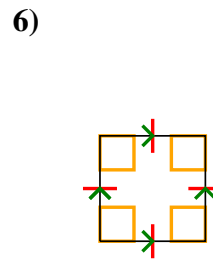
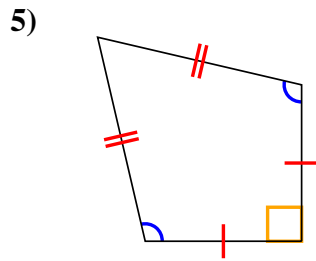
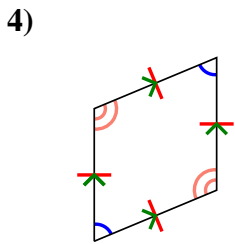
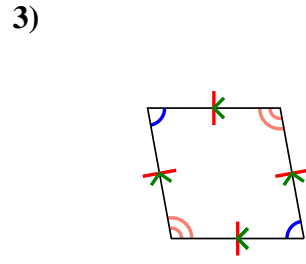
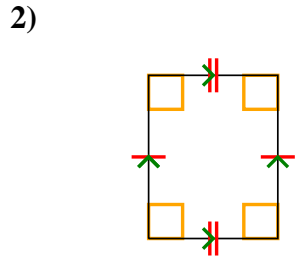
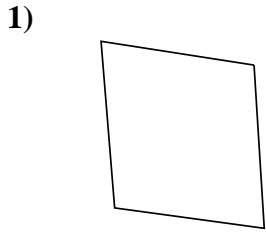


12)





Determine if the shape shown is a Quadrilateral, Kite, Trapezoid, Parallelogram, Rhombus, Rectangle or Square (can be more than one).



Answers

1. Q

2. Q,P,R

3. Q,P,H

4. Q,P,H

5. Q,K

6. Q,P,H,R,S

7. Q,T

8. Q,T

9. Q,P,R

10. Q,K

11. Q,T

12. Q,P