



Use the numberlines to round each number to the nearest 100.

Ex)

36,687



Answers

Ex. 36,700

1)

256



1. \_\_\_\_\_

2)

236



2. \_\_\_\_\_

3)

3,254



3. \_\_\_\_\_

4)

6,168



4. \_\_\_\_\_

5)

2,499



5. \_\_\_\_\_

6)

77,503



6. \_\_\_\_\_

7)

50,845



7. \_\_\_\_\_

8)

126



8. \_\_\_\_\_

9)

197



9. \_\_\_\_\_

10)

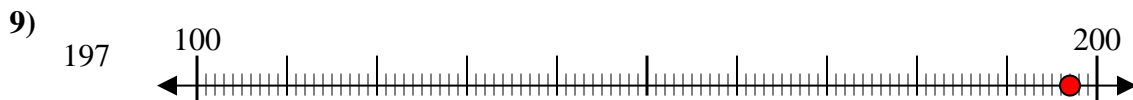
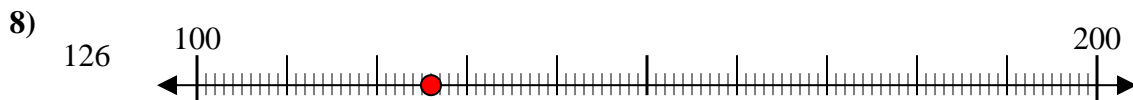
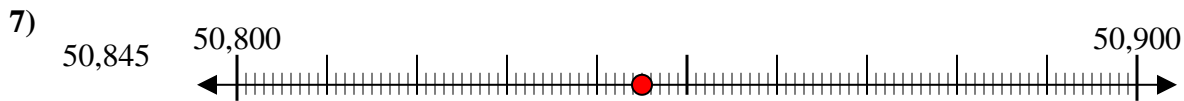
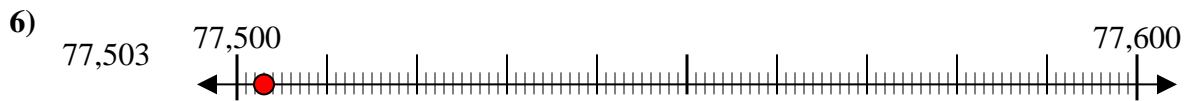
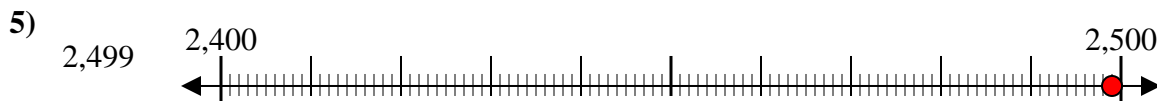
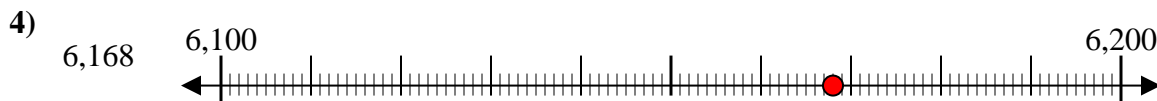
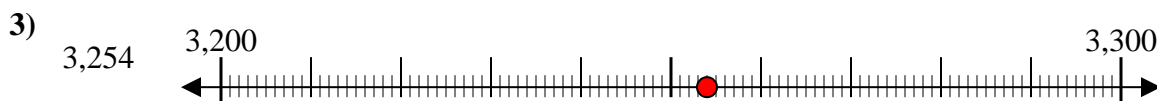
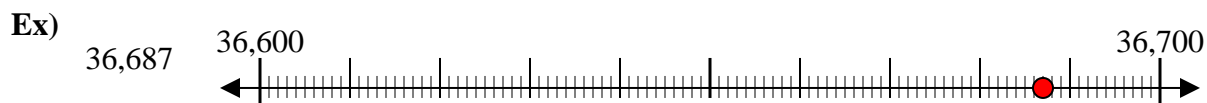
1,502



10. \_\_\_\_\_



Use the numberlines to round each number to the nearest 100.



Answers

Ex. 36,700

1. 300

2. 200

3. 3,300

4. 6,200

5. 2,500

6. 77,500

7. 50,800

8. 100

9. 200

10. 1,500