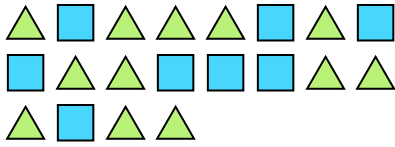




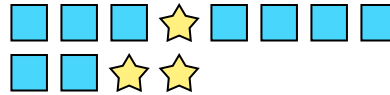
Solve each problem.

Answers

Ex) What is the ratio of triangles to squares?



1) What is the ratio of stars to squares?



Ex. **12:8**

2) What is the ratio of moons to stars?



3) What is the ratio of moons to stars?



1. _____

2. _____

3. _____

4. _____

5. _____

6. _____

7. _____


8. _____

9. _____


10. _____

11. _____

4) What is the ratio of stars to hearts?



5) What is the ratio of triangles to hearts?




6) What is the ratio of hearts to moons?



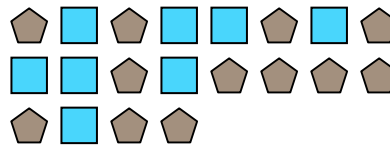
7) What is the ratio of hearts to stars?



8) What is the ratio of hearts to circles?



9) What is the ratio of squares to pentagons?



10) What is the ratio of hearts to pentagons?



11) What is the ratio of squares to stars?

