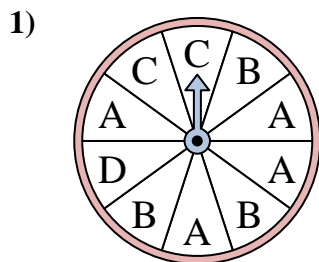


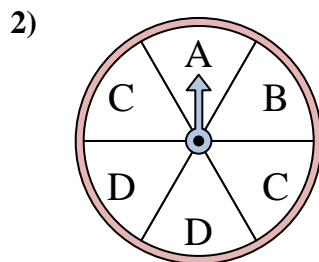


Solve each problem. Round your answer to the nearest tenth.

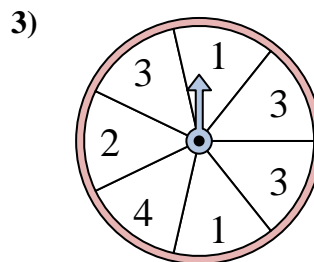
**Answers**



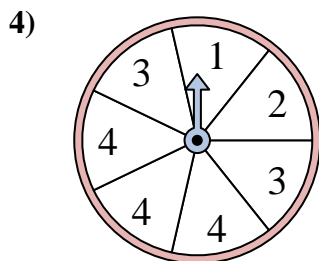
The spinner has a \_\_\_\_\_% chance of landing on a B.



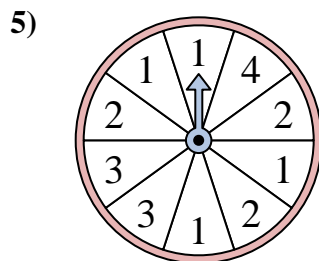
The spinner has a \_\_\_\_\_% chance of landing on a B.



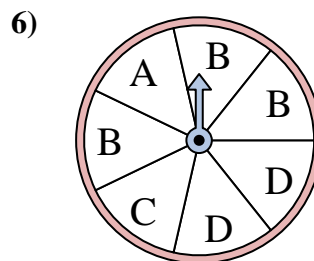
The spinner has a \_\_\_\_\_% chance of landing on a 2.



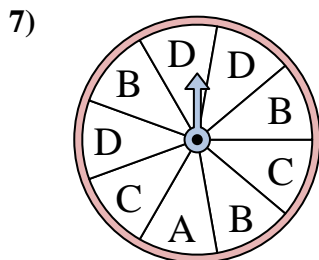
The spinner has a \_\_\_\_\_% chance of landing on a 4.



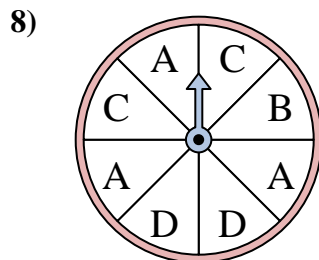
The spinner has a \_\_\_\_\_% chance of landing on a 2.



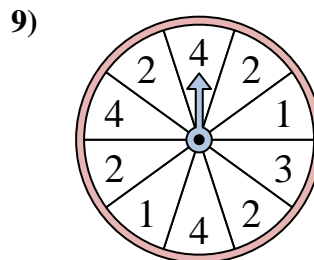
The spinner has a \_\_\_\_\_% chance of landing on a C.



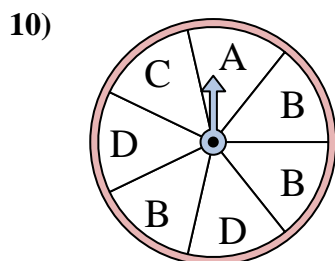
The spinner has a \_\_\_\_\_% chance of landing on a A.



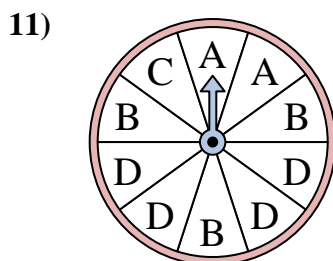
The spinner has a \_\_\_\_\_% chance of landing on a C.



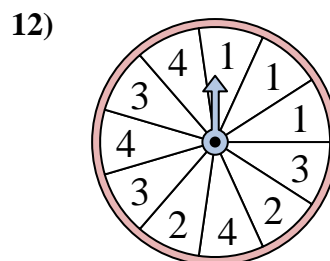
The spinner has a \_\_\_\_\_% chance of landing on a 2.



The spinner has a \_\_\_\_\_% chance of landing on a C.



The spinner has a \_\_\_\_\_% chance of landing on a A.

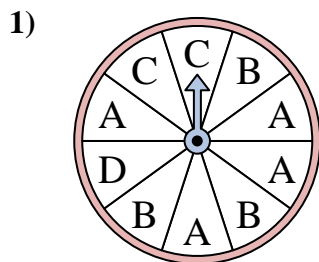


The spinner has a \_\_\_\_\_% chance of landing on a 2.

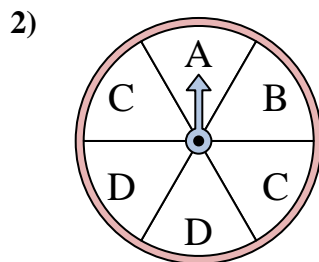
1. \_\_\_\_\_
2. \_\_\_\_\_
3. \_\_\_\_\_
4. \_\_\_\_\_
5. \_\_\_\_\_
6. \_\_\_\_\_
7. \_\_\_\_\_
8. \_\_\_\_\_
9. \_\_\_\_\_
10. \_\_\_\_\_
11. \_\_\_\_\_
12. \_\_\_\_\_



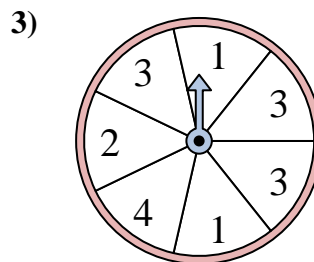
Solve each problem. Round your answer to the nearest tenth.



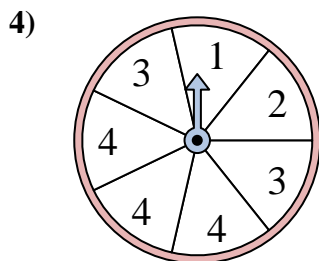
The spinner has a \_\_\_\_\_% chance of landing on a B.



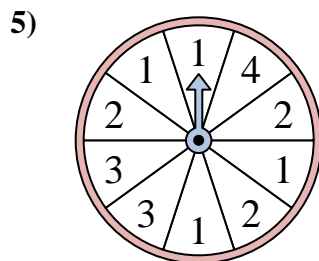
The spinner has a \_\_\_\_\_% chance of landing on a B.



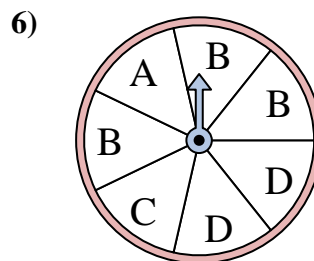
The spinner has a \_\_\_\_\_% chance of landing on a 2.



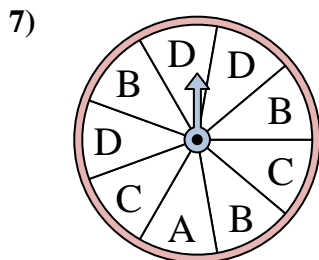
The spinner has a \_\_\_\_\_% chance of landing on a 4.



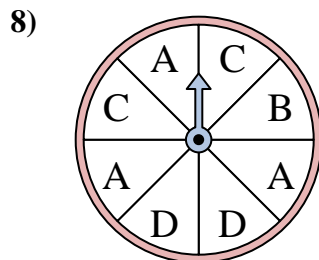
The spinner has a \_\_\_\_\_% chance of landing on a 2.



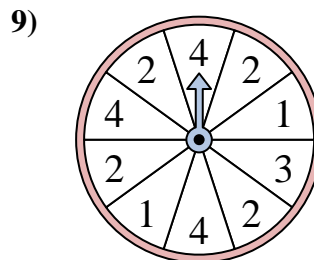
The spinner has a \_\_\_\_\_% chance of landing on a C.



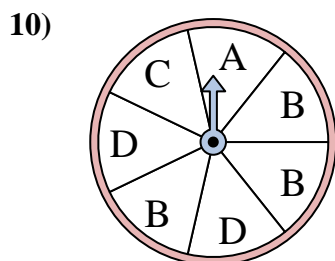
The spinner has a \_\_\_\_\_% chance of landing on a A.



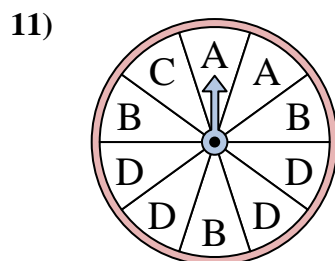
The spinner has a \_\_\_\_\_% chance of landing on a C.



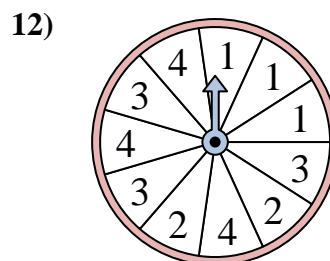
The spinner has a \_\_\_\_\_% chance of landing on a 2.



The spinner has a \_\_\_\_\_% chance of landing on a C.



The spinner has a \_\_\_\_\_% chance of landing on a A.



The spinner has a \_\_\_\_\_% chance of landing on a 2.

Answers

1. 30
2. 16.7
3. 14.3
4. 42.9
5. 30
6. 14.3
7. 11.1
8. 25
9. 40
10. 14.3
11. 20
12. 18.2