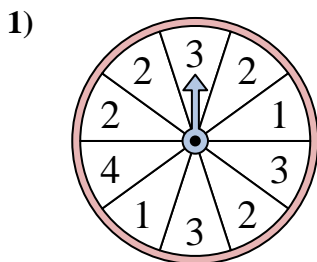


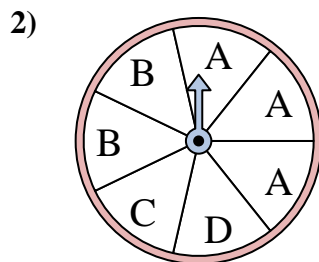


Solve each problem. Round your answer to the nearest tenth.

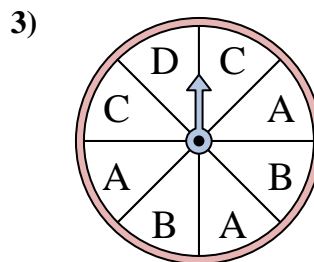
**Answers**



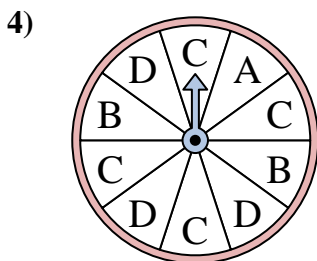
The spinner has a \_\_\_\_\_% chance of landing on a 2.



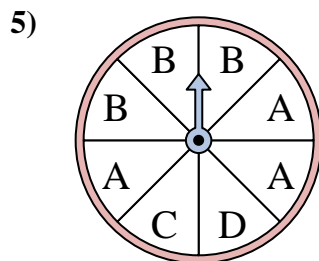
The spinner has a \_\_\_\_\_% chance of landing on a D.



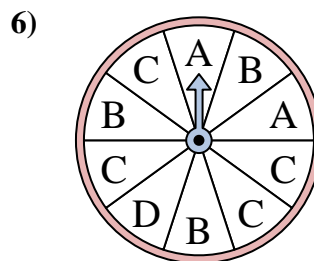
The spinner has a \_\_\_\_\_% chance of landing on a A.



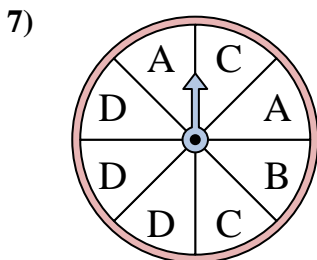
The spinner has a \_\_\_\_\_% chance of landing on a D.



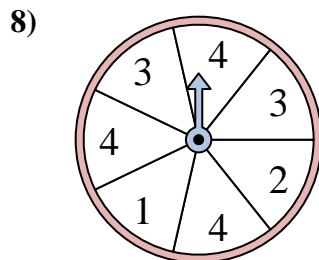
The spinner has a \_\_\_\_\_% chance of landing on a D.



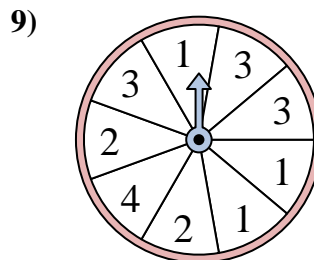
The spinner has a \_\_\_\_\_% chance of landing on a B.



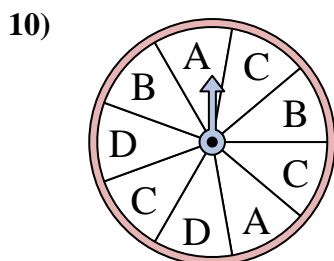
The spinner has a \_\_\_\_\_% chance of landing on a D.



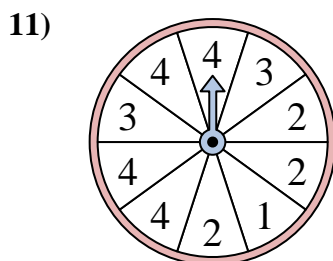
The spinner has a \_\_\_\_\_% chance of landing on a 2.



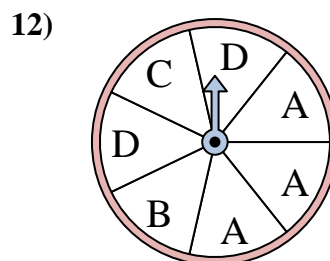
The spinner has a \_\_\_\_\_% chance of landing on a 1.



The spinner has a \_\_\_\_\_% chance of landing on a C.



The spinner has a \_\_\_\_\_% chance of landing on a 4.

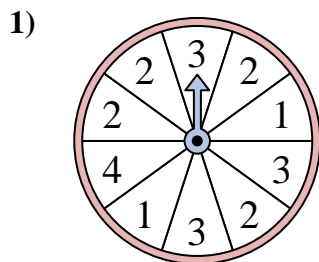


The spinner has a \_\_\_\_\_% chance of landing on a D.

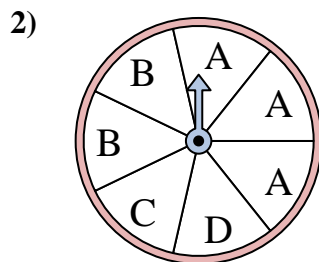
1. \_\_\_\_\_
2. \_\_\_\_\_
3. \_\_\_\_\_
4. \_\_\_\_\_
5. \_\_\_\_\_
6. \_\_\_\_\_
7. \_\_\_\_\_
8. \_\_\_\_\_
9. \_\_\_\_\_
10. \_\_\_\_\_
11. \_\_\_\_\_
12. \_\_\_\_\_



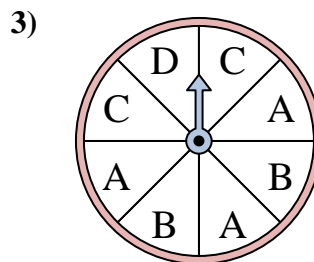
Solve each problem. Round your answer to the nearest tenth.



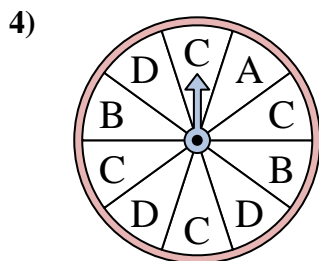
The spinner has a \_\_\_\_\_% chance of landing on a 2.



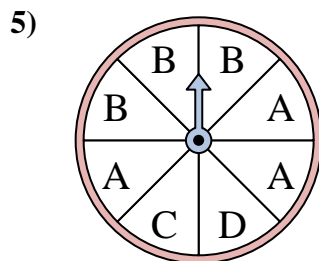
The spinner has a \_\_\_\_\_% chance of landing on a D.



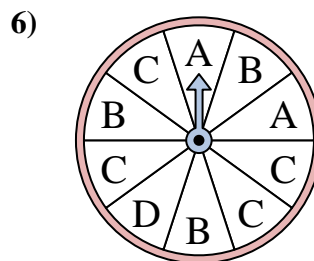
The spinner has a \_\_\_\_\_% chance of landing on a A.



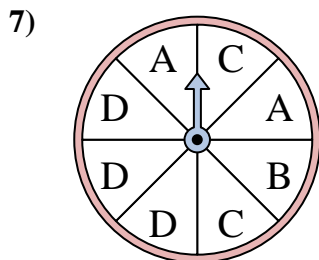
The spinner has a \_\_\_\_\_% chance of landing on a D.



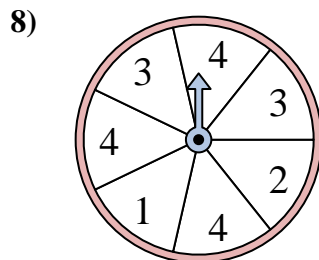
The spinner has a \_\_\_\_\_% chance of landing on a D.



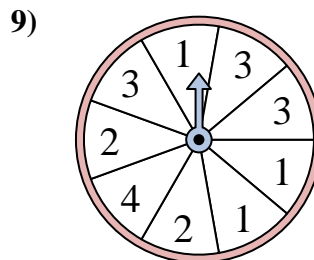
The spinner has a \_\_\_\_\_% chance of landing on a B.



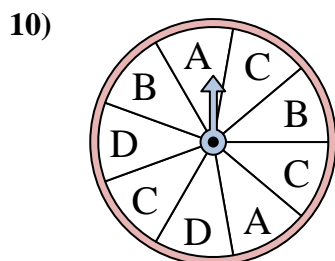
The spinner has a \_\_\_\_\_% chance of landing on a D.



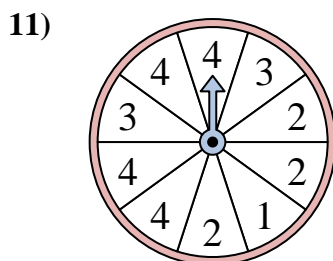
The spinner has a \_\_\_\_\_% chance of landing on a 2.



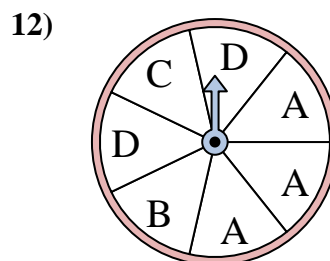
The spinner has a \_\_\_\_\_% chance of landing on a 1.



The spinner has a \_\_\_\_\_% chance of landing on a C.



The spinner has a \_\_\_\_\_% chance of landing on a 4.



The spinner has a \_\_\_\_\_% chance of landing on a D.

**Answers**

1. 40
2. 14.3
3. 37.5
4. 30
5. 12.5
6. 30
7. 37.5
8. 14.3
9. 33.3
10. 33.3
11. 40
12. 28.6