




Determine which letter best completes the pattern.

Answers

1) Determine which letter best completes the pattern.



- A.
- B.
- C.
- D.

2) Determine which letter best completes the pattern.



- A.
- B.
- C.
- D.

3) Determine which letter best completes the pattern.



- A.
- B.
- C.
- D.

4) Determine which letter best completes the pattern.



- A.
- B.
- C.
- D.

5) Determine which letter best completes the pattern.




- A.
- B.
- C.
- D.

- 1. _____
- 2. _____
- 3. _____
- 4. _____
- 5. _____



Determine which letter best completes the pattern.

1) Determine which letter best completes the pattern.



- A.
- B.
- C.
- D.

2) Determine which letter best completes the pattern.



- A.
- B.
- C.
- D.

3) Determine which letter best completes the pattern.



- A.
- B.
- C.
- D.

4) Determine which letter best completes the pattern.



- A.
- B.
- C.
- D.

5) Determine which letter best completes the pattern.



- A.
- B.
- C.
- D.

Answers

1. **A**

2. **B**

3. **D**

4. **A**

5. **D**



Determine which letter best completes the pattern.

Answers

1) Determine which letter best completes the pattern.



- A.
- B.
- C.
- D.


1. _____

2. _____

3. _____

4. _____

2) Determine which letter best completes the pattern.



- A.
- B.
- C.
- D.

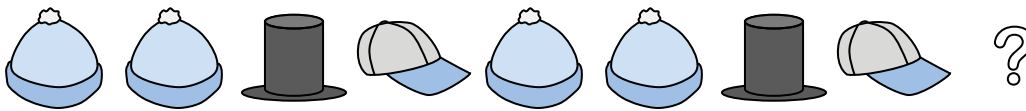
5. _____

3) Determine which letter best completes the pattern.



- A.
- B.
- C.
- D.

4) Determine which letter best completes the pattern.



- A.
- B.
- C.
- D.

5) Determine which letter best completes the pattern.




- A.
- B.
- C.
- D.





Determine which letter best completes the pattern.

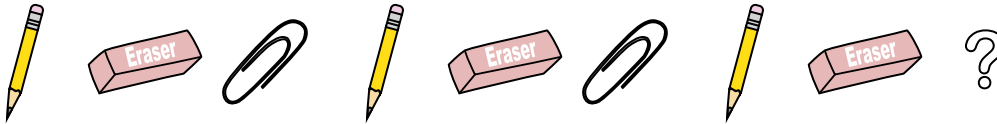
1) Determine which letter best completes the pattern.



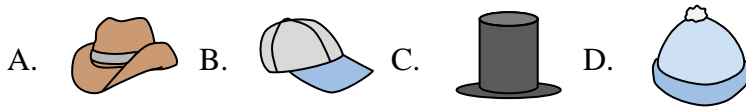
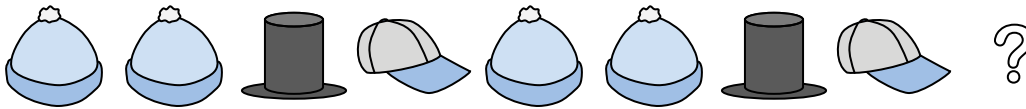
2) Determine which letter best completes the pattern.



3) Determine which letter best completes the pattern.



4) Determine which letter best completes the pattern.



5) Determine which letter best completes the pattern.



Answers

1. **B**

2. **B**

3. **B**

4. **D**

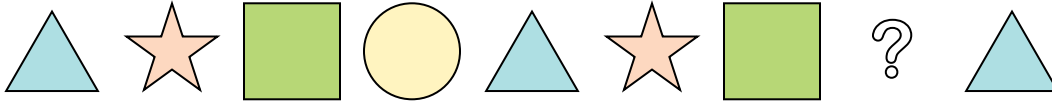
5. **B**







Determine which letter best completes the pattern.

Answers

1) Determine which letter best completes the pattern.



- A. 
- B. 
- C. 
- D. 

1. _____


2. _____





3. _____

4. _____

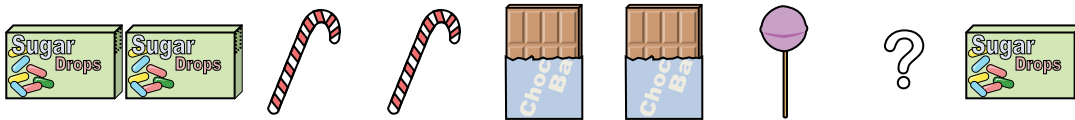
5. _____



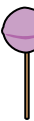
2) Determine which letter best completes the pattern.



- A. 
- B. 
- C. 
- D. 

3) Determine which letter best completes the pattern.



- A. 
- B. 
- C. 
- D. 





4) Determine which letter best completes the pattern.



- A. 
- B. 
- C. 
- D. 

5) Determine which letter best completes the pattern.

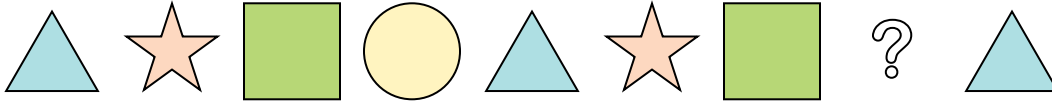


- A. 
- B. 
- C. 
- D. 




Determine which letter best completes the pattern.

1) Determine which letter best completes the pattern.




- A.
- B.
- C.
- D.

2) Determine which letter best completes the pattern.



- A.
- B.
- C.
- D.

3) Determine which letter best completes the pattern.



- A.
- B.
- C.
- D.

4) Determine which letter best completes the pattern.



- A.
- B.
- C.
- D.

5) Determine which letter best completes the pattern.



- A.
- B.
- C.
- D.

Answers

1. **D**

2. **C**

3. **C**

4. **A**

5. **A**



Determine which letter best completes the pattern.

Answers

1) Determine which letter best completes the pattern.



- A.
- B.
- C.
- D.

1. _____

2. _____

3. _____

4. _____

5. _____

2) Determine which letter best completes the pattern.



- A.
- B.
- C.
- D.

3) Determine which letter best completes the pattern.



- A.
- B.
- C.
- D.

4) Determine which letter best completes the pattern.



- A.
- B.
- C.
- D.

5) Determine which letter best completes the pattern.



- A.
- B.
- C.
- D.

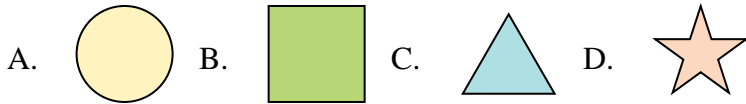


Determine which letter best completes the pattern.

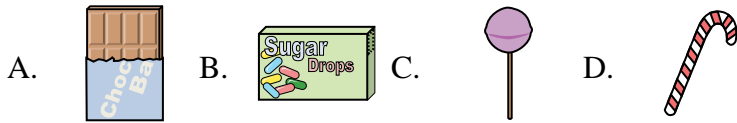
1) Determine which letter best completes the pattern.



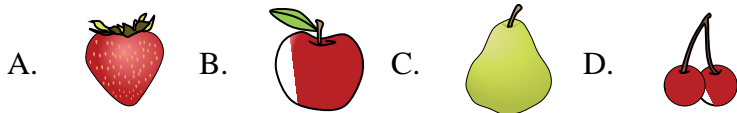
2) Determine which letter best completes the pattern.





3) Determine which letter best completes the pattern.



4) Determine which letter best completes the pattern.



5) Determine which letter best completes the pattern.



Answers

1. **D**

2. **B**

3. **D**

4. **A**


5. **A**



Determine which letter best completes the pattern.

Answers

1) Determine which letter best completes the pattern.




- A.
- B.
- C.
- D.

2) Determine which letter best completes the pattern.



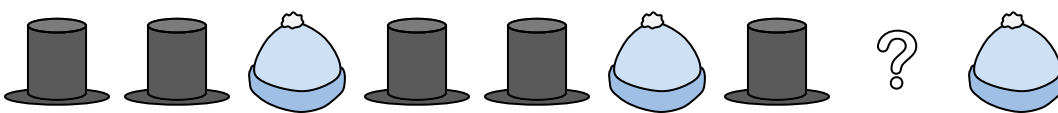
- A.
- B.
- C.
- D.

3) Determine which letter best completes the pattern.



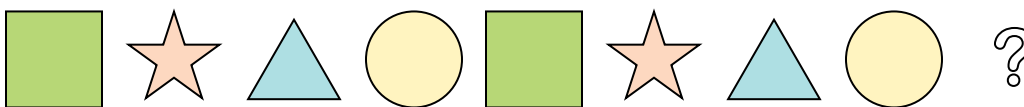
- A.
- B.
- C.
- D.

4) Determine which letter best completes the pattern.



- A.
- B.
- C.
- D.

5) Determine which letter best completes the pattern.



- A.
- B.
- C.
- D.

1. _____

2. _____

3. _____

4. _____

5. _____



Determine which letter best completes the pattern.

1) Determine which letter best completes the pattern.



- A.
- B.
- C.
- D.

2) Determine which letter best completes the pattern.



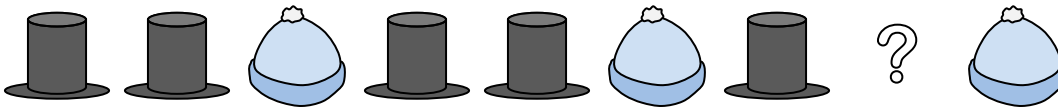
- A.
- B.
- C.
- D.

3) Determine which letter best completes the pattern.



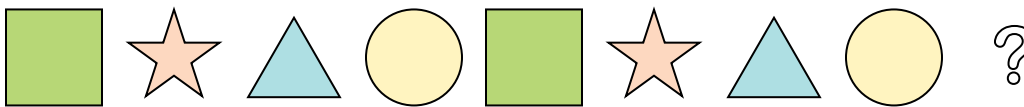
- A.
- B.
- C.
- D.

4) Determine which letter best completes the pattern.



- A.
- B.
- C.
- D.

5) Determine which letter best completes the pattern.



- A.
- B.
- C.
- D.

Answers

1. **D**

2. **C**

3. **C**

4. **D**

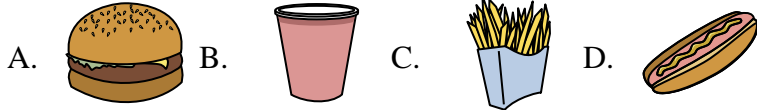
5. **C**



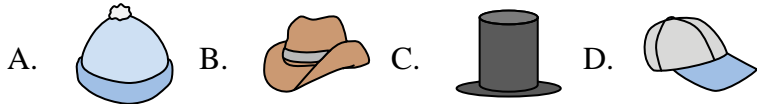
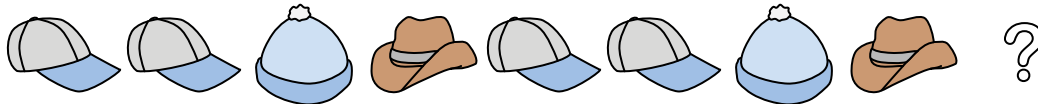
Determine which letter best completes the pattern.

Answers

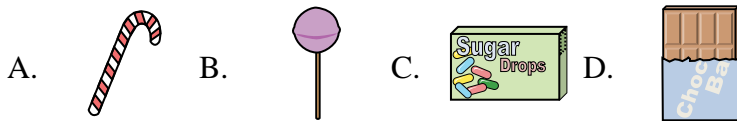
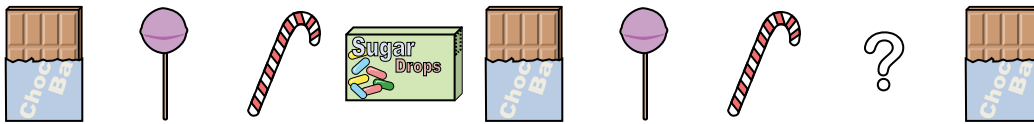
1) Determine which letter best completes the pattern.



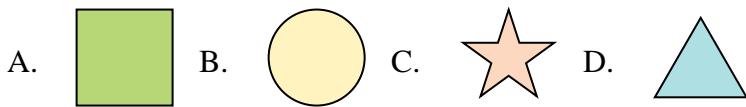
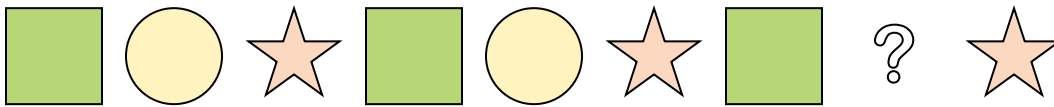
2) Determine which letter best completes the pattern.




3) Determine which letter best completes the pattern.



4) Determine which letter best completes the pattern.



5) Determine which letter best completes the pattern.



1. _____

2. _____

3. _____

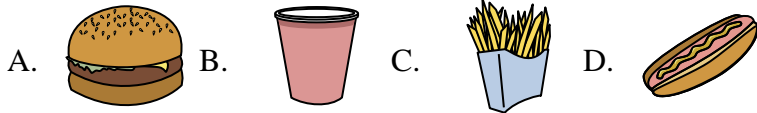
4. _____

5. _____

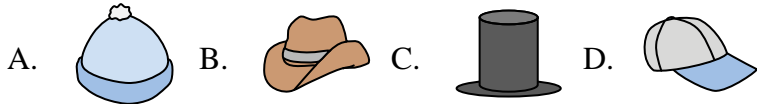
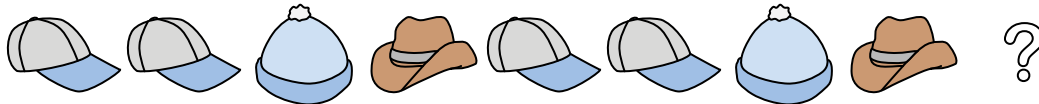


Determine which letter best completes the pattern.

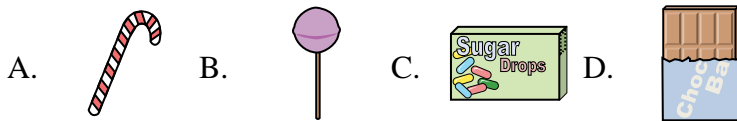
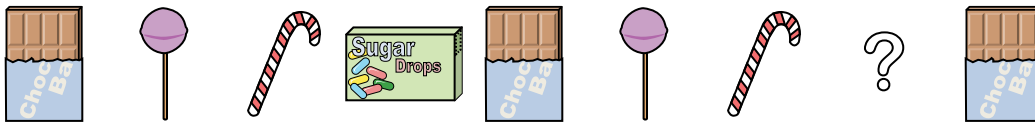
1) Determine which letter best completes the pattern.



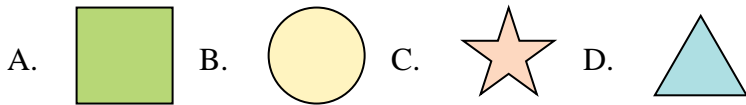
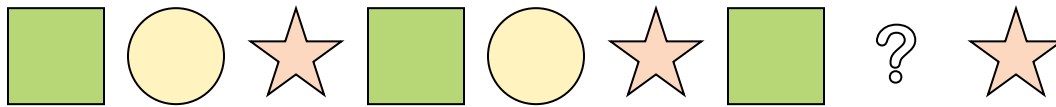
2) Determine which letter best completes the pattern.




3) Determine which letter best completes the pattern.



4) Determine which letter best completes the pattern.



5) Determine which letter best completes the pattern.



Answers

1. **B**

2. **D**

3. **C**

4. **B**


5. **A**



Determine which letter best completes the pattern.

Answers

1) Determine which letter best completes the pattern.



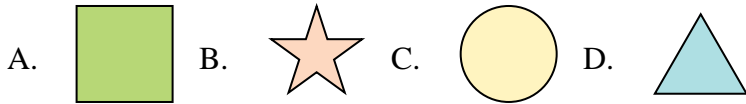
1. _____

2. _____

3. _____

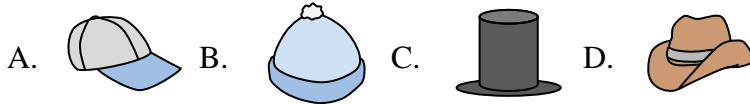
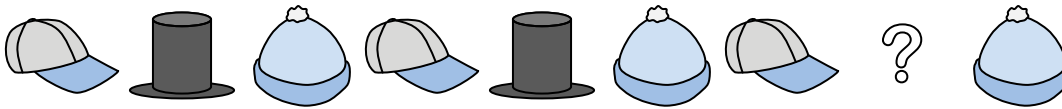
4. _____

2) Determine which letter best completes the pattern.

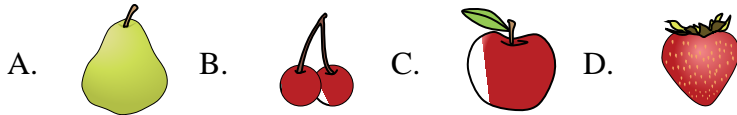


5. _____

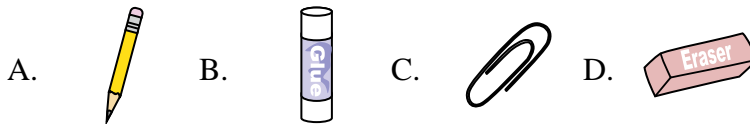
3) Determine which letter best completes the pattern.



4) Determine which letter best completes the pattern.




5) Determine which letter best completes the pattern.



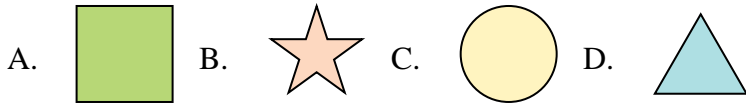


Determine which letter best completes the pattern.

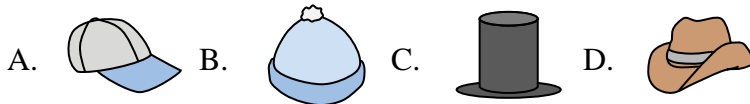

1) Determine which letter best completes the pattern.



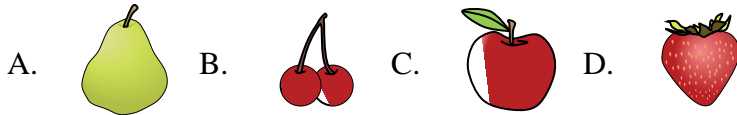
2) Determine which letter best completes the pattern.



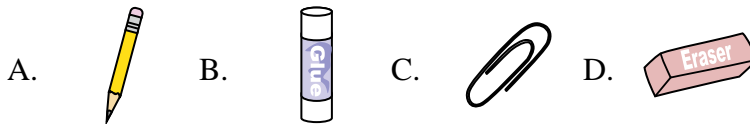
3) Determine which letter best completes the pattern.



4) Determine which letter best completes the pattern.



5) Determine which letter best completes the pattern.



Answers

1. **A**

2. **C**

3. **C**

4. **D**

5. **B**



Determine which letter best completes the pattern.

Answers

1) Determine which letter best completes the pattern.



- A.
- B.
- C.
- D.

2) Determine which letter best completes the pattern.




- A.
- B.
- C.
- D.

3) Determine which letter best completes the pattern.



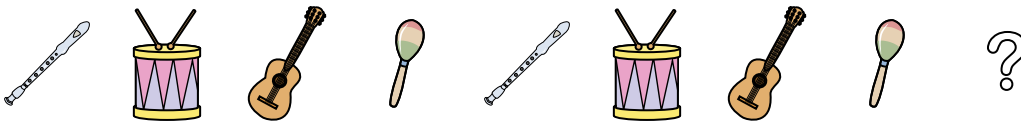
- A.
- B.
- C.
- D.

4) Determine which letter best completes the pattern.



- A.
- B.
- C.
- D.

5) Determine which letter best completes the pattern.



- A.
- B.
- C.
- D.

1. _____

2. _____

3. _____

4. _____

5. _____



Determine which letter best completes the pattern.

1) Determine which letter best completes the pattern.



- A.
- B.
- C.
- D.

2) Determine which letter best completes the pattern.




- A.
- B.
- C.
- D.

3) Determine which letter best completes the pattern.



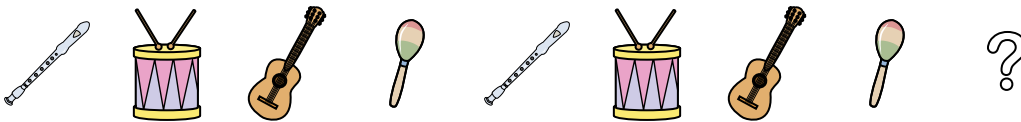
- A.
- B.
- C.
- D.

4) Determine which letter best completes the pattern.



- A.
- B.
- C.
- D.

5) Determine which letter best completes the pattern.



- A.
- B.
- C.
- D.

Answers

1. **D**

2. **D**

3. **D**

4. **B**

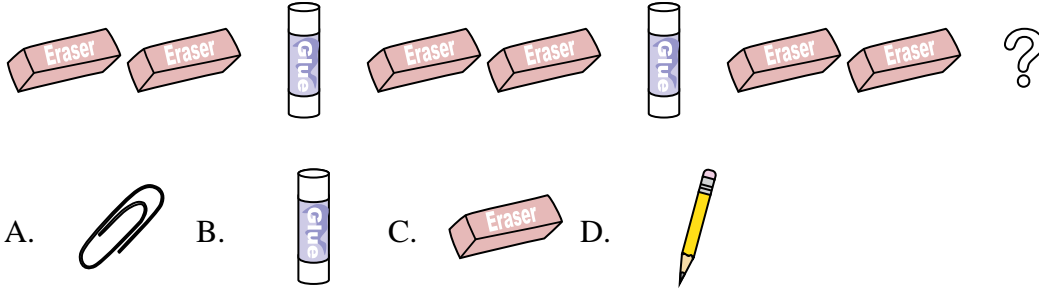
5. **D**



Determine which letter best completes the pattern.

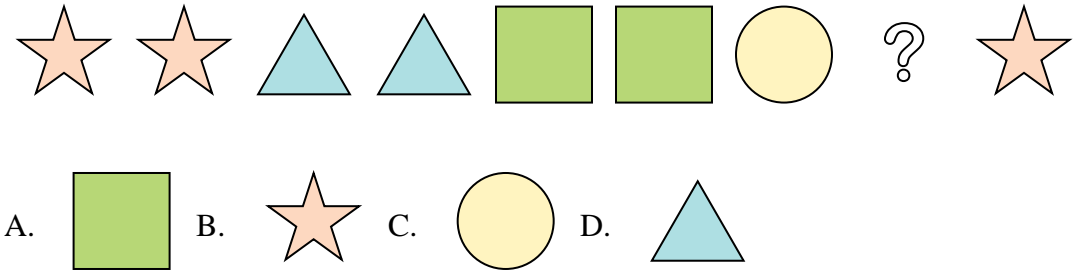
Answers

1) Determine which letter best completes the pattern.

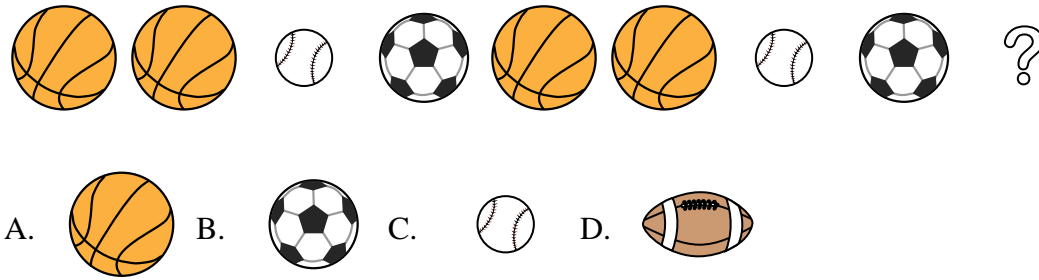


- 1. _____
- 2. _____
- 3. _____
- 4. _____
- 5. _____

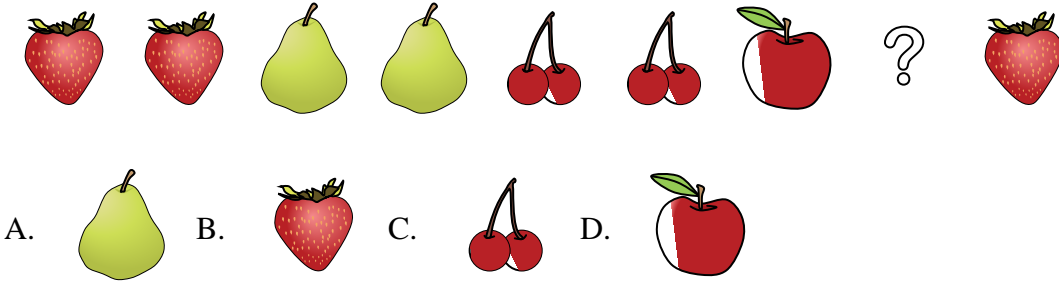
2) Determine which letter best completes the pattern.



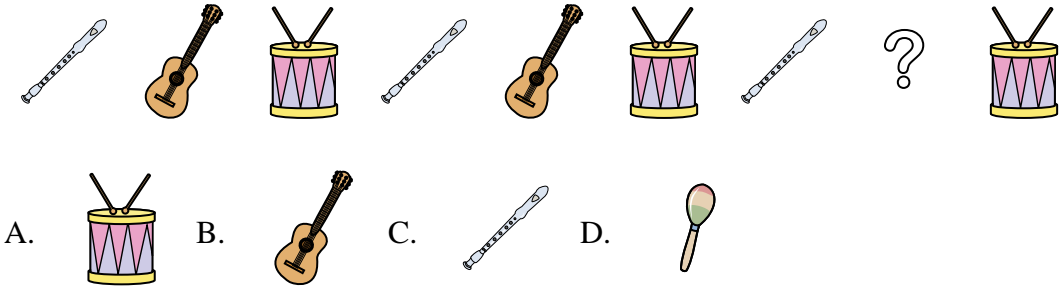
3) Determine which letter best completes the pattern.



4) Determine which letter best completes the pattern.



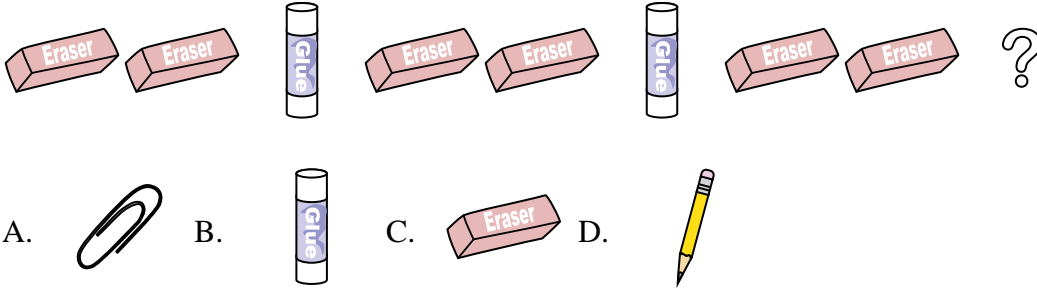
5) Determine which letter best completes the pattern.



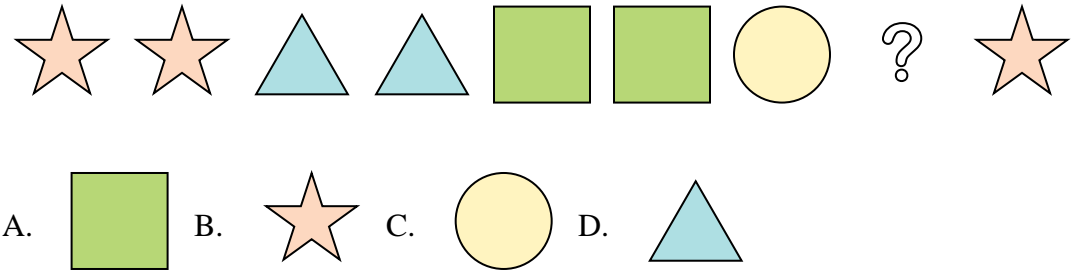


Determine which letter best completes the pattern.

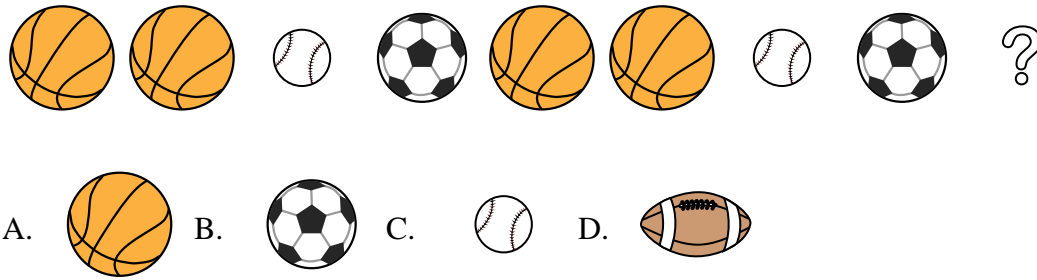
1) Determine which letter best completes the pattern.



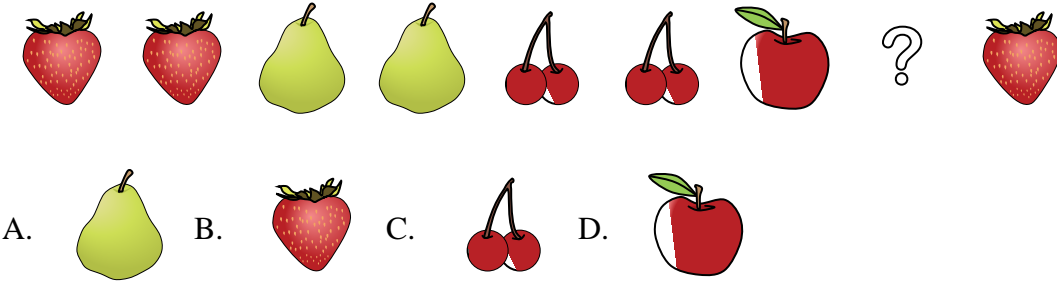
2) Determine which letter best completes the pattern.



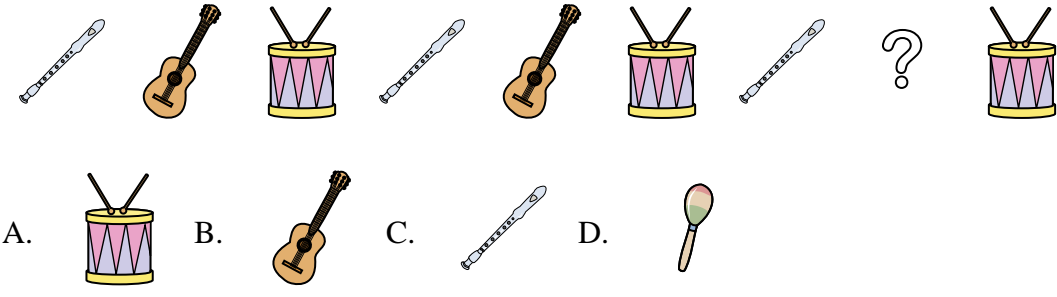
3) Determine which letter best completes the pattern.



4) Determine which letter best completes the pattern.



5) Determine which letter best completes the pattern.



Answers

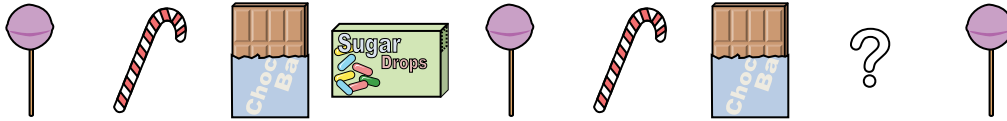
- 1. **B**
- 2. **C**
- 3. **A**
- 4. **D**
- 5. **B**



Determine which letter best completes the pattern.

Answers

1) Determine which letter best completes the pattern.



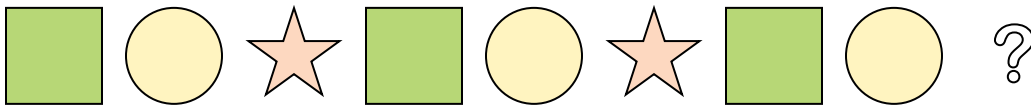
- A.
- B.
- C.
- D.

2) Determine which letter best completes the pattern.



- A.
- B.
- C.
- D.

3) Determine which letter best completes the pattern.



- A.
- B.
- C.
- D.

4) Determine which letter best completes the pattern.



- A.
- B.
- C.
- D.

5) Determine which letter best completes the pattern.



- A.
- B.
- C.
- D.

1. _____

2. _____

3. _____

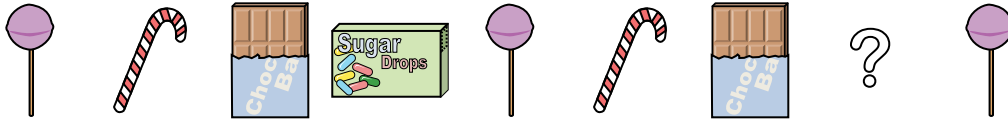
4. _____

5. _____



Determine which letter best completes the pattern.

1) Determine which letter best completes the pattern.



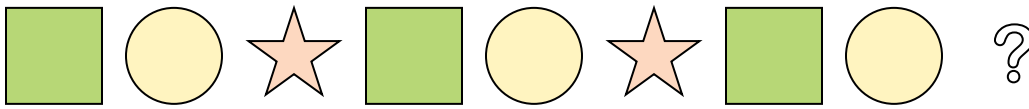
- A.
- B.
- C.
- D.

2) Determine which letter best completes the pattern.



- A.
- B.
- C.
- D.

3) Determine which letter best completes the pattern.



- A.
- B.
- C.
- D.

4) Determine which letter best completes the pattern.



- A.
- B.
- C.
- D.

5) Determine which letter best completes the pattern.



- A.
- B.
- C.
- D.

Answers

1. **C**

2. **D**

3. **A**

4. **C**

5. **C**