



Determine which letter best completes the pattern.

Answers

1) Determine which letter best completes the pattern.



- A.
- B.
- C.
- D.


1. _____

2. _____

3. _____

4. _____

2) Determine which letter best completes the pattern.



- A.
- B.
- C.
- D.

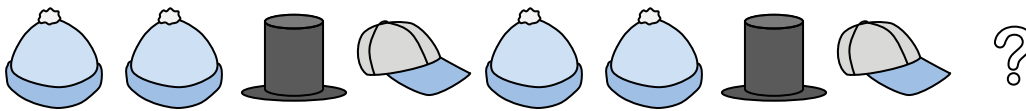
5. _____

3) Determine which letter best completes the pattern.



- A.
- B.
- C.
- D.

4) Determine which letter best completes the pattern.



- A.
- B.
- C.
- D.

5) Determine which letter best completes the pattern.




- A.
- B.
- C.
- D.




Determine which letter best completes the pattern.

1) Determine which letter best completes the pattern.



- A.
- B.
- C.
- D.

2) Determine which letter best completes the pattern.



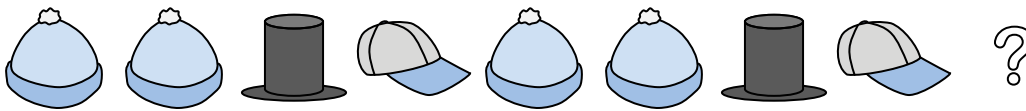
- A.
- B.
- C.
- D.

3) Determine which letter best completes the pattern.



- A.
- B.
- C.
- D.

4) Determine which letter best completes the pattern.



- A.
- B.
- C.
- D.

5) Determine which letter best completes the pattern.



- A.
- B.
- C.
- D.

Answers

1. **B**

2. **B**

3. **B**

4. **D**

5. **B**