

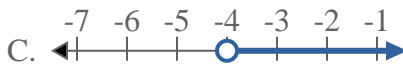
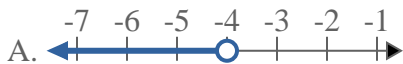


Solve each problem.

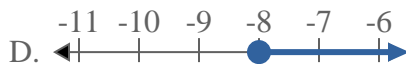
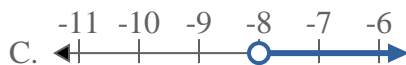
1) Which option best shows $X < -5$



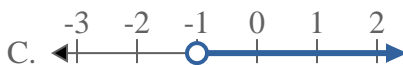
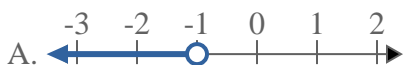
2) Which option best shows $X < -4$



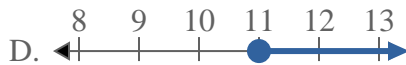
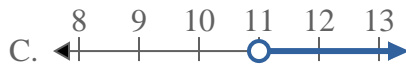
3) Which option best shows $X < -8$



4) Which option best shows $X < -1$



5) Which option best shows $X \geq 11$



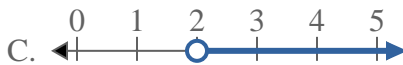
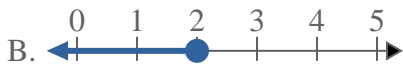
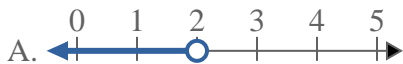
6) Which option best shows $X \geq 5$



7) Which option best shows $X \geq 13$



8) Which option best shows $X < 2$



Answers

1. _____

2. _____

3. _____

4. _____

5. _____

6. _____

7. _____

8. _____

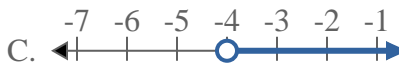


Solve each problem.

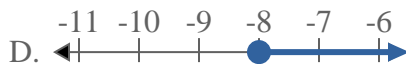
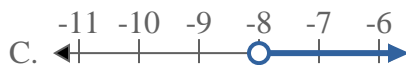
1) Which option best shows $X < -5$



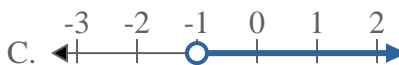
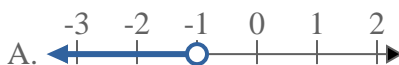
2) Which option best shows $X < -4$



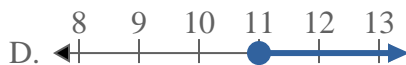
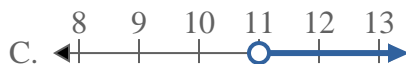
3) Which option best shows $X < -8$



4) Which option best shows $X < -1$



5) Which option best shows $X \geq 11$



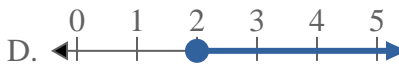
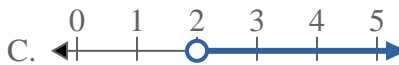
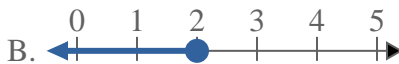
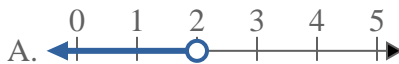
6) Which option best shows $X \geq 5$



7) Which option best shows $X \geq 13$



8) Which option best shows $X < 2$



Answers

1. **A**

2. **A**

3. **A**

4. **A**

5. **D**

6. **D**

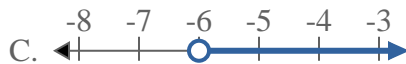
7. **D**

8. **A**

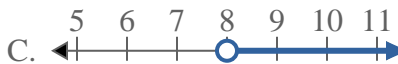


Solve each problem.

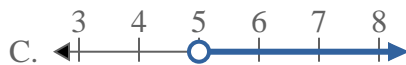
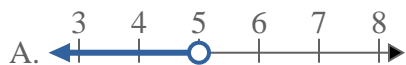
1) Which option best shows $X < -6$



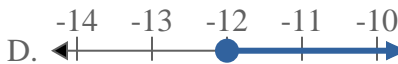
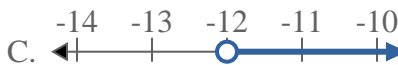
2) Which option best shows $X < 8$



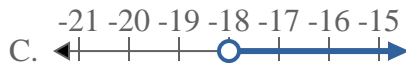
3) Which option best shows $X \leq 5$



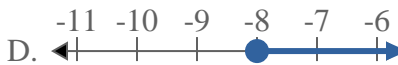
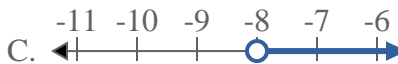
4) Which option best shows $X \geq -12$



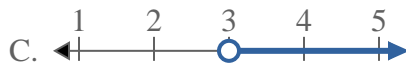
5) Which option best shows $X \geq -18$



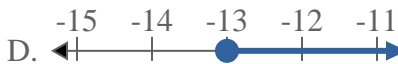
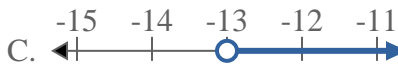
6) Which option best shows $X \geq -8$



7) Which option best shows $X < 3$



8) Which option best shows $X < -13$



Answers

1. _____

2. _____

3. _____

4. _____

5. _____

6. _____

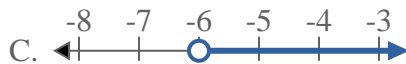
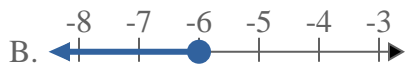
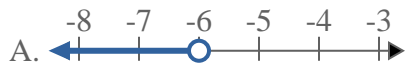
7. _____

8. _____

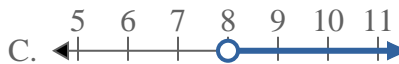


Solve each problem.

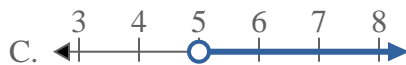
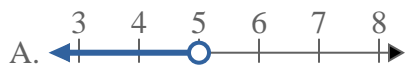
1) Which option best shows $X < -6$



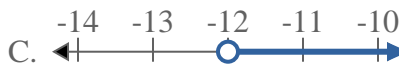
2) Which option best shows $X < 8$



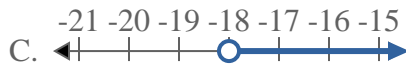
3) Which option best shows $X \leq 5$



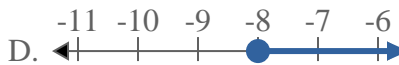
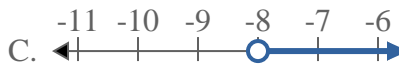
4) Which option best shows $X \geq -12$



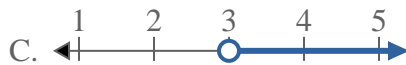
5) Which option best shows $X \geq -18$



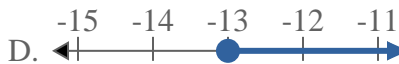
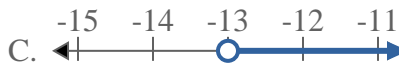
6) Which option best shows $X \geq -8$



7) Which option best shows $X < 3$



8) Which option best shows $X < -13$



Answers

1. **A**

2. **A**

3. **B**

4. **D**

5. **D**

6. **D**

7. **A**

8. **A**



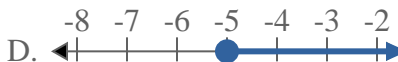
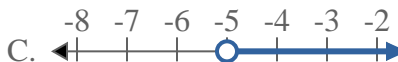
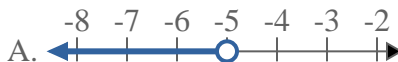
Solve each problem.

Answers

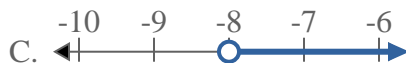
1) Which option best shows $X < 20$



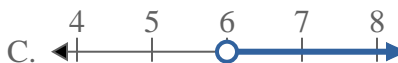
2) Which option best shows $X \geq -5$



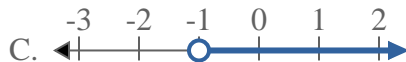
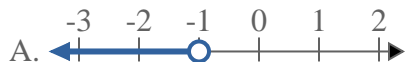
3) Which option best shows $X \leq -8$



4) Which option best shows $X \geq 6$



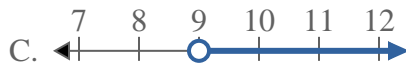
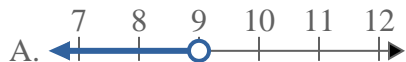
5) Which option best shows $X > -1$



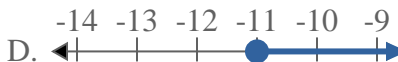
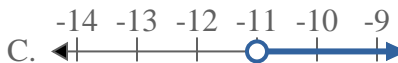
6) Which option best shows $X \leq 6$



7) Which option best shows $X < 9$



8) Which option best shows $X \leq -11$



1. _____
2. _____
3. _____
4. _____
5. _____
6. _____
7. _____
8. _____

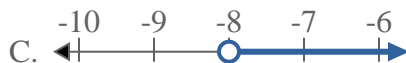


Solve each problem.

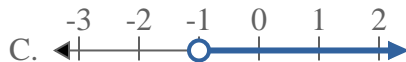
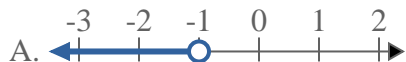
1) Which option best shows $X < 20$



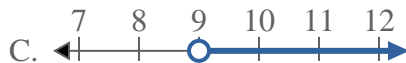
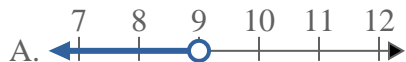
3) Which option best shows $X \leq -8$



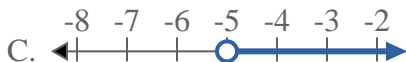
5) Which option best shows $X > -1$



7) Which option best shows $X < 9$



2) Which option best shows $X \geq -5$



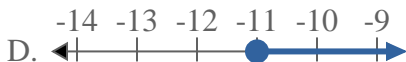
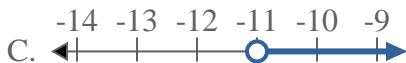
4) Which option best shows $X \geq 6$



6) Which option best shows $X \leq 6$



8) Which option best shows $X \leq -11$



Answers

1. **A**

2. **D**

3. **B**

4. **D**

5. **C**

6. **B**

7. **A**

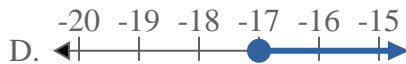
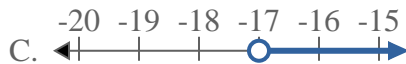
8. **B**



Solve each problem.

Answers


1) Which option best shows $X < -17$



2) Which option best shows $X \leq 20$



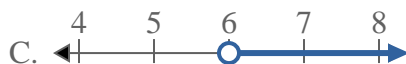
3) Which option best shows $X \geq 12$



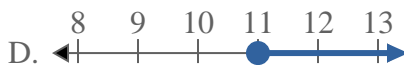
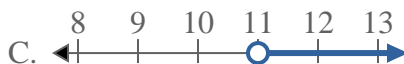
4) Which option best shows $X \geq -17$



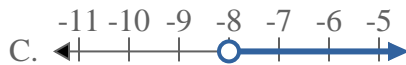
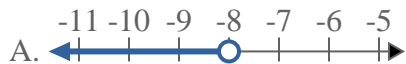
5) Which option best shows $X \geq 6$



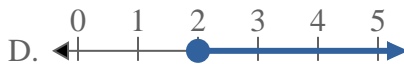
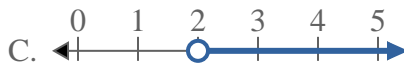
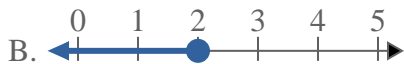
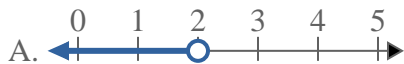
6) Which option best shows $X \leq 11$



7) Which option best shows $X \leq -8$



8) Which option best shows $X > 2$

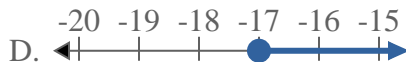
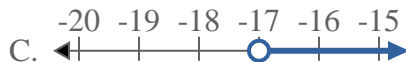


1. _____
2. _____
3. _____
4. _____
5. _____
6. _____
7. _____
8. _____




Solve each problem.

1) Which option best shows $X < -17$



2) Which option best shows $X \leq 20$



3) Which option best shows $X \geq 12$



4) Which option best shows $X \geq -17$



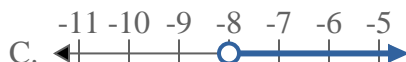
5) Which option best shows $X \geq 6$



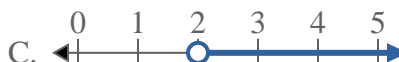
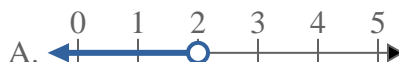
6) Which option best shows $X \leq 11$



7) Which option best shows $X \leq -8$



8) Which option best shows $X > 2$



Answers

1. **A**

2. **B**

3. **D**

4. **D**

5. **D**

6. **B**

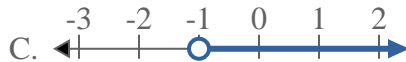
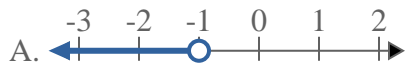
7. **B**

8. **C**



Solve each problem.

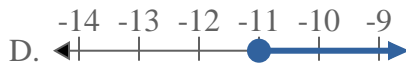
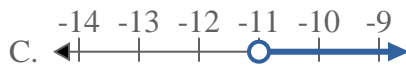
1) Which option best shows $X > -1$



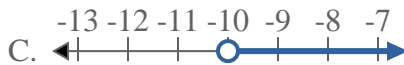
2) Which option best shows $X < -14$



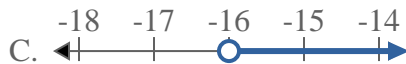
3) Which option best shows $X \leq -11$



4) Which option best shows $X < -10$



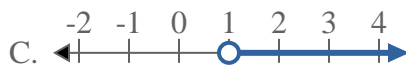
5) Which option best shows $X \leq -16$



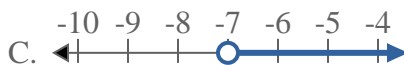
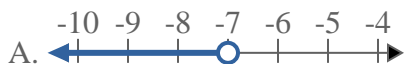
6) Which option best shows $X > 17$



7) Which option best shows $X > 1$



8) Which option best shows $X > -7$



Answers

1. _____

2. _____

3. _____

4. _____

5. _____

6. _____

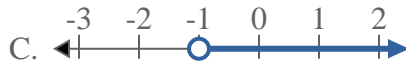
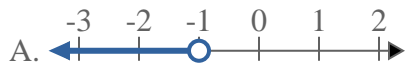
7. _____

8. _____



Solve each problem.

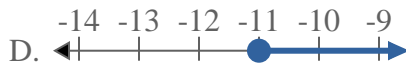
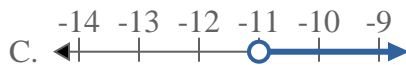
1) Which option best shows $X > -1$



2) Which option best shows $X < -14$



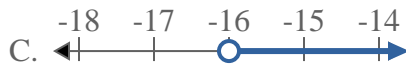
3) Which option best shows $X \leq -11$



4) Which option best shows $X < -10$



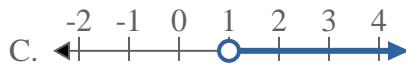
5) Which option best shows $X \leq -16$



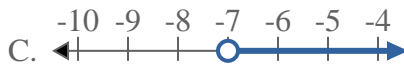
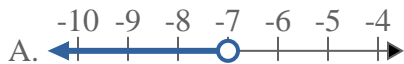
6) Which option best shows $X > 17$



7) Which option best shows $X > 1$



8) Which option best shows $X > -7$



Answers

1. **C**

2. **A**

3. **B**

4. **A**

5. **B**

6. **C**

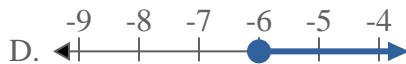
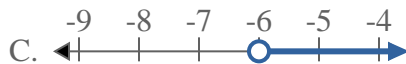
7. **C**

8. **C**

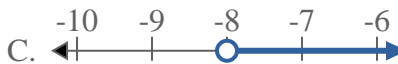


Solve each problem.

1) Which option best shows $X \leq -6$



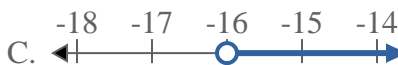
2) Which option best shows $X > -8$



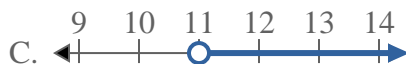
3) Which option best shows $X < 13$



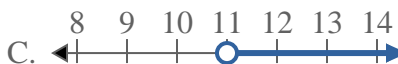
4) Which option best shows $X < -16$



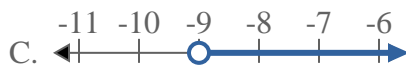
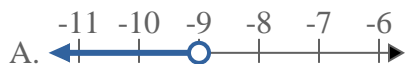
5) Which option best shows $X \leq 11$



6) Which option best shows $X \geq 11$



7) Which option best shows $X > -9$



8) Which option best shows $X \geq -5$



Answers

1. _____

2. _____

3. _____

4. _____

5. _____

6. _____

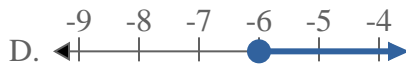
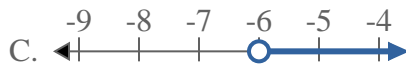
7. _____

8. _____

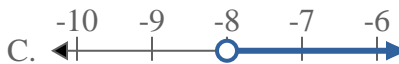


Solve each problem.

1) Which option best shows $X \leq -6$



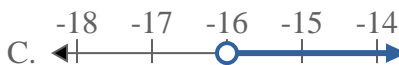
2) Which option best shows $X > -8$



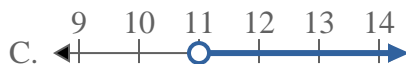
3) Which option best shows $X < 13$



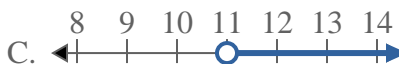
4) Which option best shows $X < -16$



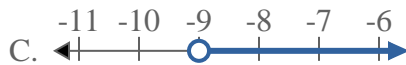
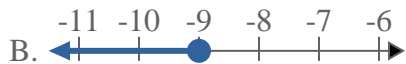
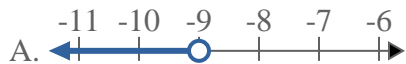
5) Which option best shows $X \leq 11$



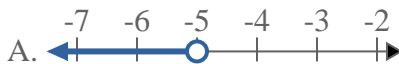
6) Which option best shows $X \geq 11$



7) Which option best shows $X > -9$



8) Which option best shows $X \geq -5$



Answers

1. **B**

2. **C**

3. **A**

4. **A**

5. **B**

6. **D**

7. **C**

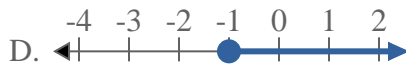
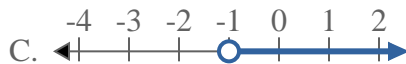
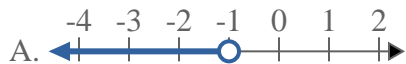
8. **D**



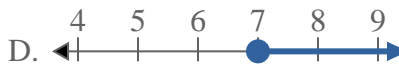
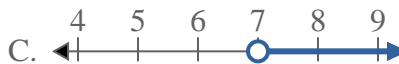
Solve each problem.

Answers


1) Which option best shows $X \geq -1$



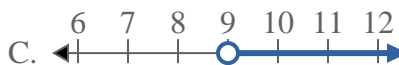
2) Which option best shows $X \leq 7$



3) Which option best shows $X > 14$



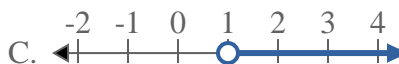
4) Which option best shows $X > 9$



5) Which option best shows $X < -14$



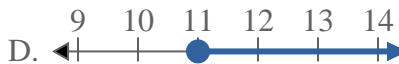
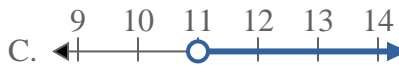
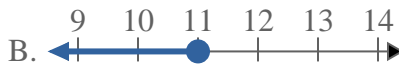
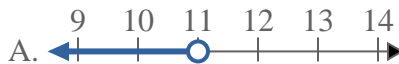
6) Which option best shows $X \geq 1$



7) Which option best shows $X \leq 16$



8) Which option best shows $X \leq 11$

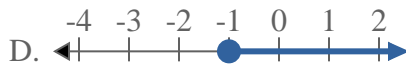
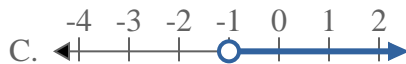
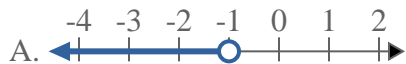


1. _____
2. _____
3. _____
4. _____
5. _____
6. _____
7. _____
8. _____

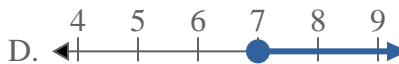


Solve each problem.

1) Which option best shows $X \geq -1$



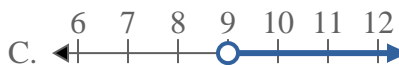
2) Which option best shows $X \leq 7$



3) Which option best shows $X > 14$



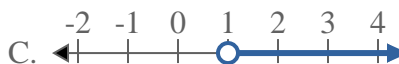
4) Which option best shows $X > 9$



5) Which option best shows $X < -14$



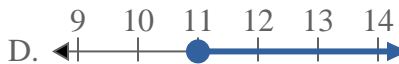
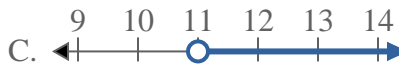
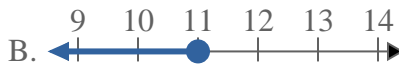
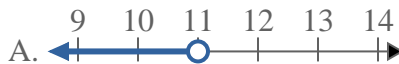
6) Which option best shows $X \geq 1$



7) Which option best shows $X \leq 16$



8) Which option best shows $X \leq 11$



Answers

1. **D**

2. **B**

3. **C**

4. **C**

5. **A**

6. **D**

7. **B**

8. **B**




Solve each problem.

1) Which option best shows $X > -5$



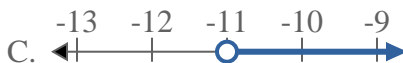
2) Which option best shows $X \geq 12$



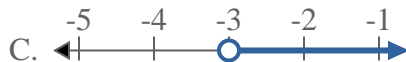
3) Which option best shows $X \leq 20$



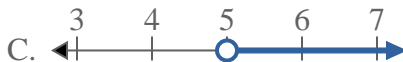
4) Which option best shows $X \geq -11$



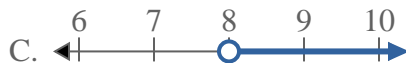
5) Which option best shows $X > -3$



6) Which option best shows $X > 5$



7) Which option best shows $X \leq 8$



8) Which option best shows $X \leq -13$



Answers

1. _____
2. _____
3. _____
4. _____
5. _____
6. _____
7. _____
8. _____



Solve each problem.

1) Which option best shows $X > -5$



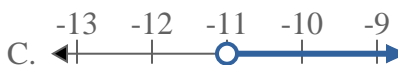
2) Which option best shows $X \geq 12$



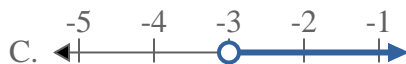
3) Which option best shows $X \leq 20$



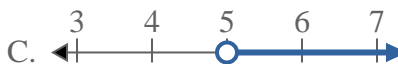
4) Which option best shows $X \geq -11$



5) Which option best shows $X > -3$



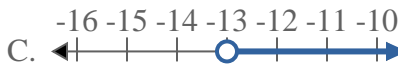
6) Which option best shows $X > 5$



7) Which option best shows $X \leq 8$



8) Which option best shows $X \leq -13$



Answers

1. **C**

2. **D**

3. **B**

4. **D**

5. **C**

6. **C**

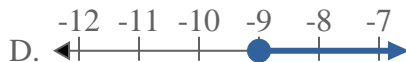
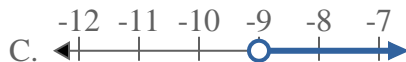
7. **B**

8. **B**

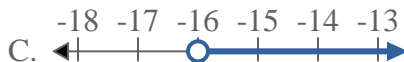
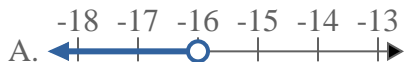


Solve each problem.

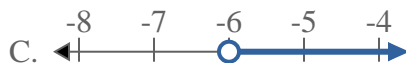
1) Which option best shows $X < -9$



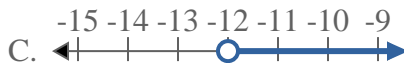
2) Which option best shows $X \leq -16$



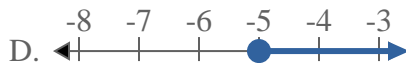
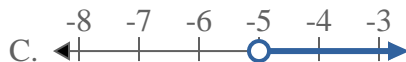
3) Which option best shows $X \geq -6$



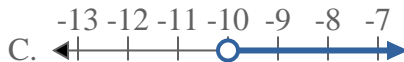
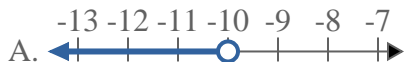
4) Which option best shows $X > -12$



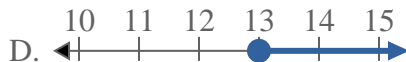
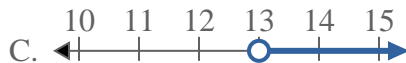
5) Which option best shows $X \leq -5$



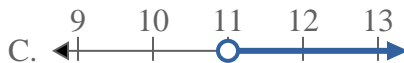
6) Which option best shows $X < -10$



7) Which option best shows $X > 13$



8) Which option best shows $X < 11$



Answers

1. _____

2. _____

3. _____

4. _____

5. _____

6. _____

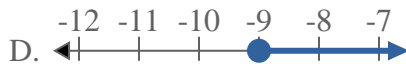
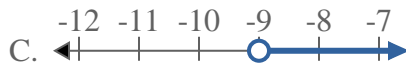
7. _____

8. _____

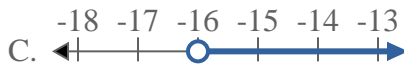
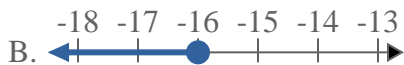
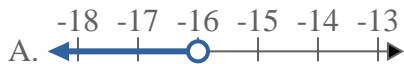


Solve each problem.

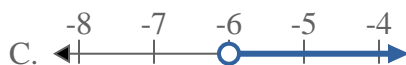
1) Which option best shows $X < -9$



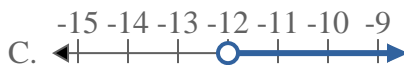
2) Which option best shows $X \leq -16$



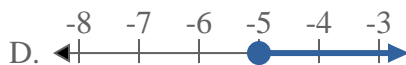
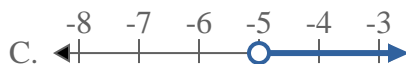
3) Which option best shows $X \geq -6$



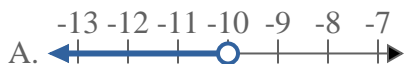
4) Which option best shows $X > -12$



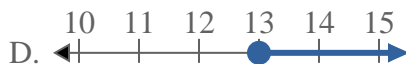
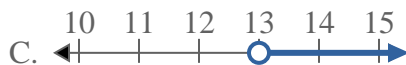
5) Which option best shows $X \leq -5$



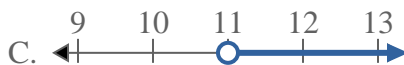
6) Which option best shows $X < -10$



7) Which option best shows $X > 13$



8) Which option best shows $X < 11$



Answers

1. **A**

2. **B**

3. **D**

4. **C**

5. **B**

6. **A**

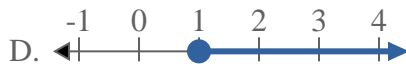
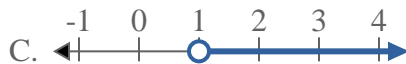
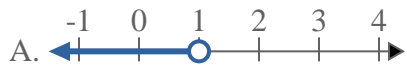
7. **C**

8. **A**

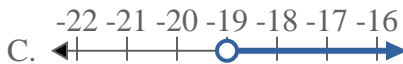
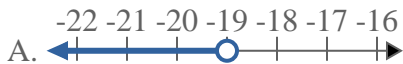


Solve each problem.

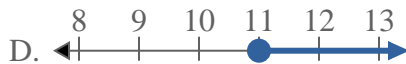
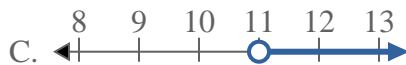
1) Which option best shows $X \leq 1$



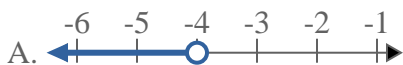
2) Which option best shows $X < -19$



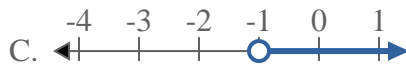
3) Which option best shows $X \geq 11$



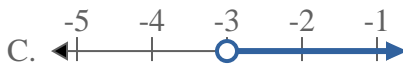
4) Which option best shows $X \geq -4$



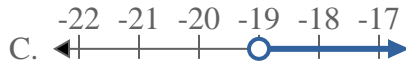
5) Which option best shows $X \geq -1$




6) Which option best shows $X \leq -3$



7) Which option best shows $X > -19$



8) Which option best shows $X > 6$



Answers

1. _____

2. _____

3. _____

4. _____

5. _____

6. _____

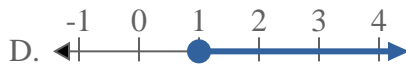
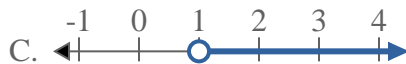
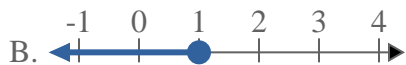
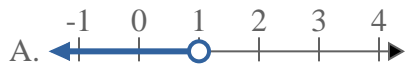
7. _____

8. _____

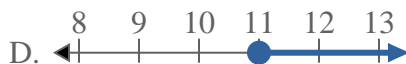
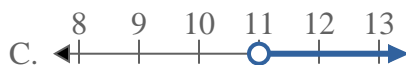


Solve each problem.

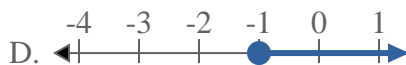
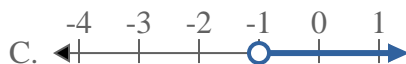
1) Which option best shows $X \leq 1$



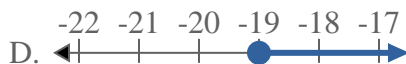
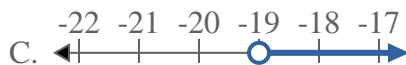
3) Which option best shows $X \geq 11$



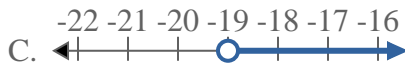
5) Which option best shows $X \geq -1$



7) Which option best shows $X > -19$



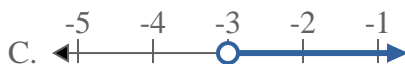
2) Which option best shows $X < -19$



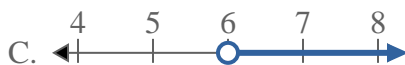
4) Which option best shows $X \geq -4$



6) Which option best shows $X \leq -3$



8) Which option best shows $X > 6$



Answers

1. **B**

2. **A**

3. **D**

4. **D**

5. **D**

6. **B**

7. **C**

8. **C**