



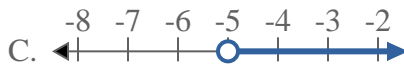
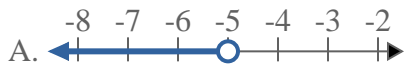
Solve each problem.

Answers

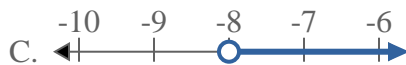
1) Which option best shows $X < 20$



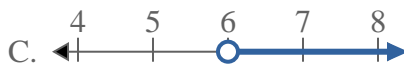
2) Which option best shows $X \geq -5$



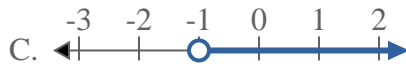
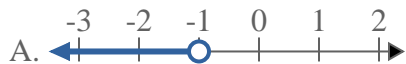
3) Which option best shows $X \leq -8$



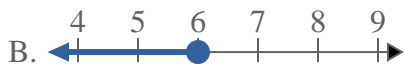
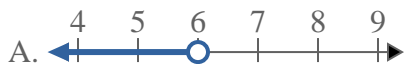
4) Which option best shows $X \geq 6$



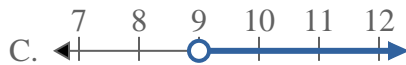
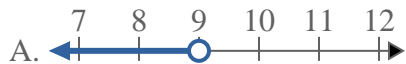
5) Which option best shows $X > -1$



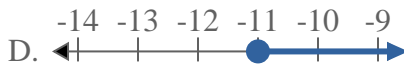
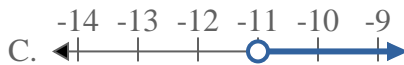
6) Which option best shows $X \leq 6$



7) Which option best shows $X < 9$



8) Which option best shows $X \leq -11$



1. _____
2. _____
3. _____
4. _____
5. _____
6. _____
7. _____
8. _____

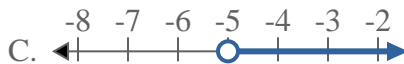
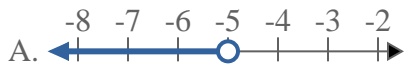


Solve each problem.

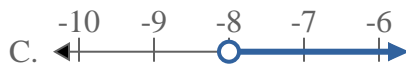
1) Which option best shows $X < 20$



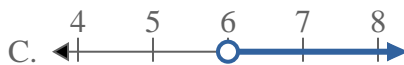
2) Which option best shows $X \geq -5$



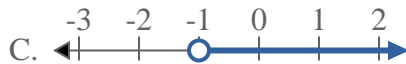
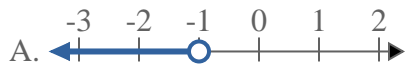
3) Which option best shows $X \leq -8$



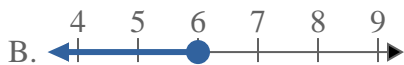
4) Which option best shows $X \geq 6$



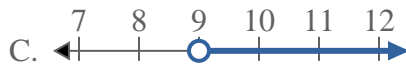
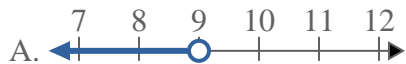
5) Which option best shows $X > -1$



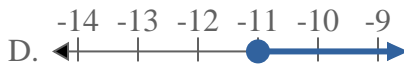
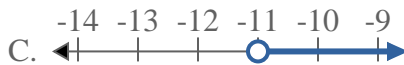
6) Which option best shows $X \leq 6$



7) Which option best shows $X < 9$



8) Which option best shows $X \leq -11$



Answers

1. **A**

2. **D**

3. **B**

4. **D**

5. **C**

6. **B**

7. **A**

8. **B**