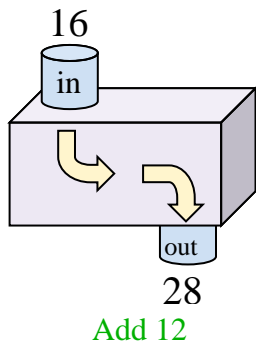
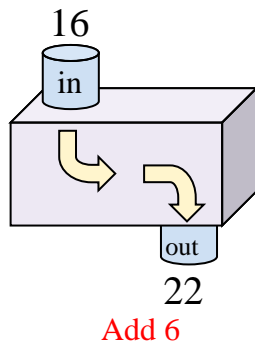


Determine the rule each function machine is using.

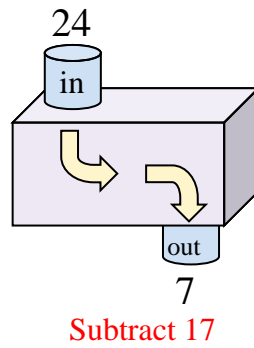
Ex)



1)



2)



Ex. **Add 12**

1. **Add 6**

2. **Subtract 17**

3. **Add 14**

4. **Subtract 17**

5. **Subtract 7**

6. **Add 13**

7. **Subtract 17**

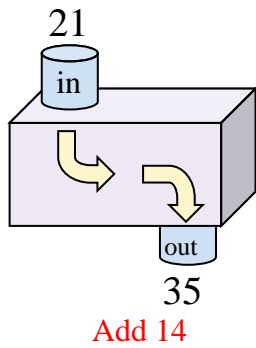
8. **Add 8**

9. **Add 15**

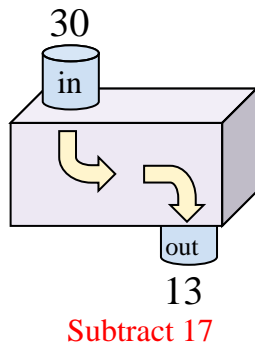
10. **Subtract 24**

11. **Subtract 18**

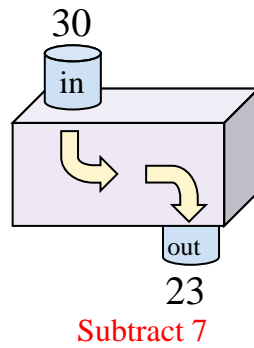
3)



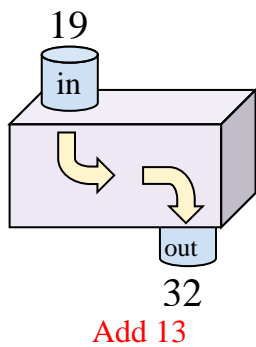
4)



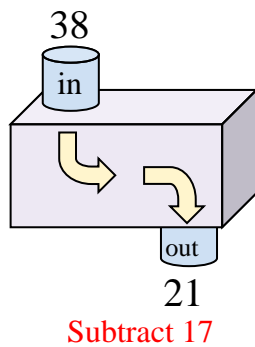
5)



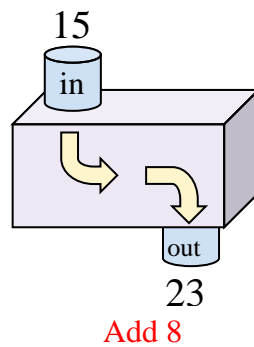
6)



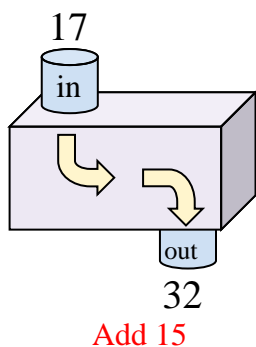
7)



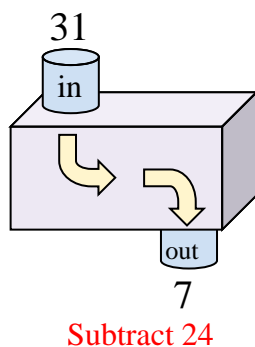
8)



9)



10)



11)

