



Use the numberlines to show each expression and solve.

Ex) Start at -6 and add 15



Ex.  $-6 + 15 = 9$

1) Start at -3 and add -3



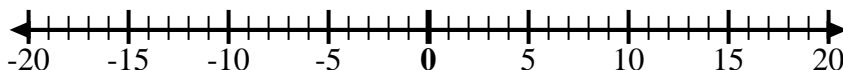
1. \_\_\_\_\_

2) Start at 10 and add 0



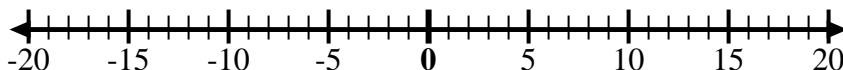
2. \_\_\_\_\_

3) Start at -1 and add 10



3. \_\_\_\_\_

4) Start at 2 and add -11



4. \_\_\_\_\_

5) Start at 3 and add -12



5. \_\_\_\_\_

6) Start at -8 and add 7



6. \_\_\_\_\_

7) Start at 0 and add -5



7. \_\_\_\_\_

8) Start at -6 and add -2



8. \_\_\_\_\_

9) Start at 9 and add -15



9. \_\_\_\_\_

10) Start at 4 and add -9



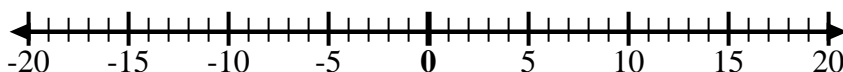
10. \_\_\_\_\_

11) Start at 1 and add -10



11. \_\_\_\_\_

12) Start at -5 and add -3



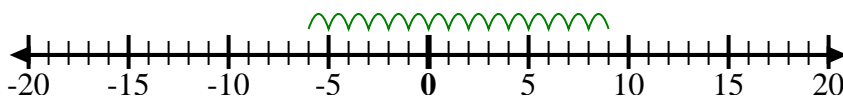
12. \_\_\_\_\_

**Answers**



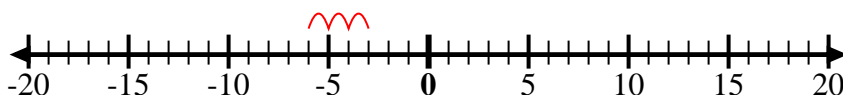
Use the numberlines to show each expression and solve.

Ex) Start at -6 and add 15



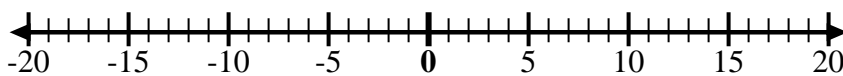
Ex.  $-6 + 15 = 9$

1) Start at -3 and add -3



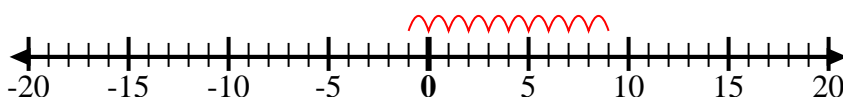
1.  $-3 + -3 = -6$

2) Start at 10 and add 0



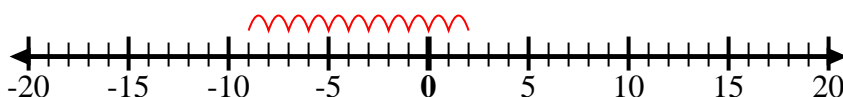
2.  $10 + 0 = 10$

3) Start at -1 and add 10



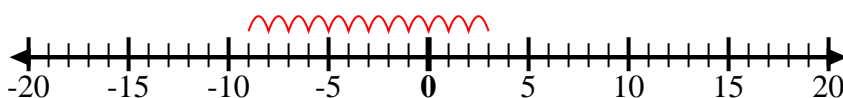
3.  $-1 + 10 = 9$

4) Start at 2 and add -11



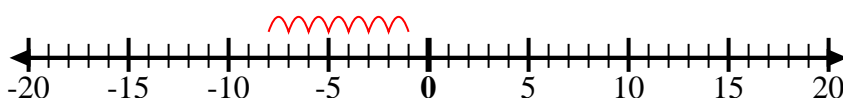
4.  $2 + -11 = -9$

5) Start at 3 and add -12



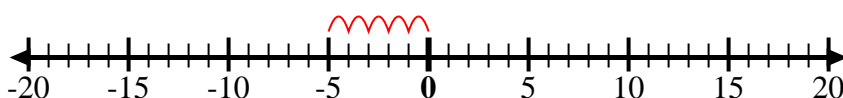
5.  $3 + -12 = -9$

6) Start at -8 and add 7



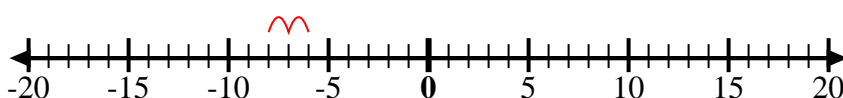
6.  $-8 + 7 = -1$

7) Start at 0 and add -5



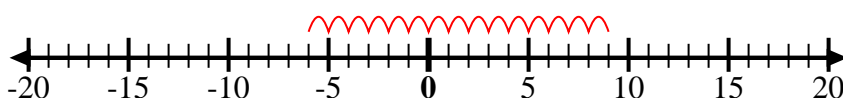
7.  $0 + -5 = -5$

8) Start at -6 and add -2



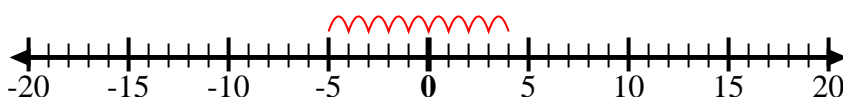
8.  $-6 + -2 = -8$

9) Start at 9 and add -15



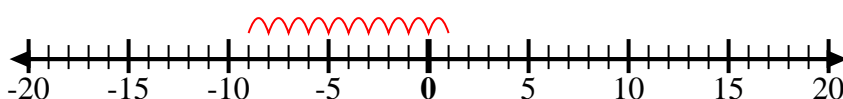
9.  $9 + -15 = -6$

10) Start at 4 and add -9



10.  $4 + -9 = -5$

11) Start at 1 and add -10



11.  $1 + -10 = -9$

12) Start at -5 and add -3



12.  $-5 + -3 = -8$

Answers