




Solve each problem.


Answers

1) Which letter best shows -21?




1. _____

2) Which letter best shows -120?




2. _____

3) Which letter best shows -40?



3. _____

4) Which letter best shows -87?




4. _____

5) Which letter best shows -27?




5. _____

6) Which letter best shows -51?




6. _____

7) Which letter best shows -79?




7. _____

8) Which letter best shows -22?




8. _____

9) Which letter best shows -10?



9. _____

10) Which letter best shows -108?




10. _____

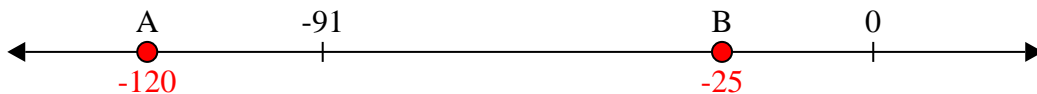


Solve each problem.

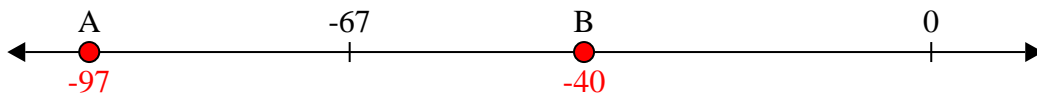
1) Which letter best shows -21?



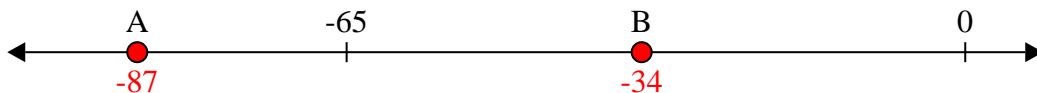
2) Which letter best shows -120?




3) Which letter best shows -40?



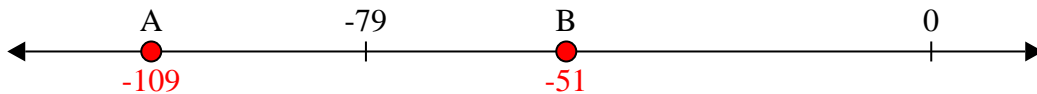
4) Which letter best shows -87?




5) Which letter best shows -27?




6) Which letter best shows -51?




7) Which letter best shows -79?



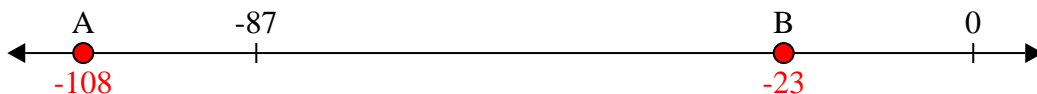
8) Which letter best shows -22?



9) Which letter best shows -10?



10) Which letter best shows -108?



Answers

1. **B**

2. **A**

3. **B**

4. **A**

5. **B**

6. **B**

7. **A**

8. **B**

9. **B**

10. **A**