



Solve each problem. Use the numberline if needed.

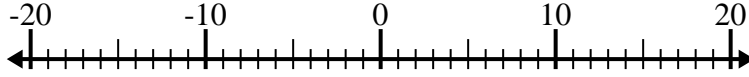
**Answers**

1)  $(-9) - 11 =$  \_\_\_\_\_



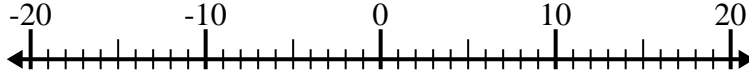
1. \_\_\_\_\_

2)  $(-14) - (-1) =$  \_\_\_\_\_



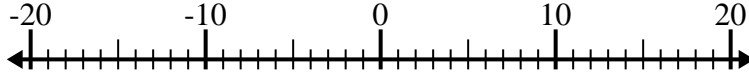
2. \_\_\_\_\_

3)  $7 + (-1) =$  \_\_\_\_\_



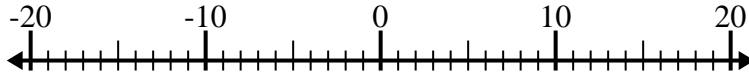
3. \_\_\_\_\_

4)  $(-13) + (-3) =$  \_\_\_\_\_



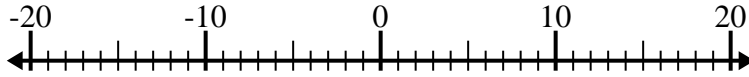
4. \_\_\_\_\_

5)  $11 + (-15) =$  \_\_\_\_\_



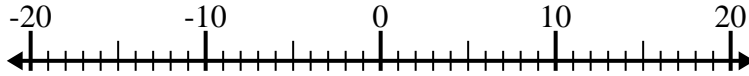
5. \_\_\_\_\_

6)  $10 - (-4) =$  \_\_\_\_\_



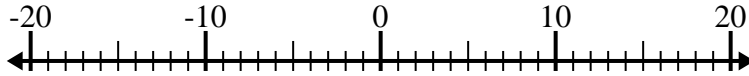
6. \_\_\_\_\_

7)  $(-4) - 9 =$  \_\_\_\_\_



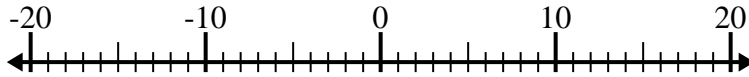
7. \_\_\_\_\_

8)  $3 - (-14) =$  \_\_\_\_\_



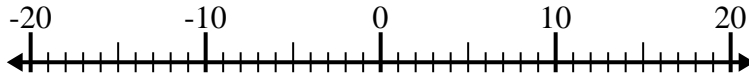
8. \_\_\_\_\_

9)  $(-3) + 6 =$  \_\_\_\_\_



9. \_\_\_\_\_

10)  $(-10) - (-7) =$  \_\_\_\_\_



10. \_\_\_\_\_



Solve each problem. Use the numberline if needed.

1)  $(-9) - 11 = \underline{-20}$



2)  $(-14) - (-1) = \underline{-13}$



3)  $7 + (-1) = \underline{6}$



4)  $(-13) + (-3) = \underline{-16}$



5)  $11 + (-15) = \underline{-4}$



6)  $10 - (-4) = \underline{14}$



7)  $(-4) - 9 = \underline{-13}$



8)  $3 - (-14) = \underline{17}$



9)  $(-3) + 6 = \underline{3}$



10)  $(-10) - (-7) = \underline{-3}$

**Answers**1. **-20**2. **-13**3. **6**4. **-16**5. **-4**6. **14**7. **-13**8. **17**9. **3**10. **-3**