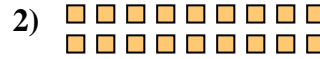





Write each array as a multiplication problem and solve.



Answers

Ex. 3 × 6 = 18

1. _____

2. _____

3. _____

4. _____

5. _____

6. _____





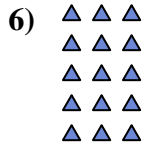
7. _____

8. _____

9. _____

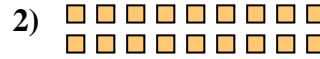

10. _____

11. _____





Write each array as a multiplication problem and solve.



Answers

Ex. 3 × 6 = 18

1. 10 × 4 = 40

2. 2 × 9 = 18

3. 5 × 9 = 45

4. 3 × 5 = 15

5. 9 × 10 = 90

6. 5 × 3 = 15

7. 6 × 5 = 30

8. 10 × 6 = 60

9. 9 × 8 = 72

10. 4 × 6 = 24

11. 5 × 8 = 40

