



Express each set as a multiplication problem.

Answers

Ex)

Ex. $10 \times 10 = 100$

1)

1. _____

2. _____

2)

3. _____

4. _____

3)

5. _____

6. _____

4)

7. _____

8. _____

5)


6)

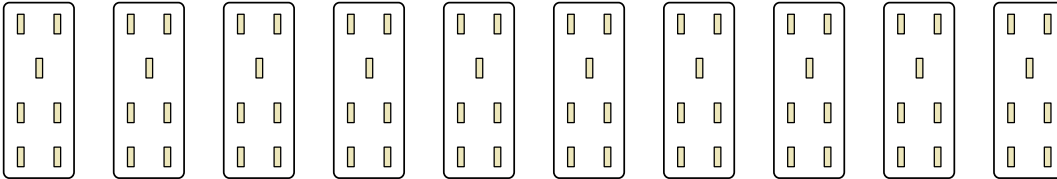
7)

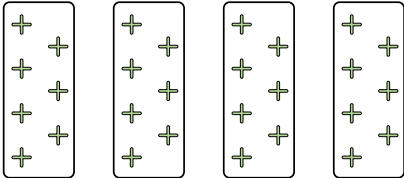
8)




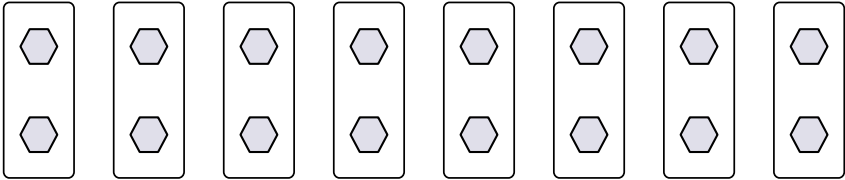
Express each set as a multiplication problem.

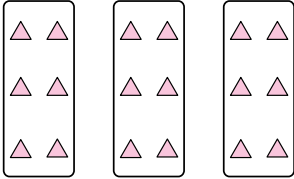
Ex) 

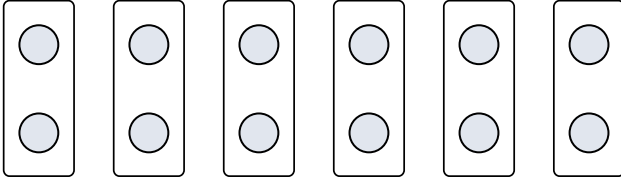
1) 

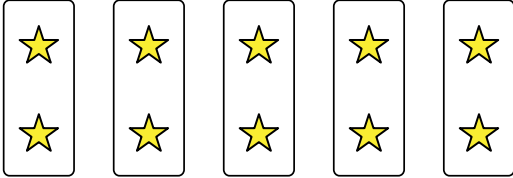
2) 


3) 

4) 

5) 

6) 

7) 

8) 

Answers

Ex. $10 \times 10 = 100$

1. $10 \times 7 = 70$

2. $4 \times 7 = 28$

3. $10 \times 6 = 60$

4. $8 \times 2 = 16$

5. $3 \times 6 = 18$

6. $6 \times 2 = 12$

7. $5 \times 2 = 10$

8. $5 \times 7 = 35$