





Use the array provided to solve each problem.


1) $24 \times 20 =$




2) $20 \times 21 =$




3) $20 \times 25 =$




4) $20 \times 26 =$



5) $23 \times 20 =$



6) $29 \times 20 =$



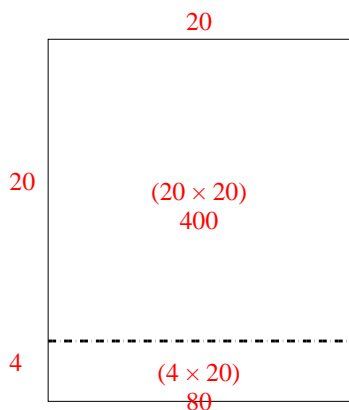
Answers

- 1. _____
- 2. _____
- 3. _____
- 4. _____
- 5. _____
- 6. _____

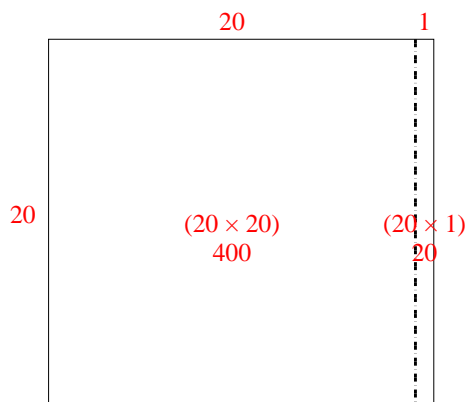


Use the array provided to solve each problem.

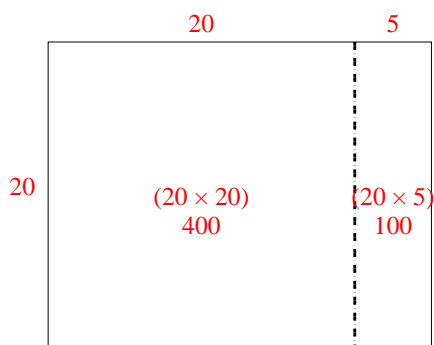
1) $24 \times 20 =$



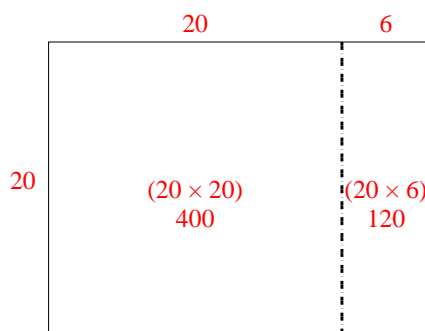
2) $20 \times 21 =$



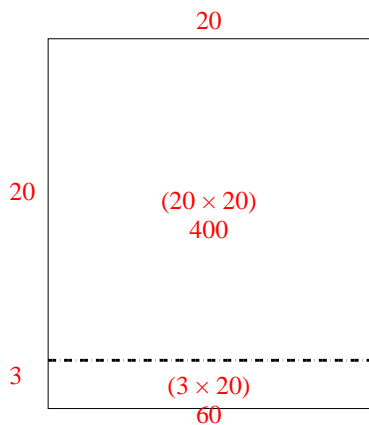
3) $20 \times 25 =$



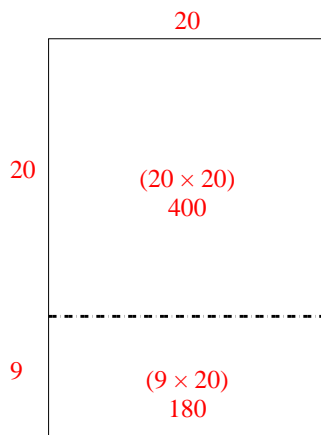
4) $20 \times 26 =$



5) $23 \times 20 =$



6) $29 \times 20 =$



Answers

1. **480**

2. **420**

3. **500**

4. **520**

5. **460**

6. **580**