





Use the array provided to solve each problem.


1) $10 \times 14 =$




2) $13 \times 10 =$



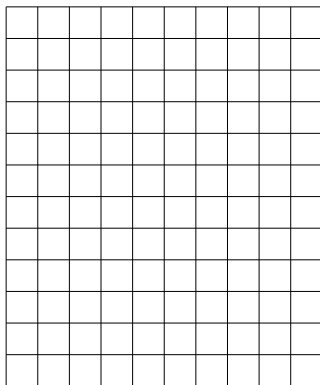
3) $15 \times 10 =$




4) $18 \times 10 =$



5) $12 \times 10 =$



6) $10 \times 15 =$



Answers

1. _____

2. _____

3. _____

4. _____

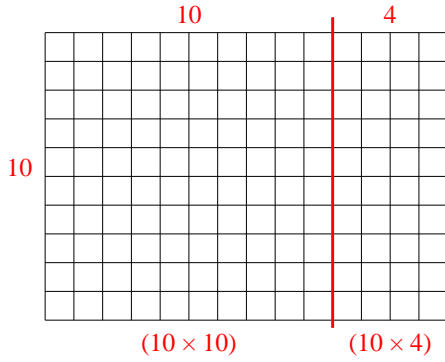
5. _____

6. _____

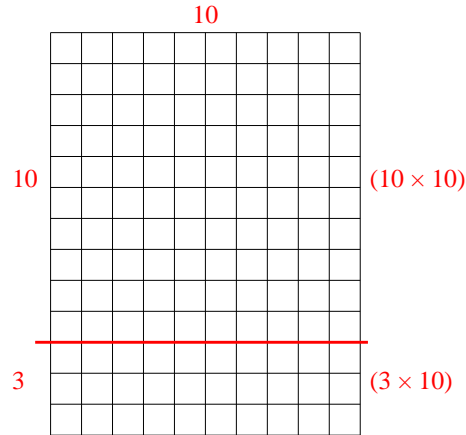


Use the array provided to solve each problem.

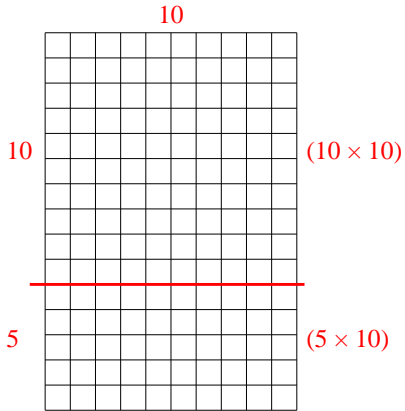
1) $10 \times 14 =$



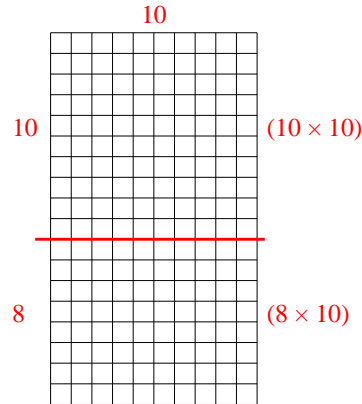
2) $13 \times 10 =$



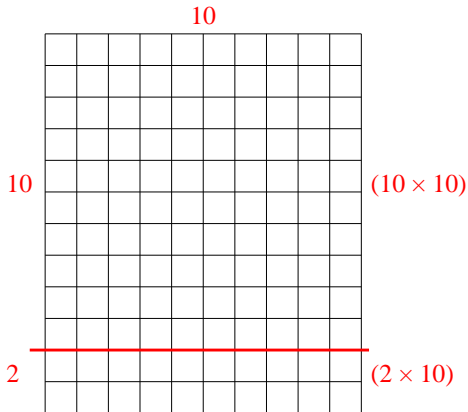
3) $15 \times 10 =$



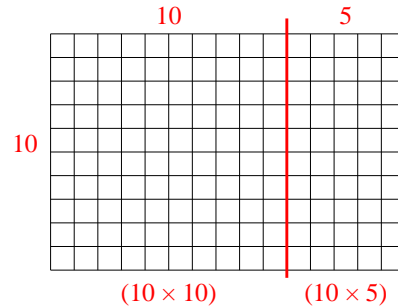
4) $18 \times 10 =$



5) $12 \times 10 =$



6) $10 \times 15 =$



Answers

1. 140

2. 130

3. 150

4. 180

5. 120

6. 150