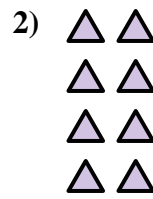
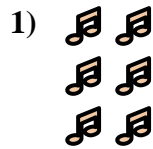
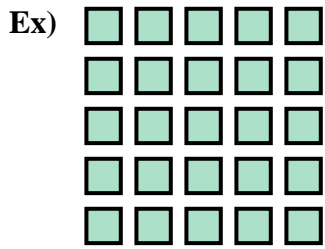




Write an equation to express the array and then find the number of shapes.

**Answers**



Ex.  $5 \times 5 = 25$

1. \_\_\_\_\_

2. \_\_\_\_\_

3. \_\_\_\_\_

4. \_\_\_\_\_

5. \_\_\_\_\_

6. \_\_\_\_\_

7. \_\_\_\_\_

8. \_\_\_\_\_

9. \_\_\_\_\_

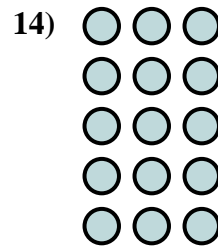
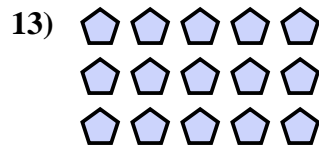
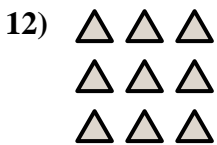
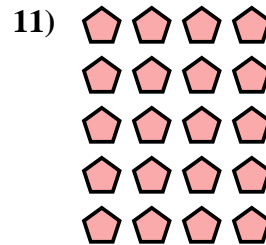



10. \_\_\_\_\_

11. \_\_\_\_\_

12. \_\_\_\_\_

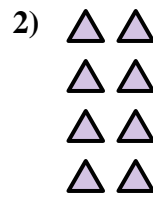
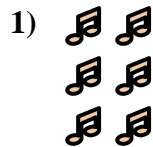
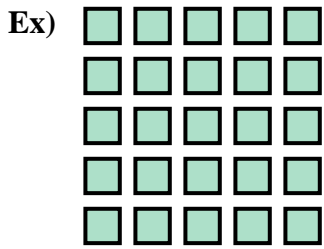
13. \_\_\_\_\_

14. \_\_\_\_\_





Write an equation to express the array and then find the number of shapes.



Answers

Ex.  $5 \times 5 = 25$

1.  $3 \times 2 = 6$

2.  $4 \times 2 = 8$

3.  $2 \times 3 = 6$

4.  $4 \times 5 = 20$

5.  $5 \times 2 = 10$

6.  $2 \times 2 = 4$

7.  $3 \times 4 = 12$

8.  $2 \times 5 = 10$

9.  $4 \times 3 = 12$

10.  $4 \times 4 = 16$

11.  $5 \times 4 = 20$

12.  $3 \times 3 = 9$

13.  $3 \times 5 = 15$

14.  $5 \times 3 = 15$

