

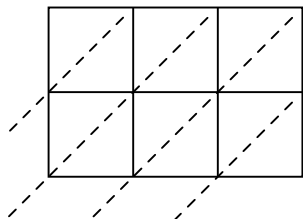


Use lattice multiplication to solve each problem.

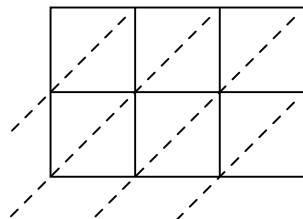
1) $927 \times 78 =$



2) $669 \times 51 =$



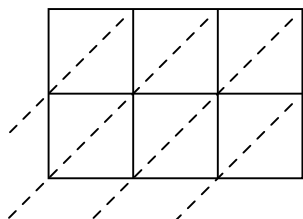
3) $864 \times 95 =$



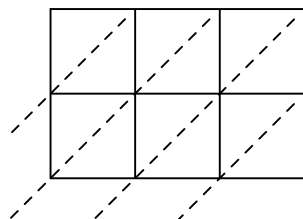
4) $709 \times 28 =$



5) $776 \times 14 =$



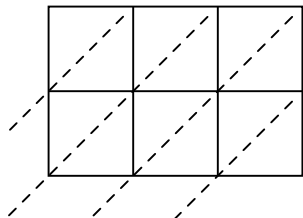
6) $743 \times 46 =$



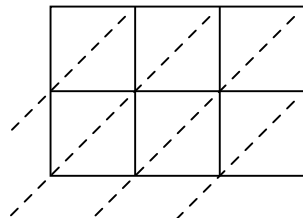
7) $139 \times 10 =$



8) $139 \times 15 =$



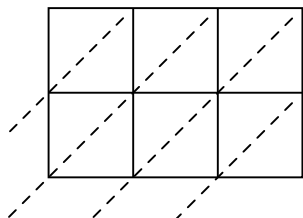
9) $652 \times 85 =$



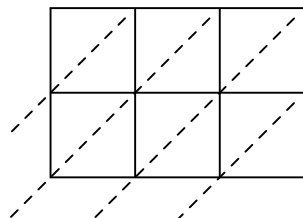
10) $692 \times 17 =$



11) $362 \times 41 =$



12) $355 \times 63 =$



Answers

1. _____

2. _____

3. _____

4. _____

5. _____

6. _____

7. _____

8. _____

9. _____

10. _____

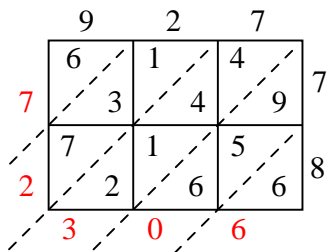
11. _____

12. _____

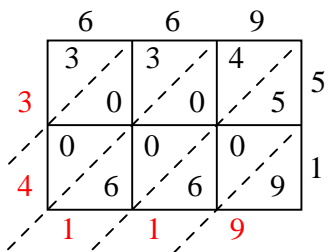


Use lattice multiplication to solve each problem.

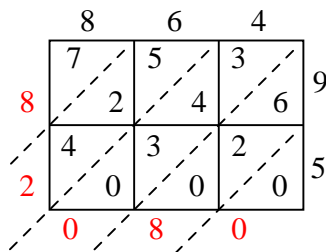
1) $927 \times 78 =$



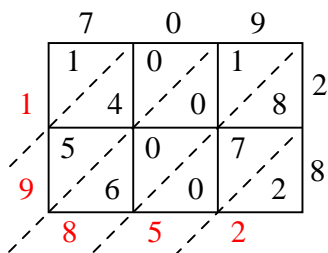
2) $669 \times 51 =$



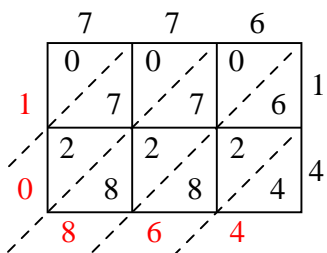
3) $864 \times 95 =$



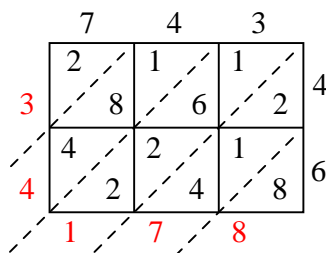
4) $709 \times 28 =$



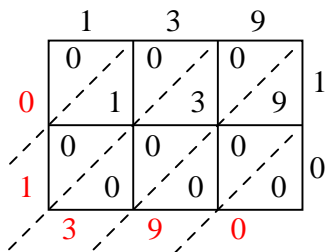
5) $776 \times 14 =$



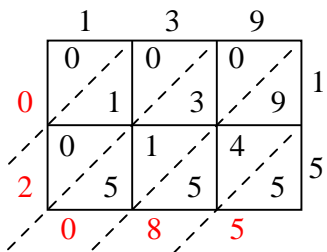
6) $743 \times 46 =$



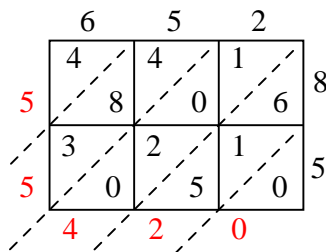
7) $139 \times 10 =$



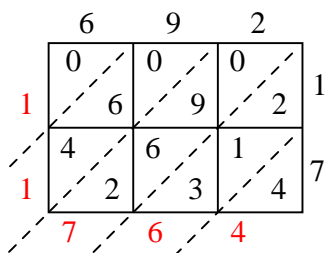
8) $139 \times 15 =$



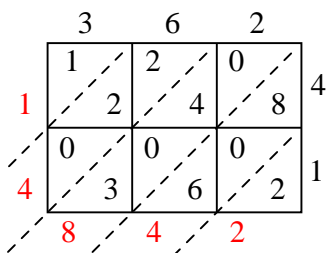
9) $652 \times 85 =$



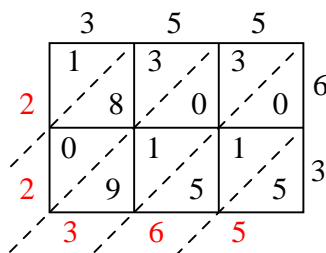
10) $692 \times 17 =$



11) $362 \times 41 =$



12) $355 \times 63 =$



Answers

1. 72,306
2. 34,119
3. 82,080
4. 19,852
5. 10,864
6. 34,178
7. 1,390
8. 2,085
9. 55,420
10. 11,764
11. 14,842
12. 22,365