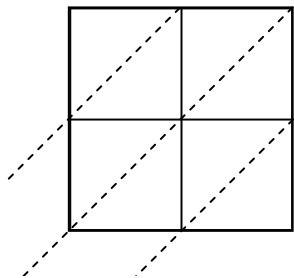


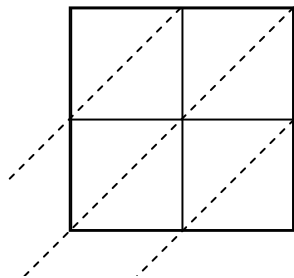


Use lattice multiplication to solve each problem.

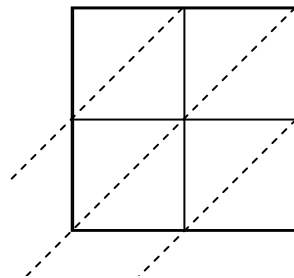
1) $86 \times 51 =$



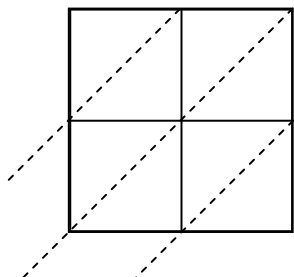
2) $27 \times 43 =$



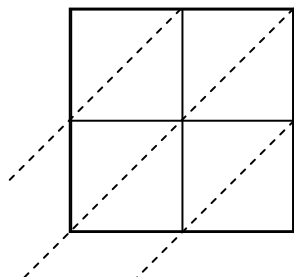
3) $64 \times 86 =$



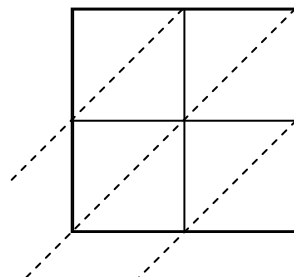
4) $96 \times 85 =$



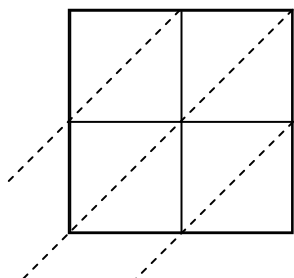
5) $94 \times 42 =$



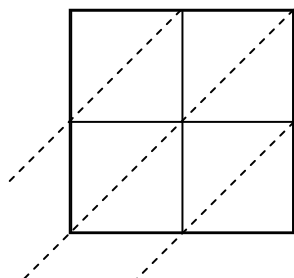
6) $89 \times 50 =$



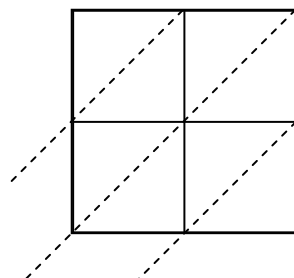
7) $87 \times 32 =$



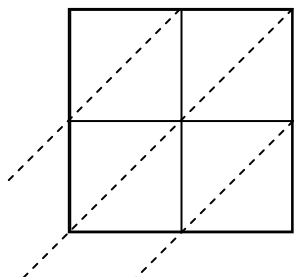
8) $21 \times 54 =$



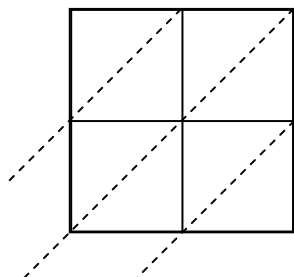
9) $15 \times 61 =$



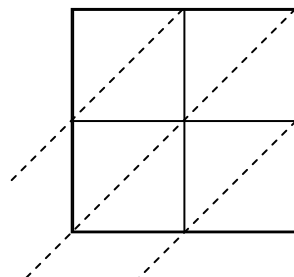
10) $17 \times 98 =$



11) $48 \times 20 =$



12) $92 \times 56 =$



Answers

1. _____

2. _____

3. _____

4. _____

5. _____

6. _____

7. _____

8. _____

9. _____

10. _____

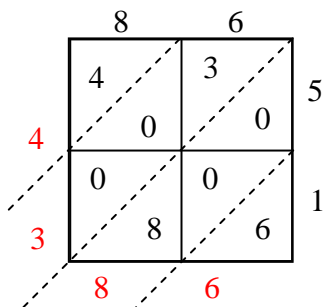
11. _____

12. _____

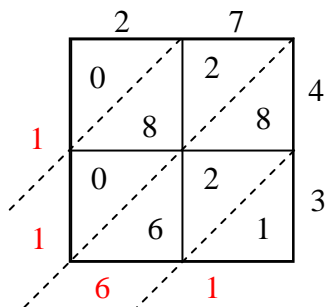


Use lattice multiplication to solve each problem.

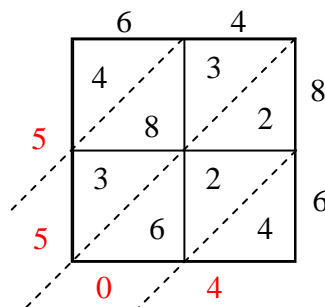
1) $86 \times 51 =$



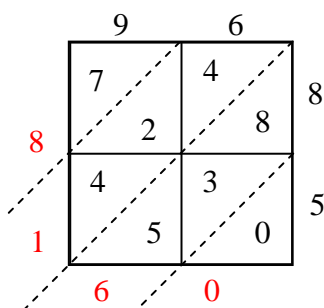
2) $27 \times 43 =$



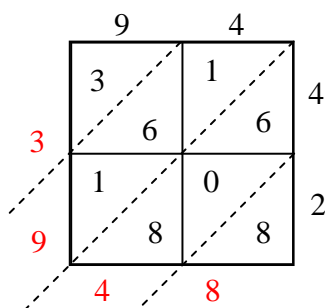
3) $64 \times 86 =$



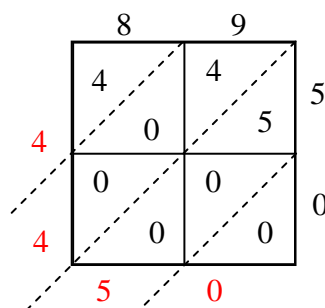
4) $96 \times 85 =$



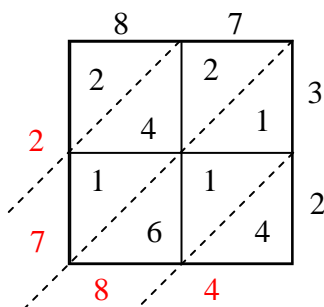
5) $94 \times 42 =$



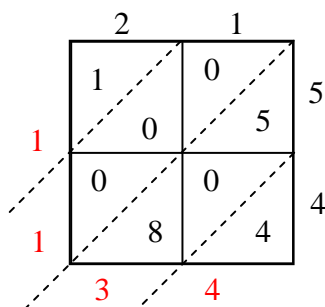
6) $89 \times 50 =$



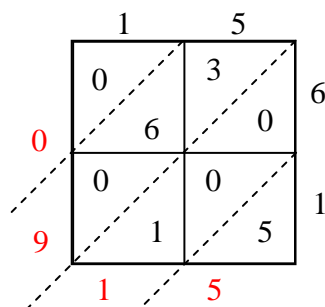
7) $87 \times 32 =$



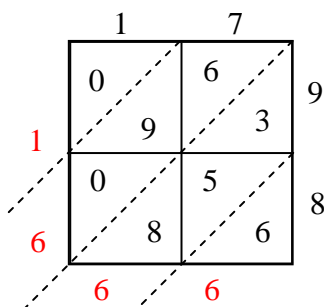
8) $21 \times 54 =$



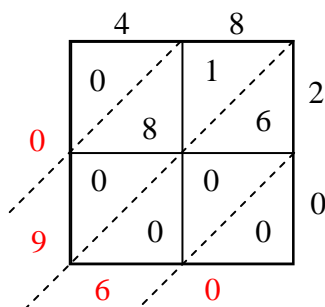
9) $15 \times 61 =$



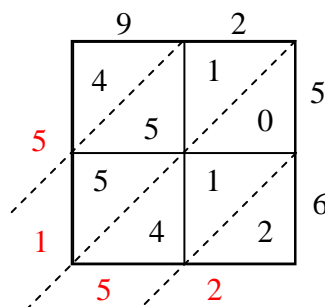
10) $17 \times 98 =$



11) $48 \times 20 =$



12) $92 \times 56 =$



Answers

1. **4,386**
2. **1,161**
3. **5,504**
4. **8,160**
5. **3,948**
6. **4,450**
7. **2,784**
8. **1,134**
9. **915**
10. **1,666**
11. **960**
12. **5,152**