
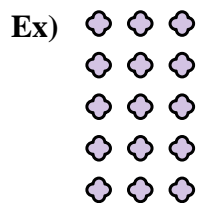




Write each array as an addition problem and solve.



Answers

Ex. 3+3+3+3+3=15

1. _____

2. _____

3. _____

4. _____

5. _____

6. _____

7. _____

8. _____

9. _____

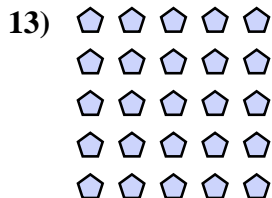

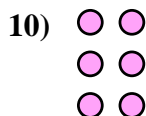
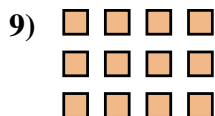

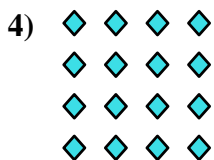

10. _____

11. _____

12. _____

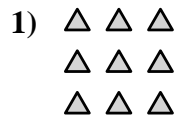
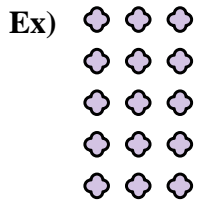
13. _____

14. _____





Write each array as an addition problem and solve.



Answers

Ex. 3+3+3+3+3=15

1. 3+3+3=9

2. 3+3=6

3. 2+2+2+2=8

4. 4+4+4+4=16

5. 5+5=10

6. 4+4=8

7. 3+3+3+3=12

8. 4+4+4+4+4=20

9. 4+4+4=12

10. 2+2+2=6

11. 5+5+5=15

12. 5+5+5+5=20

13. 5+5+5+5+5=25

14. 2+2=4

