




Write each array as an addition problem and solve.



Answers

Ex. 3+3=6

1. \_\_\_\_\_

2. \_\_\_\_\_

3. \_\_\_\_\_

4. \_\_\_\_\_

5. \_\_\_\_\_

6. \_\_\_\_\_

7. \_\_\_\_\_

8. \_\_\_\_\_

9. \_\_\_\_\_

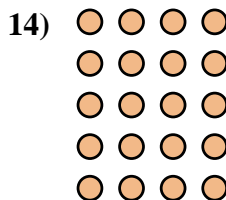
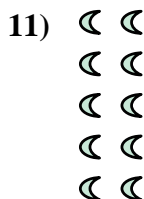


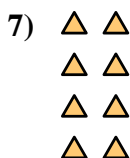
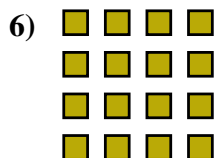
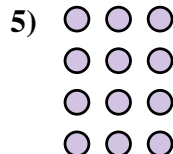

10. \_\_\_\_\_

11. \_\_\_\_\_

12. \_\_\_\_\_


13. \_\_\_\_\_

14. \_\_\_\_\_





Write each array as an addition problem and solve.



Answers

Ex. 3+3=6

1. 5+5+5=15

2. 3+3+3=9

3. 5+5=10

4. 2+2+2=6

5. 3+3+3+3=12

6. 4+4+4+4=16

7. 2+2+2+2=8

8. 4+4+4=12

9. 5+5+5+5+5=25

10. 5+5+5+5=20

11. 2+2+2+2+2=10

12. 4+4=8

13. 2+2=4

14. 4+4+4+4+4=20

