




Use the units provided to measure the width of each of the bars.



Answers

1. \_\_\_\_\_

2. \_\_\_\_\_

3. \_\_\_\_\_

4. \_\_\_\_\_

5. \_\_\_\_\_

6. \_\_\_\_\_

7. \_\_\_\_\_

8. \_\_\_\_\_

9. \_\_\_\_\_

10. \_\_\_\_\_



Use the units provided to measure the width of each of the bars.



Answers

1. 2

2. 1

3. 15

4. 4

5. 12

6. 9


7. 8

8. 6

9. 11

10. 14

Cut out and use the units shown to measure the bars on the previous page.






Use the units provided to measure the width of each of the bars.

Answers



1. \_\_\_\_\_



2. \_\_\_\_\_



3. \_\_\_\_\_



4. \_\_\_\_\_



5. \_\_\_\_\_




6. \_\_\_\_\_



7. \_\_\_\_\_



8. \_\_\_\_\_



9. \_\_\_\_\_



10. \_\_\_\_\_



Use the units provided to measure the width of each of the bars.



Answers

1. 10

2. 1

3. 9

4. 2

5. 4

6. 3


7. 12

8. 7

9. 11

10. 6

Cut out and use the units shown to measure the bars on the previous page.





Use the units provided to measure the width of each of the bars.



Answers

1. \_\_\_\_\_

2. \_\_\_\_\_

3. \_\_\_\_\_

4. \_\_\_\_\_

5. \_\_\_\_\_

6. \_\_\_\_\_

7. \_\_\_\_\_


8. \_\_\_\_\_

9. \_\_\_\_\_

10. \_\_\_\_\_



Use the units provided to measure the width of each of the bars.



Answers

1. 9

2. 13

3. 2

4. 4

5. 1

6. 8

7. 3


8. 5

9. 14

10. 12





Cut out and use the units shown to measure the bars on the previous page.





Use the units provided to measure the width of each of the bars.



Answers

1. \_\_\_\_\_

2. \_\_\_\_\_

3. \_\_\_\_\_

4. \_\_\_\_\_

5. \_\_\_\_\_

6. \_\_\_\_\_

7. \_\_\_\_\_

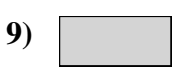
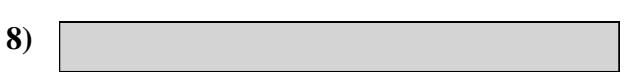


8. \_\_\_\_\_

9. \_\_\_\_\_

10. \_\_\_\_\_



Use the units provided to measure the width of each of the bars.



Answers

1. 8

2. 2

3. 3

4. 10

5. 7

6. 9


7. 4

8. 5

9. 1

10. 6

Cut out and use the units shown to measure the bars on the previous page.






Use the units provided to measure the width of each of the bars.

Answers



1. \_\_\_\_\_



2. \_\_\_\_\_



3. \_\_\_\_\_




4. \_\_\_\_\_



5. \_\_\_\_\_



6. \_\_\_\_\_



7. \_\_\_\_\_



8. \_\_\_\_\_








9. \_\_\_\_\_



10. \_\_\_\_\_



Use the units provided to measure the width of each of the bars.



Answers

1. 10

2. 1

3. 4

4. 3

5. 6

6. 8


7. 9

8. 11

9. 5


10. 13

Cut out and use the units shown to measure the bars on the previous page.





Use the units provided to measure the width of each of the bars.



Answers

1. \_\_\_\_\_

2. \_\_\_\_\_

3. \_\_\_\_\_

4. \_\_\_\_\_

5. \_\_\_\_\_

6. \_\_\_\_\_

7. \_\_\_\_\_

8. \_\_\_\_\_

9. \_\_\_\_\_

10. \_\_\_\_\_





Use the units provided to measure the width of each of the bars.



Answers

1. 1

2. 7

3. 11

4. 8

5. 2

6. 14


7. 12

8. 6

9. 10



10. 5

Cut out and use the units shown to measure the bars on the previous page.





Use the units provided to measure the width of each of the bars.



Answers

1. \_\_\_\_\_

2. \_\_\_\_\_

3. \_\_\_\_\_

4. \_\_\_\_\_

5. \_\_\_\_\_

6. \_\_\_\_\_

7. \_\_\_\_\_


8. \_\_\_\_\_

9. \_\_\_\_\_

10. \_\_\_\_\_



Use the units provided to measure the width of each of the bars.



Answers

1. 5

2. 10

3. 13

4. 1

5. 11

6. 15


7. 8

8. 14

9. 6

10. 9

Cut out and use the units shown to measure the bars on the previous page.





Use the units provided to measure the width of each of the bars.



Answers

1. \_\_\_\_\_

2. \_\_\_\_\_

3. \_\_\_\_\_

4. \_\_\_\_\_

5. \_\_\_\_\_

6. \_\_\_\_\_

7. \_\_\_\_\_

8. \_\_\_\_\_

9. \_\_\_\_\_

10. \_\_\_\_\_



Use the units provided to measure the width of each of the bars.



Answers

1. 5

2. 6

3. 4

4. 3

5. 10

6. 2


7. 1

8. 8

9. 7

10. 9

Cut out and use the units shown to measure the bars on the previous page.







Use the units provided to measure the width of each of the bars.

Answers




1. \_\_\_\_\_



2. \_\_\_\_\_



3. \_\_\_\_\_



4. \_\_\_\_\_



5. \_\_\_\_\_



6. \_\_\_\_\_



7. \_\_\_\_\_



8. \_\_\_\_\_



9. \_\_\_\_\_



10. \_\_\_\_\_



Use the units provided to measure the width of each of the bars.



Answers

1. 7

2. 3

3. 9

4. 1

5. 8

6. 10

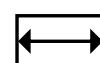
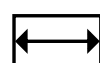
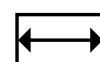
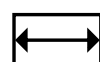
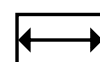
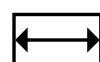
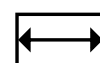
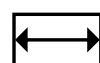
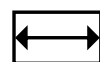
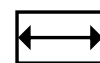
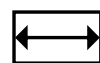
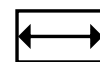
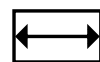
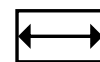
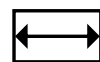
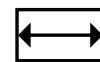
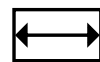
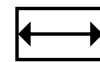
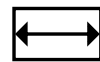
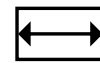
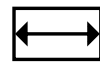
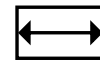
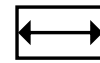
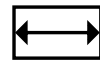
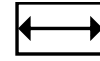
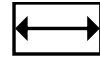
7. 4

8. 2

9. 11

10. 5

Cut out and use the units shown to measure the bars on the previous page.





Use the units provided to measure the width of each of the bars.




Answers

- 1. \_\_\_\_\_
- 2. \_\_\_\_\_
- 3. \_\_\_\_\_
- 4. \_\_\_\_\_
- 5. \_\_\_\_\_
- 6. \_\_\_\_\_
- 7. \_\_\_\_\_
- 8. \_\_\_\_\_
- 9. \_\_\_\_\_
- 10. \_\_\_\_\_



Use the units provided to measure the width of each of the bars.



Answers

1. 10

2. 1

3. 8

4. 7

5. 4

6. 3

7. 2

8. 9

9. 11

10. 6

Cut out and use the units shown to measure the bars on the previous page.

