




Use the units provided to measure the width of each of the bars.



Answers

1. _____

2. _____

3. _____

4. _____

5. _____

6. _____

7. _____

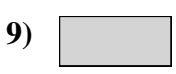

8. _____

9. _____

10. _____



Use the units provided to measure the width of each of the bars.



Answers

1. 8

2. 2

3. 3

4. 10

5. 7

6. 9

7. 4

8. 5

9. 1

10. 6