
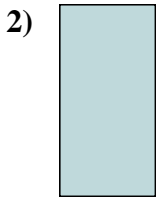





Measure the width and height of each block in inches and in centimeters.



Answers

Ex. 3 0 1/2 7.6 1.3

1. _____



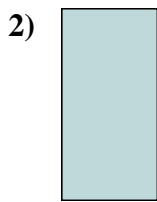
2. _____

3. _____

4. _____



Measure the width and height of each block in inches and in centimeters.



Answers

- Ex. 3 0 1/2 7.6 1.3
- 1. 1 1/2 1 3.8 2.5
- 2. 0 1/2 1 1.3 2.5
- 3. 5 1/2 1 14 2.5
- 4. 1 1 1/2 2.5 3.8