





Measure the width and height of each block in inches and in centimeters.

Ex)



1)




2)



3)



4)



**Answers**

Ex. 1 1 1/2 2.5 3.8

1. \_\_\_\_\_

2. \_\_\_\_\_


3. \_\_\_\_\_

4. \_\_\_\_\_



Measure the width and height of each block in inches and in centimeters.

Ex)



Answers

Ex. 1 1 1/2 2.5 3.8


1. 1 1/2 1 1/2 3.8 3.8

2. 5 1 12.7 2.5


3. 5 1/2 0 1/2 14 1.3

4. 0 1/2 1 1/2 1.3 3.8

1)



2)



3)



4)

