



Measure the width of each block in inches and in centimeters.



Answers

Ex. 2 1/2 6 - 7

1. _____

2. _____

3. _____

4. _____

5. _____

6. _____

7. _____

8. _____

9. _____



Measure the width of each block in inches and in centimeters.

Ex)



Answers

Ex. 2 1/2 6 - 7

1)



1. 4 1/2 11 - 12

2)



2. 3 7 - 8

3)



3. 5 12 - 13

4)



4. 2 5 - 6

5)




5. 3 1/2 8 - 9

6)



6. 5 1/2 13 - 14

7)



7. 0 1/2 1 - 2

8)



8. 1 2 - 3

9)




9. 4 10 - 11



Measure the width of each block in inches and in centimeters.

Ex)



Answers

Ex. 1 2-3

1)



1. _____

2. _____

2)



3. _____

4. _____


3)



5. _____

6. _____

4)



7. _____

8. _____

5)



9. _____

6)



7)



8)




9)





Measure the width of each block in inches and in centimeters.



Answers

Ex. 1 2 - 3

1. 1 1/2 3 - 4

2. 5 12 - 13

3. 5 1/2 13 - 14

4. 0 1/2 1 - 2

5. 3 7 - 8

6. 2 5 - 6

7. 4 10 - 11

8. 4 1/2 11 - 12

9. 3 1/2 8 - 9



Measure the width of each block in inches and in centimeters.

Ex)



Answers

Ex. 4 1/2 11 - 12

1)



1. _____

2. _____

2)



3. _____

4. _____


3)



5. _____

6. _____

4)



7. _____

8. _____

5)



9. _____


6)



7)



8)



9)





Measure the width of each block in inches and in centimeters.



Answers

Ex. 4 1/2 11 - 12

1. 5 1/2 13 - 14

2. 1 2 - 3

3. 1 1/2 3 - 4

4. 4 10 - 11

5. 2 5 - 6

6. 2 1/2 6 - 7

7. 3 7 - 8

8. 0 1/2 1 - 2

9. 5 12 - 13



Measure the width of each block in inches and in centimeters.

Ex)



Answers

Ex. 3 7-8

1)




1. _____

2)



2. _____

3)



3. _____

4)



4. _____

5)



5. _____

6)



6. _____

7)



7. _____

8)



8. _____

9)



9. _____



Measure the width of each block in inches and in centimeters.



Answers

Ex. 3 7 - 8

1. 5 12 - 13

2. 1 1/2 3 - 4

3. 0 1/2 1 - 2

4. 4 1/2 11 - 12

5. 3 1/2 8 - 9

6. 2 1/2 6 - 7

7. 5 1/2 13 - 14

8. 2 5 - 6

9. 4 10 - 11



Measure the width of each block in inches and in centimeters.



Answers

Ex. 3 7-8



1. _____



2. _____



3. _____



4. _____



5. _____



6. _____



7. _____



8. _____



9. _____



Measure the width of each block in inches and in centimeters.



Answers

Ex. 3 7 - 8

1. 1 1/2 3 - 4

2. 0 1/2 1 - 2

3. 5 1/2 13 - 14

4. 1 2 - 3

5. 4 1/2 11 - 12

6. 4 10 - 11

7. 5 12 - 13

8. 2 5 - 6

9. 2 1/2 6 - 7




Measure the width of each block in inches and in centimeters.



Ex. 5 1/2 13 - 14




1. _____



2. _____




3. _____



4. _____



5. _____



6. _____



7. _____



8. _____





9. _____


Answers





Measure the width of each block in inches and in centimeters.


Ex) 


1) 


2) 


3) 


4) 

5) 

6) 

7) 

8) 

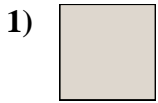
9) 

Answers

- Ex. 5 1/2 13 - 14
1. 3 1/2 8 - 9
2. 4 10 - 11
3. 5 12 - 13
4. 1 2 - 3
5. 3 7 - 8
6. 0 1/2 1 - 2
7. 1 1/2 3 - 4
8. 2 5 - 6
9. 4 1/2 11 - 12



Measure the width of each block in inches and in centimeters.



Answers

Ex. 4 10 - 11

1. _____

2. _____

3. _____

4. _____

5. _____

6. _____

7. _____

8. _____

9. _____



Measure the width of each block in inches and in centimeters.



Answers

Ex. 4 10 - 11

1. 0 1/2 1 - 2

2. 1 1/2 3 - 4

3. 5 1/2 13 - 14

4. 3 7 - 8

5. 2 1/2 6 - 7

6. 1 2 - 3


7. 2 5 - 6

8. 4 1/2 11 - 12

9. 3 1/2 8 - 9



Measure the width of each block in inches and in centimeters.



Answers

Ex. 3 1/2 8 - 9

1. _____

2. _____

3. _____

4. _____

5. _____

6. _____

7. _____

8. _____

9. _____



Measure the width of each block in inches and in centimeters.



Answers

Ex. 3 1/2 8 - 9

1. 1 2 - 3

2. 1 1/2 3 - 4

3. 5 1/2 13 - 14

4. 5 12 - 13

5. 2 5 - 6

6. 3 7 - 8

7. 4 1/2 11 - 12

8. 2 1/2 6 - 7

9. 0 1/2 1 - 2



Measure the width of each block in inches and in centimeters.

Ex)



Answers

Ex. 4 10 - 11

1)



1. _____

2)




2. _____

3)



3. _____

4)



4. _____

5)



5. _____

6)



6. _____

7)



7. _____

8)



8. _____


9)



9. _____



Measure the width of each block in inches and in centimeters.



Answers

Ex. 4 10 - 11

1. 2 5 - 6

2. 3 7 - 8

3. 3 1/2 8 - 9

4. 0 1/2 1 - 2

5. 1 1/2 3 - 4

6. 2 1/2 6 - 7



7. 5 12 - 13

8. 4 1/2 11 - 12

9. 5 1/2 13 - 14



Measure the width of each block in inches and in centimeters.



Answers

Ex. 1 2-3

1. _____

2. _____

3. _____

4. _____

5. _____

6. _____




7. _____

8. _____

9. _____



Measure the width of each block in inches and in centimeters.



Answers

Ex. 1 2 - 3

1. 3 1/2 8 - 9

2. 5 1/2 13 - 14

3. 5 12 - 13

4. 4 1/2 11 - 12

5. 1 1/2 3 - 4

6. 4 10 - 11

7. 2 5 - 6

8. 3 7 - 8

9. 0 1/2 1 - 2