




Measure the width of each block in inches and in centimeters.



Answers

Ex. 2 1/2 6 - 7

1. _____

2. _____

3. _____

4. _____

5. _____

6. _____

7. _____


8. _____

9. _____



Measure the width of each block in inches and in centimeters.

Ex)



1)



2)



3)



4)




5)



6)



7)



8)



9)



Answers

Ex. 2 1/2 6 - 7

1. 4 1/2 11 - 12

2. 3 7 - 8

3. 5 12 - 13

4. 2 5 - 6

5. 3 1/2 8 - 9

6. 5 1/2 13 - 14

7. 0 1/2 1 - 2

8. 1 2 - 3

9. 4 10 - 11