




Measure each of the bars (in centimeters) and then generate a line plot based on the information.

Answers


















- 1. _____
- 2. _____
- 3. _____
- 4. _____
- 5. _____
- 6. _____
- 7. _____
- 8. _____
- 9. _____
- 10. _____
- 11. _____
- 12. _____
- 13. _____
- 14. _____
- 15. _____

Line Plot



Measure each of the bars (in centimeters) and then generate a line plot based on the information.

- 1)  9
- 2)  9
- 3)  9
- 4)  7
- 5)  8
- 6)  9
- 7)  8
- 8)  9
- 9)  9
- 10)  10
- 11)  9
- 12)  9
- 13)  7
- 14)  9
- 15)  9

- Answers
- 1. 9
 - 2. 9
 - 3. 9
 - 4. 7
 - 5. 8
 - 6. 9
 - 7. 8
 - 8. 9
 - 9. 9
 - 10. 10
 - 11. 9
 - 12. 9
 - 13. 7
 - 14. 9
 - 15. 9

