



Measure each of the bars (in centimeters) and then generate a line plot based on the information.

Answers



1. \_\_\_\_\_



2. \_\_\_\_\_



3. \_\_\_\_\_




4. \_\_\_\_\_



5. \_\_\_\_\_



6. \_\_\_\_\_



7. \_\_\_\_\_



8. \_\_\_\_\_



9. \_\_\_\_\_



10. \_\_\_\_\_



11. \_\_\_\_\_



12. \_\_\_\_\_



13. \_\_\_\_\_



14. \_\_\_\_\_



15. \_\_\_\_\_

**Line Plot**



Measure each of the bars (in centimeters) and then generate a line plot based on the information.

Answers

1)  3


1. 3

2)  7

2. 7

3)  7

3. 7

4)  4

4. 4

5)  7

5. 7

6)  7

6. 7

7)  3

7. 3

8)  10

8. 10

9)  7

9. 7

10)  7

10. 7

11)  7


11. 7

12)  10

12. 10

13)  9

13. 9

14)  3

14. 3

15)  10

15. 10

**Line Plot**

