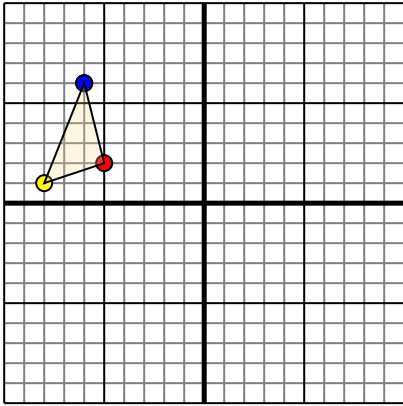




Translate each shape as described.

1)

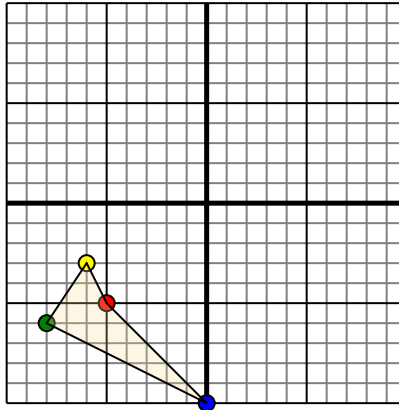


The shape above has the following coordinates:

- A. (-5,2)
- B. (-8,1)
- C. (-6,6)

Move the shape 6 units right and 10 units down.

2)

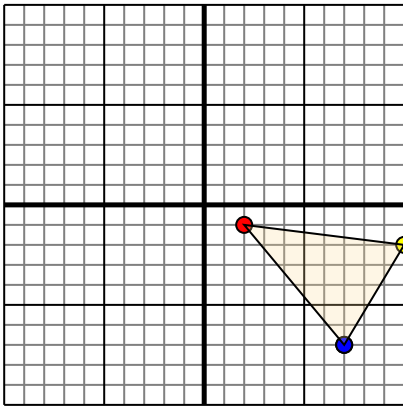


The shape above has the following coordinates:

- A. (-5,-5)
- B. (-6,-3)
- C. (-8,-6)
- D. (0,-10)

Move the shape 7 units right and 10 units up.

3)

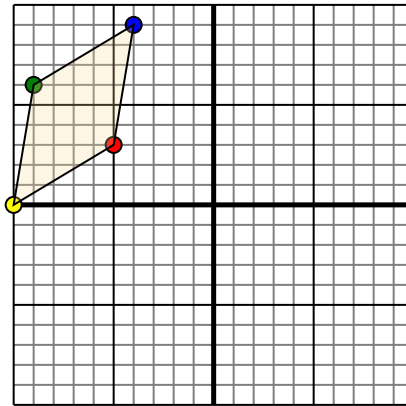


The shape above has the following coordinates:

- A. (2,-1)
- B. (10,-2)
- C. (7,-7)

Move the shape 7 units left and 5 units up.

4)



The shape above has the following coordinates:

- A. (-5,3)
- B. (-10,0)
- C. (-9,6)
- D. (-4,9)

Move the shape 5 units right and 3 units down.

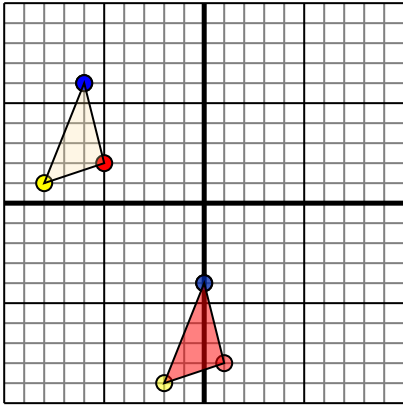
Answers

- 1. \_\_\_\_\_ [Graph](#)
- 2. \_\_\_\_\_ [Graph](#)
- 3. \_\_\_\_\_ [Graph](#)
- 4. \_\_\_\_\_ [Graph](#)



Translate each shape as described.

1)

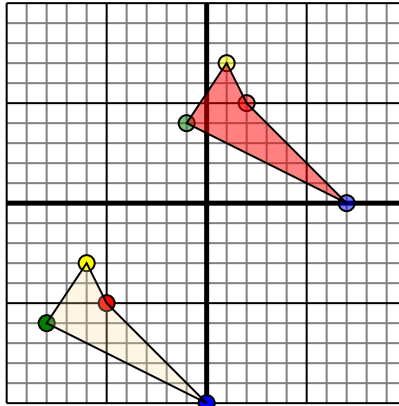


The shape above has the following coordinates:

- A. (-5,2)
- B. (-8,1)
- C. (-6,6)

Move the shape 6 units right and 10 units down.

2)

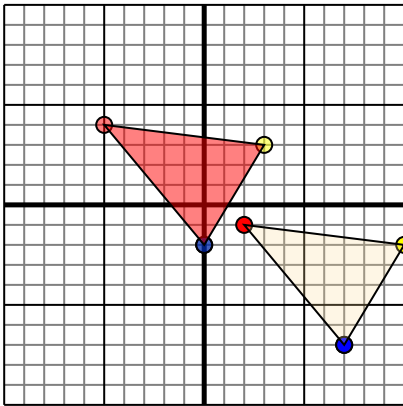


The shape above has the following coordinates:

- A. (-5,-5)
- B. (-6,-3)
- C. (-8,-6)
- D. (0,-10)

Move the shape 7 units right and 10 units up.

3)

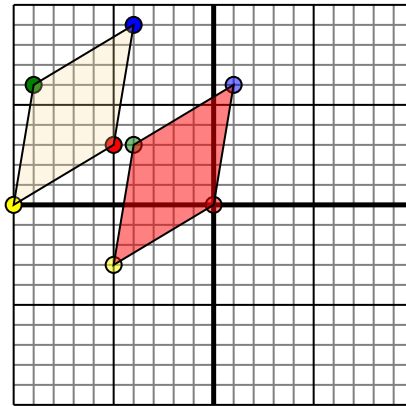


The shape above has the following coordinates:

- A. (2,-1)
- B. (10,-2)
- C. (7,-7)

Move the shape 7 units left and 5 units up.

4)



The shape above has the following coordinates:

- A. (-5,3)
- B. (-10,0)
- C. (-9,6)
- D. (-4,9)

Move the shape 5 units right and 3 units down.

**Answers**

1. **1,-8** **-2,-9** **0,-4** [Graph](#)
2. **2,5** **1,7** **-1,4** **7,0** [Graph](#)
3. **-5,4** **3,3** **0,-2** [Graph](#)
4. **0,0** **-5,-3** **-4,3** **1,6** [Graph](#)