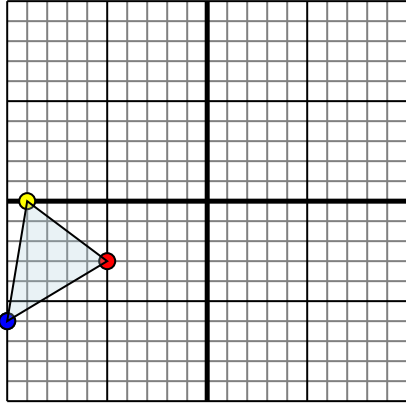




Reflect each shape as described.

1)

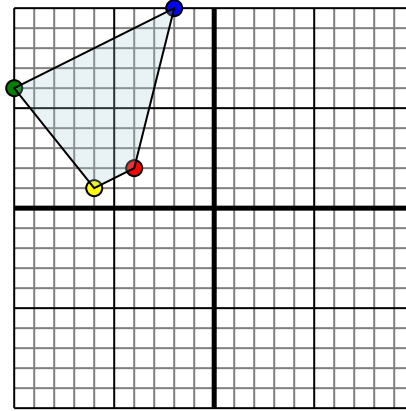


The shape above has the following coordinates:

- A. (-5,-3)
- B. (-9,0)
- C. (-10,-6)

Reflect the shape over the Y axis.

2)

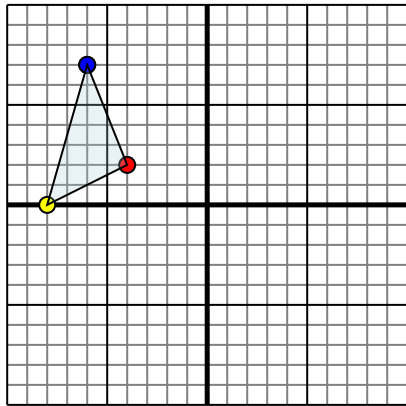


The shape above has the following coordinates:

- A. (-4,2)
- B. (-6,1)
- C. (-10,6)
- D. (-2,10)

Reflect the shape over the Y axis.

3)

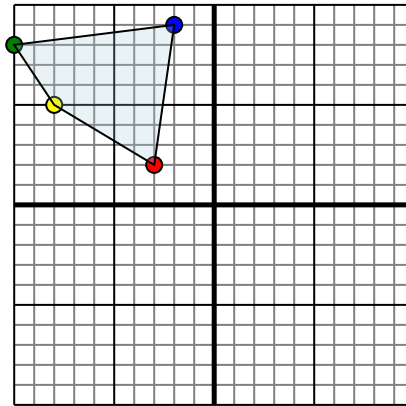


The shape above has the following coordinates:

- A. (-4,2)
- B. (-8,0)
- C. (-6,7)

Reflect the shape over the X axis.

4)



The shape above has the following coordinates:

- A. (-3,2)
- B. (-8,5)
- C. (-10,8)
- D. (-2,9)

Reflect the shape over the Y axis.

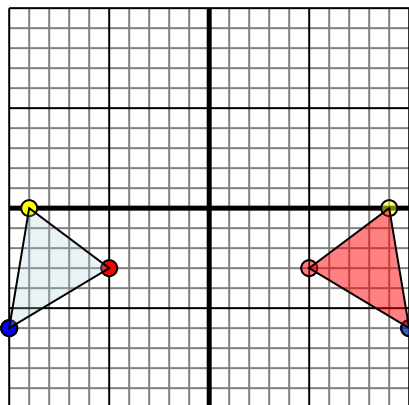
Answers

- 1. \_\_\_\_\_
- 2. \_\_\_\_\_
- 3. \_\_\_\_\_
- 4. \_\_\_\_\_



Reflect each shape as described.

1)

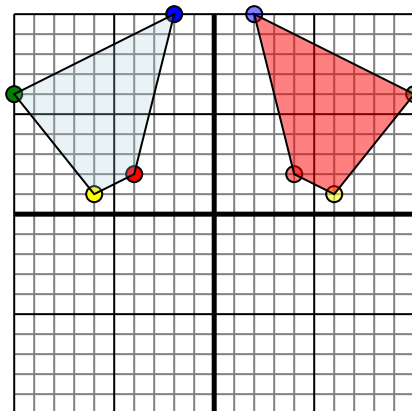


The shape above has the following coordinates:

- A. (-5,-3)
- B. (-9,0)
- C. (-10,-6)

Reflect the shape over the Y axis.

2)

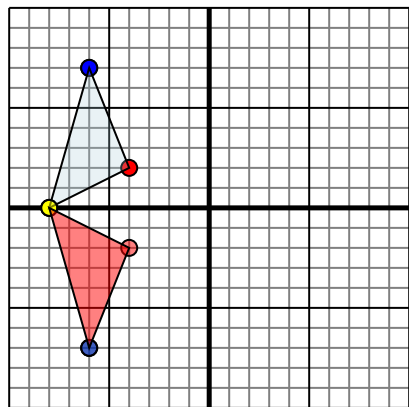


The shape above has the following coordinates:

- A. (-4,2)
- B. (-6,1)
- C. (-10,6)
- D. (-2,10)

Reflect the shape over the Y axis.

3)

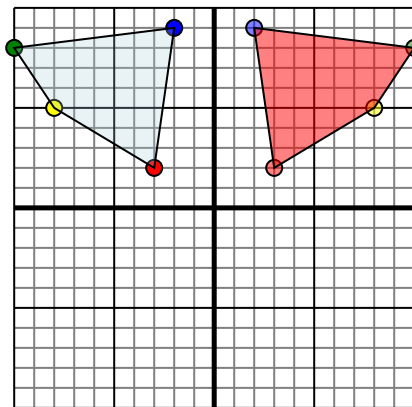


The shape above has the following coordinates:

- A. (-4,2)
- B. (-8,0)
- C. (-6,7)

Reflect the shape over the X axis.

4)



The shape above has the following coordinates:

- A. (-3,2)
- B. (-8,5)
- C. (-10,8)
- D. (-2,9)

Reflect the shape over the Y axis.

**Answers**

1. 5,-3 9,0 10,-6 Graph
2. 4,2 6,1 10,6 2,10 Graph
3. -4,-2 -8,0 -6,-7 Graph
4. 3,2 8,5 10,8 2,9 Graph