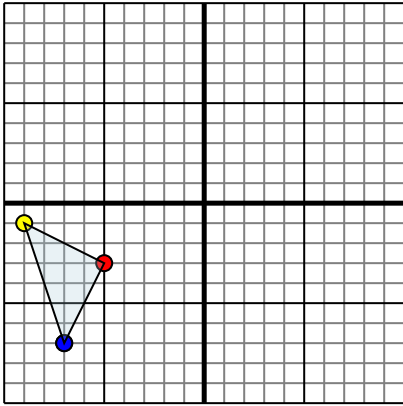




Reflect each shape as described.

1)

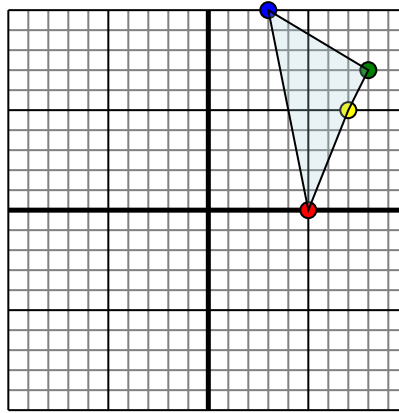


The shape above has the following coordinates:

- A. (-5,-3)
- B. (-9,-1)
- C. (-7,-7)

Reflect the shape over the X axis.

2)

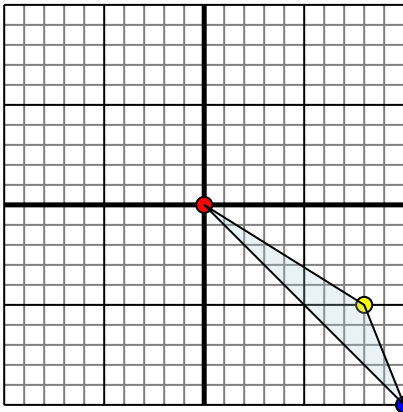


The shape above has the following coordinates:

- A. (5,0)
- B. (7,5)
- C. (8,7)
- D. (3,10)

Reflect the shape over the X axis.

3)

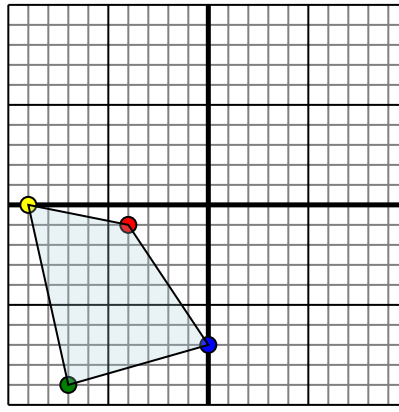


The shape above has the following coordinates:

- A. (0,0)
- B. (8,-5)
- C. (10,-10)

Reflect the shape over the Y axis.

4)



The shape above has the following coordinates:

- A. (-4,-1)
- B. (-9,0)
- C. (-7,-9)
- D. (0,-7)

Reflect the shape over the Y axis.

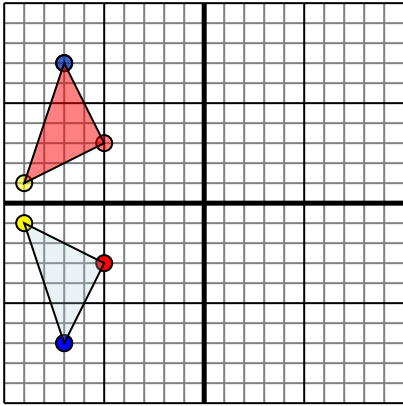
Answers

- 1. \_\_\_\_\_
- 2. \_\_\_\_\_
- 3. \_\_\_\_\_
- 4. \_\_\_\_\_



Reflect each shape as described.

1)

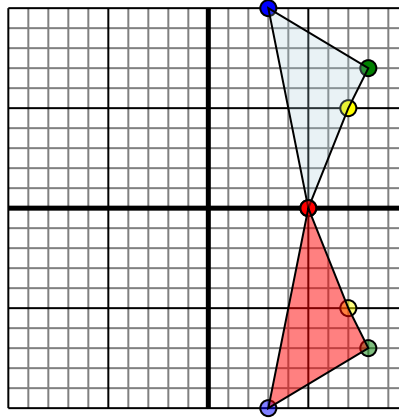


The shape above has the following coordinates:

- A. (-5,-3)
- B. (-9,-1)
- C. (-7,-7)

Reflect the shape over the X axis.

2)

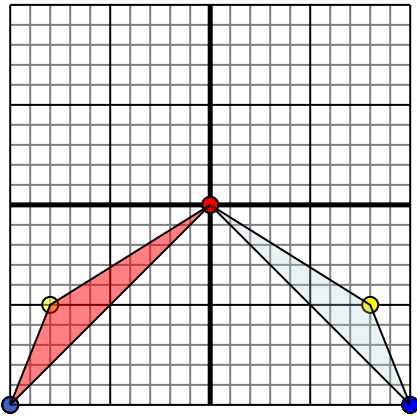


The shape above has the following coordinates:

- A. (5,0)
- B. (7,5)
- C. (8,7)
- D. (3,10)

Reflect the shape over the X axis.

3)

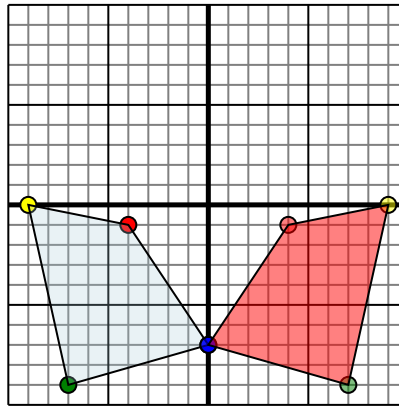


The shape above has the following coordinates:

- A. (0,0)
- B. (8,-5)
- C. (10,-10)

Reflect the shape over the Y axis.

4)



The shape above has the following coordinates:

- A. (-4,-1)
- B. (-9,0)
- C. (-7,-9)
- D. (0,-7)

Reflect the shape over the Y axis.

**Answers**

1. **-5,3** **-9,1** **-7,7** Graph
2. **5,0** **7,-5** **8,-7** **3,-10** Graph
3. **0,0** **-8,-5** **-10,-10** Graph
4. **4,-1** **9,0** **7,-9** **0,-7** Graph