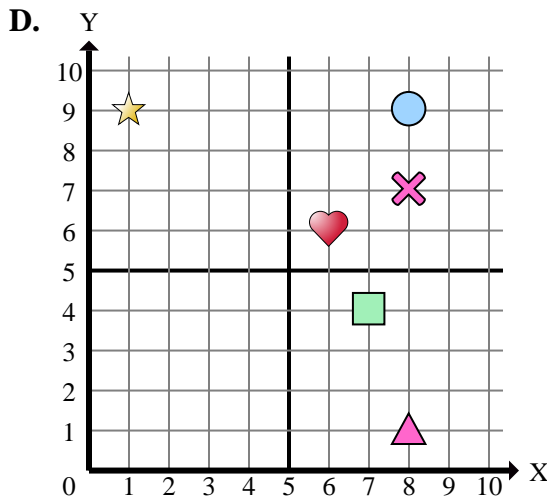
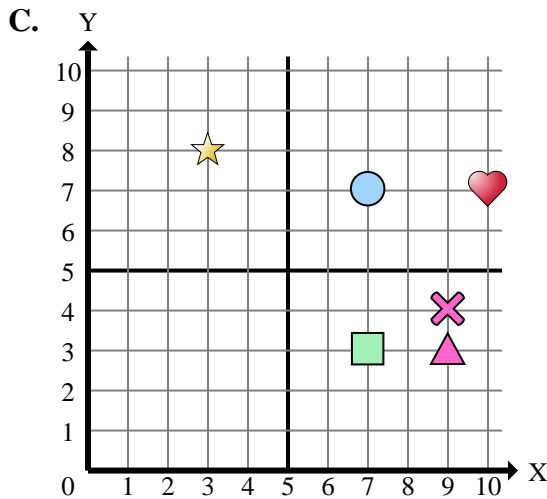
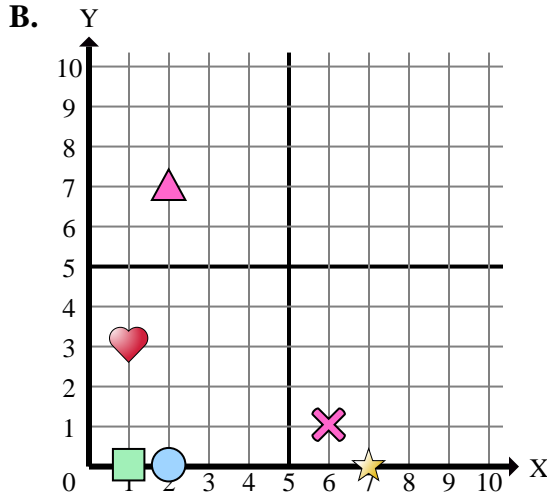
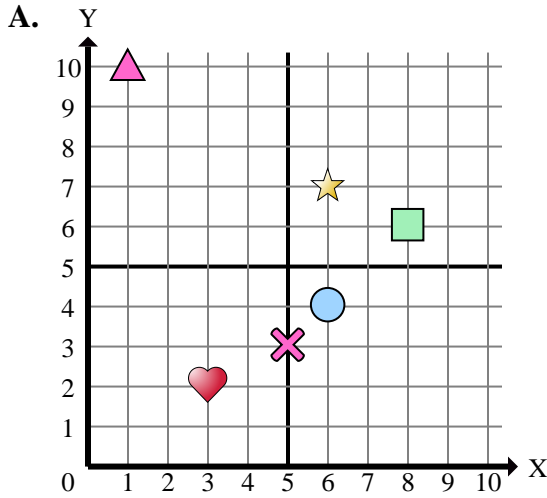




Determine which coordinate plane answers each question.



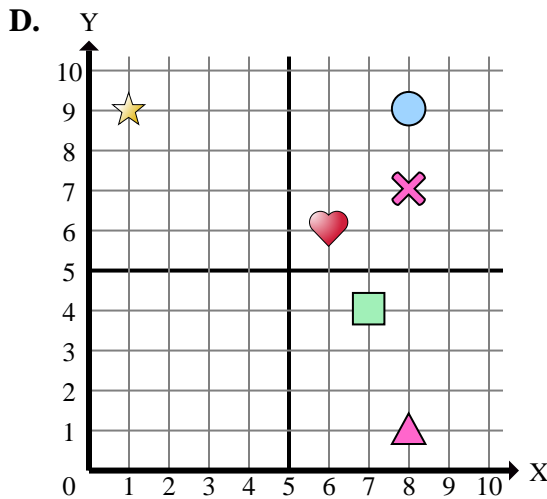
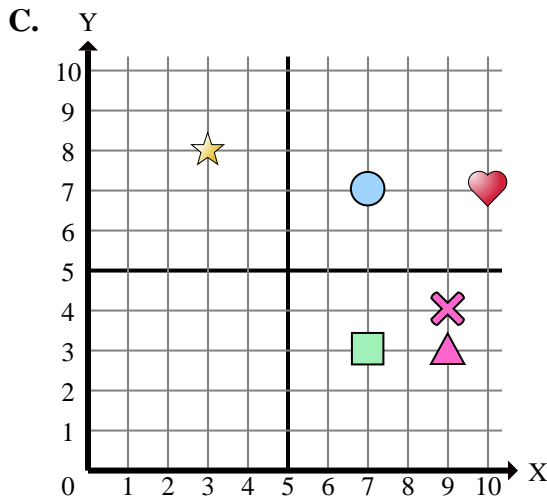
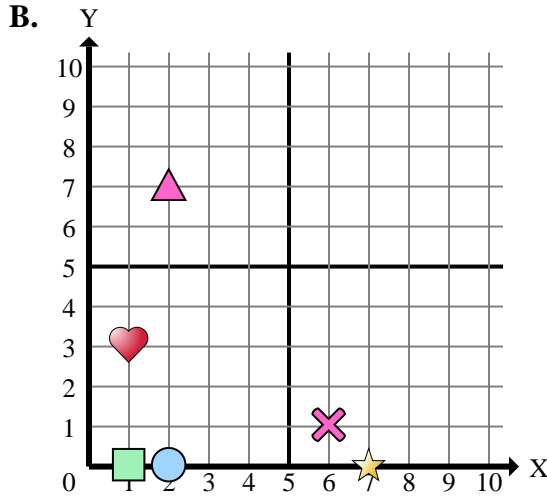
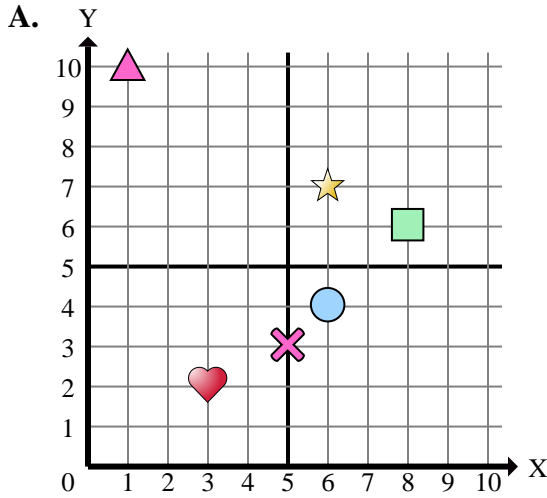
- 1) Which coordinate plane has a shape at (8 , 9)?
- 2) Which coordinate plane has a shape at (7 , 3)?
- 3) Which coordinate plane has a shape at (9 , 3)?
- 4) Which coordinate plane has a shape at (2 , 0)?
- 5) Which coordinate plane has a shape at (3 , 8)?
- 6) Which coordinate plane has a shape at (3 , 2)?
- 7) Which coordinate plane has a shape at (7 , 4)?
- 8) Which coordinate plane has a shape at (8 , 1)?
- 9) Which coordinate plane has a shape at (8 , 6)?
- 10) Which coordinate plane has a shape at (6 , 7)?
- 11) Which coordinate plane has a shape at (1 , 10)?
- 12) Which coordinate plane has a shape at (6 , 6)?
- 13) Which coordinate plane has a shape at (1 , 3)?
- 14) Which coordinate plane has a shape at (9 , 4)?
- 15) Which coordinate plane has a shape at (6 , 4)?

Answers

1. _____
2. _____
3. _____
4. _____
5. _____
6. _____
7. _____
8. _____
9. _____
10. _____
11. _____
12. _____
13. _____
14. _____
15. _____



Determine which coordinate plane answers each question.



- 1) Which coordinate plane has a shape at (8 , 9)?
- 2) Which coordinate plane has a shape at (7 , 3)?
- 3) Which coordinate plane has a shape at (9 , 3)?
- 4) Which coordinate plane has a shape at (2 , 0)?
- 5) Which coordinate plane has a shape at (3 , 8)?
- 6) Which coordinate plane has a shape at (3 , 2)?
- 7) Which coordinate plane has a shape at (7 , 4)?
- 8) Which coordinate plane has a shape at (8 , 1)?
- 9) Which coordinate plane has a shape at (8 , 6)?
- 10) Which coordinate plane has a shape at (6 , 7)?
- 11) Which coordinate plane has a shape at (1 , 10)?
- 12) Which coordinate plane has a shape at (6 , 6)?
- 13) Which coordinate plane has a shape at (1 , 3)?
- 14) Which coordinate plane has a shape at (9 , 4)?
- 15) Which coordinate plane has a shape at (6 , 4)?

Answers

1. **D**
2. **C**
3. **C**
4. **B**
5. **C**
6. **A**
7. **D**
8. **D**
9. **A**
10. **A**
11. **A**
12. **D**
13. **B**
14. **C**
15. **A**