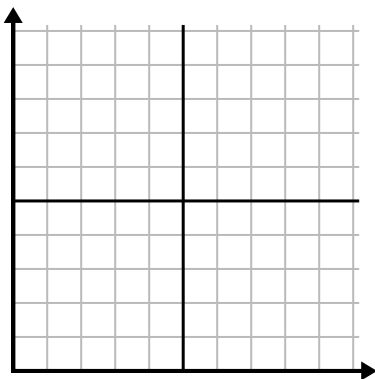




Fill in the grid using the chart.

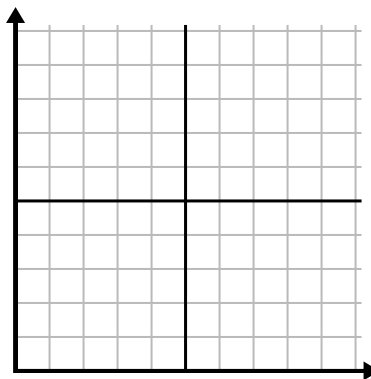
1)

Day	1	2	3	4	5	6
Texts Sent	5	40	45	30	10	25



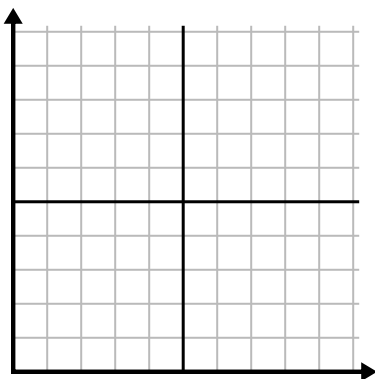
2)

Day	1	2	3	4	5
Youtube Videos Watched	150	120	90	210	60



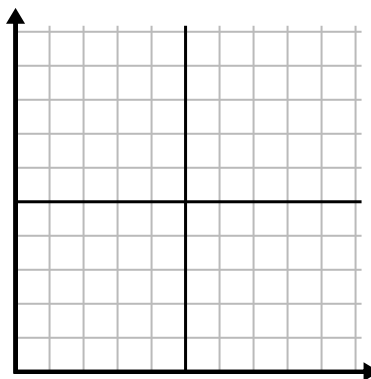
3)

Year	1	2	3	4	5
Ink Cartridges Used	10	14	8	2	18



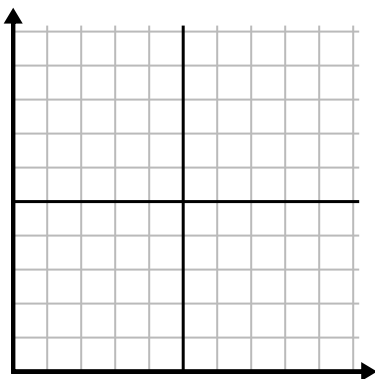
4)

Week	1	2	3	4	5
Water Used (gallons)	10	40	100	20	90



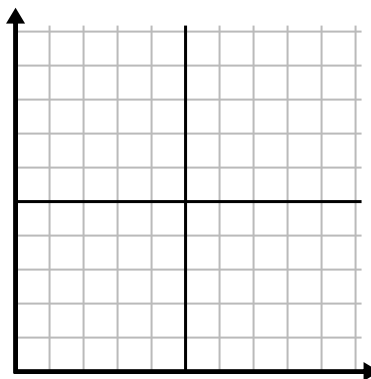
5)

Month	1	2	3	4	5	6
Electric Bill Price	50	25	225	150	75	175



6)

Day	1	2	3	4	5	6
Money Spent	3	4	2	10	9	6

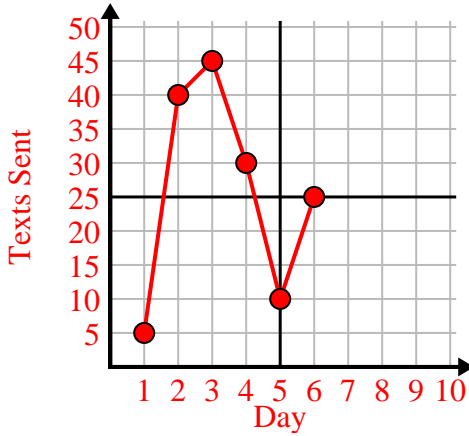




Fill in the grid using the chart.

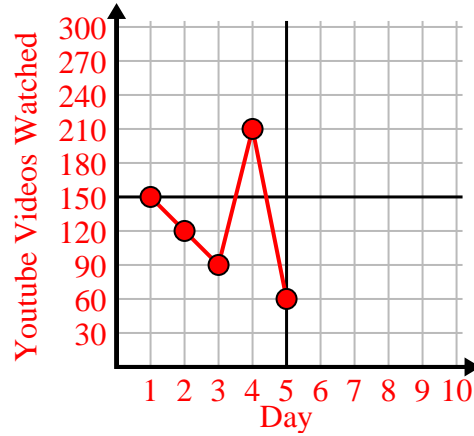
1)

Day	1	2	3	4	5	6
Texts Sent	5	40	45	30	10	25



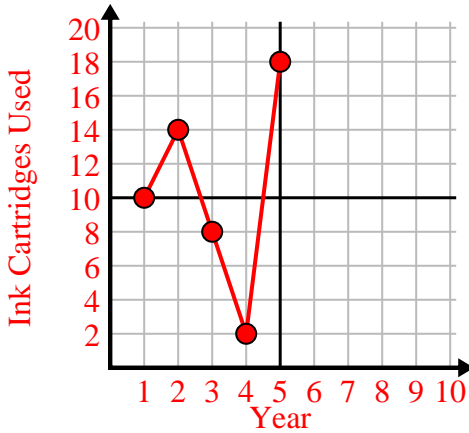
2)

Day	1	2	3	4	5
Youtube Videos Watched	150	120	90	210	60



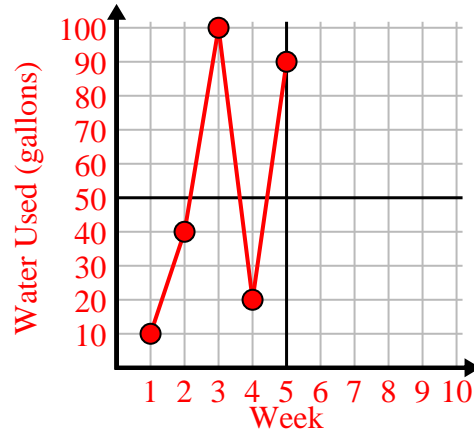
3)

Year	1	2	3	4	5
Ink Cartridges Used	10	14	8	2	18



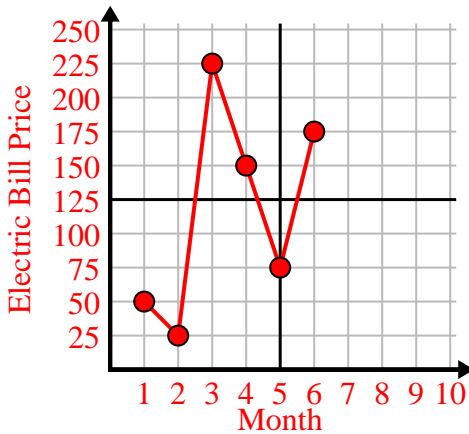
4)

Week	1	2	3	4	5
Water Used (gallons)	10	40	100	20	90



5)

Month	1	2	3	4	5	6
Electric Bill Price	50	25	225	150	75	175



6)

Day	1	2	3	4	5	6
Money Spent	3	4	2	10	9	6

